

جدول الضرب



إعداد المعلمة: أحلام الشهراني

مقدمة

الحمد لله والصلاة والسلام على أشرف الأنبياء
والمرسلين سيدنا محمد وعلى آله وصحبه أجمعين

يطيب لي ويسعدني أن أقدم لكم هذا العمل


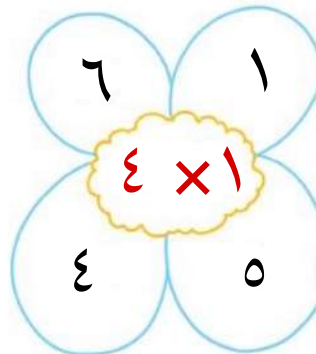
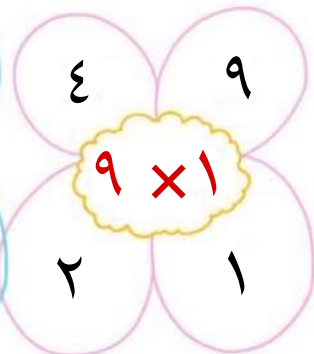
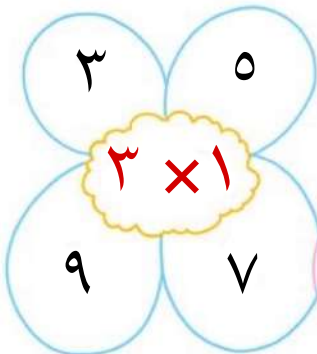
جدول الضرب بالطريقة الإيطالية على أمل أن تجدوا
فيه الفائدة فيما يعود بالنفع على طلابنا وطالباتنا






























































وآخر دعوانا أن الحمد لله رب العالمين

• أكمل الجدول :


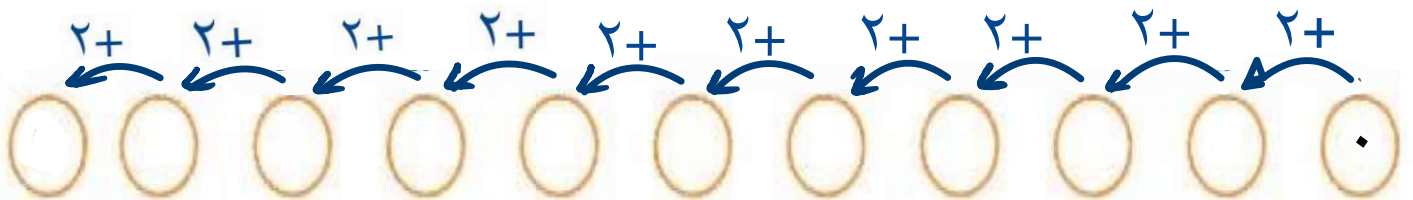
										$0 = 0 \times 1$
										$1 = 1 \times 1$
										$2 = 2 \times 1$
										$3 = 3 \times 1$
										$4 = 4 \times 1$
										$... = 5 \times 1$
										$... = 6 \times 1$
										$... = 7 \times 1$
										$... = 8 \times 1$
										$... = 9 \times 1$
										$... = 10 \times 1$

• أختار الإجابة الصحيحة من بين الأربع خيارات .



										$0 = 0 \times 2$
										$2 = 1 \times 2$
										$\dots = 2 \times 2$
										$\dots = 3 \times 2$
										$\dots = 4 \times 2$
										$\dots = 5 \times 2$
										$\dots = 6 \times 2$
										$\dots = 7 \times 2$
										$\dots = 8 \times 2$
										$\dots = 9 \times 2$
										$\dots = 10 \times 2$

• أضيف ٢ كل مرة ثم أكتب العدد :



جدول الضرب ٢ عبارة عن زيادة الرقم الأساسي إلى الضعف

جدول الضرب ٣ الاسم :

• أكمل الجدول :
























































										$0 = 0 \times 3$
										$3 = 1 \times 3$
										$6 = 2 \times 3$
										$9 = 3 \times 3$
										$\dots = 4 \times 3$
										$\dots = 5 \times 3$
										$\dots = 6 \times 3$
										$\dots = 7 \times 3$
										$\dots = 8 \times 3$
										$\dots = 9 \times 3$
										$\dots = 10 \times 3$

• أضيف ٣ كل مرة ، ثم اكتب العدد :



٣٠				١٨		١٢		٦	٣	٠
----	--	--	--	----	--	----	--	---	---	---

• أوجد ناتج الضرب : $6 \times 3 = \dots$ ، $3 \times 6 = \dots$

										$0 = 0 \times 4$
										$4 = 1 \times 4$
										$8 = 2 \times 4$
										$12 = 3 \times 4$
										$\dots = 4 \times 4$
										$\dots = 5 \times 4$
										$\dots = 6 \times 4$
										$\dots = 7 \times 4$
										$\dots = 8 \times 4$
										$\dots = 9 \times 4$
										$\dots = 10 \times 4$

لون كل حاصل ضرب بلون ناتجه :

$= 1 \times 4$

$= 7 \times 4$

$= 3 \times 4$

$= 8 \times 4$

$= 10 \times 4$

٢٨



٤٠



٤



١٢



٣٢



جدول الضرب ٥ الاسم :

أكمل الجدول :

										$٠ = ٠ \times ٥$
										$٥ = ١ \times ٥$
										$١٠ = ٢ \times ٥$
										$١٥ = ٣ \times ٥$
										$... = ٤ \times ٥$
										$... = ٥ \times ٥$
										$... = ٦ \times ٥$
										$... = ٧ \times ٥$
										$... = ٨ \times ٥$
										$... = ٩ \times ٥$
										$... = ١٠ \times ٥$

قم باختيار المضاعفات الصحيحة في ٥ واكتشف الحيوان الذي ستضيفه الفتاة



$٣٥ = ٧ \times ٥$

$٢٠ = ٤ \times ٥$

$٤٥ = ٩ \times ٥$

$١٥ = ٣ \times ٥$



$١٠ = ٢ \times ٥$

$٢٥ = ٥ \times ٥$

$٥٤ = ٩ \times ٥$

$٢٠ = ٣ \times ٥$



جدول الضرب ٦ الاسم :

• أكمل الجدول :

										$0 = 0 \times 6$
										$6 = 1 \times 6$
										$12 = 2 \times 6$
										$18 = 3 \times 6$
										$\dots = 4 \times 6$
										$\dots = 5 \times 6$
										$\dots = 6 \times 6$
										$\dots = 7 \times 6$
										$\dots = 8 \times 6$
										$\dots = 9 \times 6$
										$\dots = 10 \times 6$

• اختر النتيجة الصحيحة لكل عملية ضرب .

$(42 - 36) = 6 \times 7$

$(54 - 45) = 9 \times 6$

$(32 - 24) = 4 \times 6$

$(48 - 54) = 8 \times 6$






















































$(30 - 35) = 5 \times 6$

$(18 - 12) = 3 \times 6$

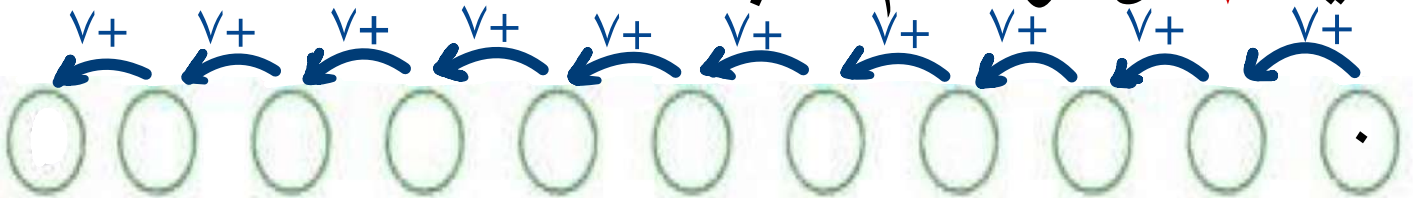
الاسم :

جدول الضرب ٧


• أكمل الجدول :

										$0 = 0 \times 7$
										$7 = 1 \times 7$
										$14 = 2 \times 7$
										$\dots = 3 \times 7$
										$\dots = 4 \times 7$
										$\dots = 5 \times 7$
										$\dots = 6 \times 7$
										$\dots = 7 \times 7$
										$\dots = 8 \times 7$
										$\dots = 9 \times 7$
										$\dots = 10 \times 7$

• أضيف ٧ كل مرة ، ثم أكتب العدد :


























































• أوجد حاصل الضرب .

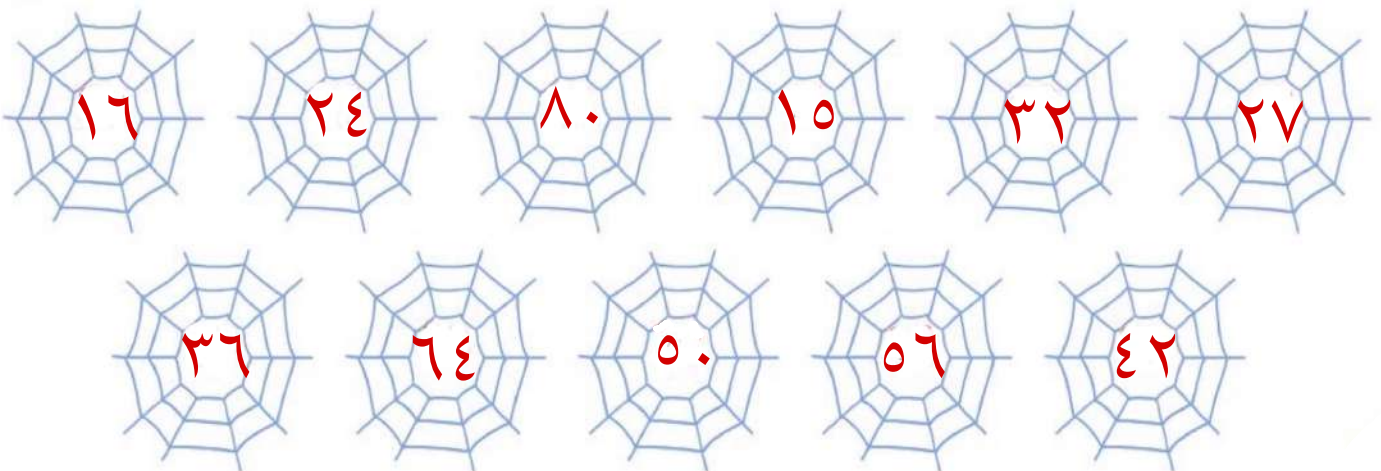
١٠	٩	٥	٨	٧	
					٧
					٦

جدول الضرب ٨ الاسم :

أكمل الجدول :

										$0 = 0 \times 8$
										$8 = 1 \times 8$
										$16 = 2 \times 8$
										$24 = 3 \times 8$
										$\dots = 4 \times 8$
										$\dots = 5 \times 8$
										$\dots = 6 \times 8$
										$\dots = 7 \times 8$
										$\dots = 8 \times 8$
										$\dots = 9 \times 8$
										$\dots = 10 \times 8$











لون خيوط العنكبوت التي تحتوي على نواتج جدول الضرب ٨.




الاسم :

جدول الضرب ٩

أكمل الجدول :


										$0 = 0 \times 9$
										$9 = 1 \times 9$
										$18 = 2 \times 9$
										$\dots = 3 \times 9$
										$\dots = 4 \times 9$
										$\dots = 5 \times 9$
										$\dots = 6 \times 9$
										$\dots = 7 \times 9$
										$\dots = 8 \times 9$
										$\dots = 9 \times 9$
										$\dots = 10 \times 9$

أختر الإجابة الصحيحة .




 2×9

 ١٨ ٩٠ ٥٤



 8×9



 ٣٦ ١٨ ٧٢




 5×9

 ٩ ٤٥ ٢٧


أكمل الجدول :

	$0 = 0 \times 1$
	$1 = 1 \times 1$
	$2 = 2 \times 1$
	$3 = 3 \times 1$
	$... = 4 \times 1$
	$... = 5 \times 1$
	$... = 6 \times 1$
	$... = 7 \times 1$
	$... = 8 \times 1$
	$... = 9 \times 1$
	$10 = 10 \times 1$


لون كل حاصل ضرب بلون ناتجه .




٨٠



٤٠

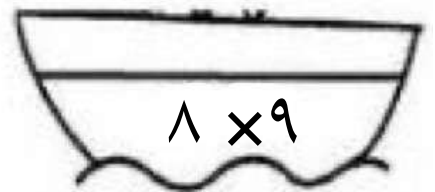
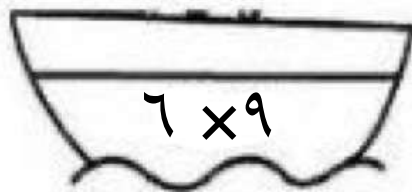
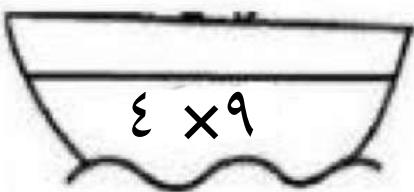
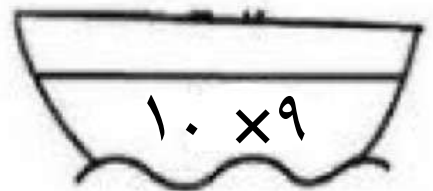
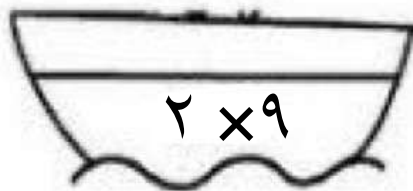
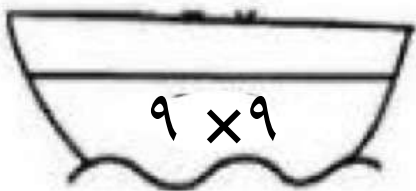
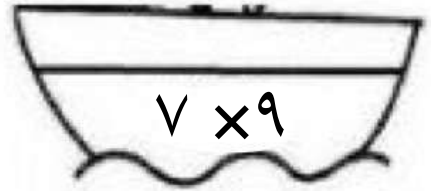
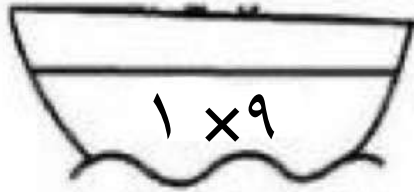
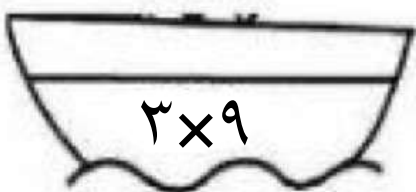
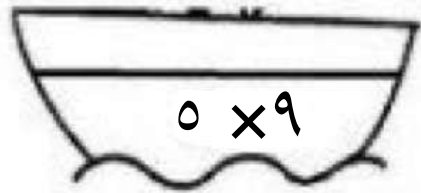
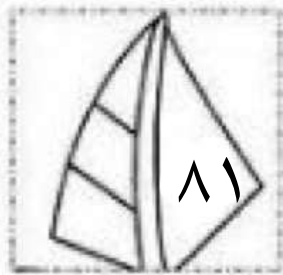
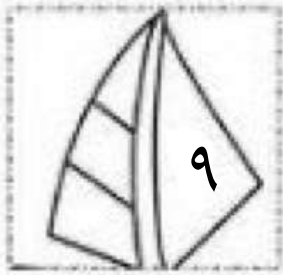
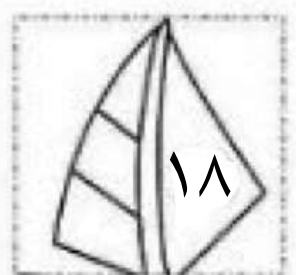
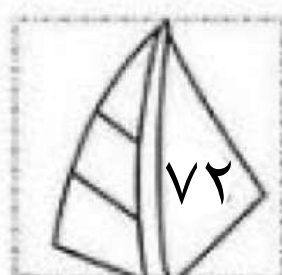
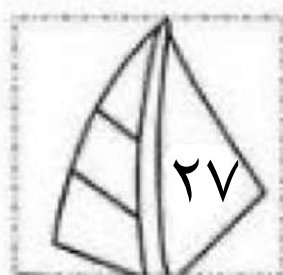
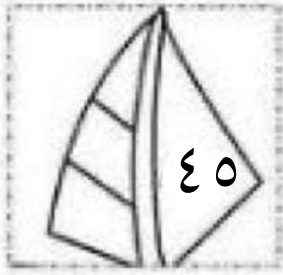

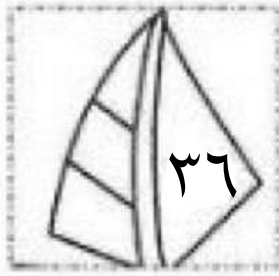
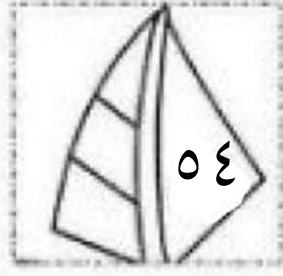
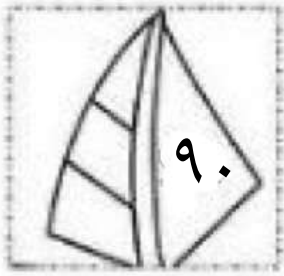






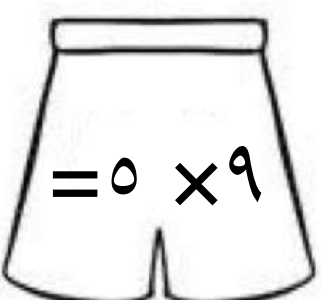
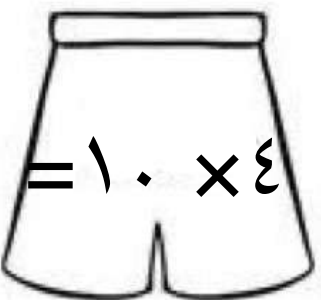
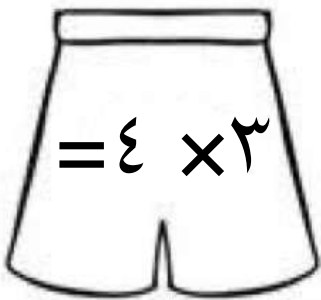
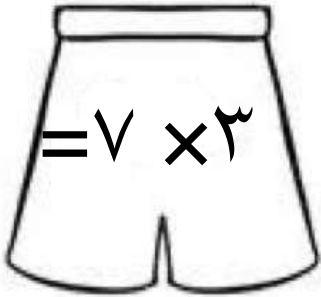
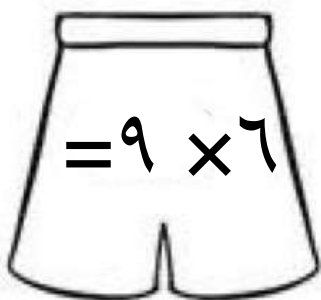

٢٠






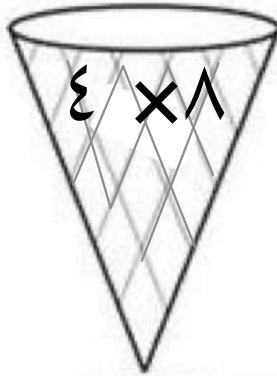
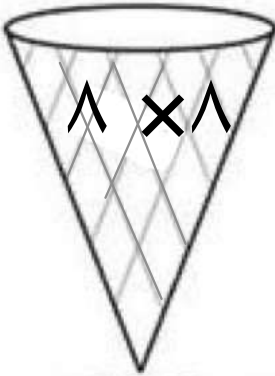
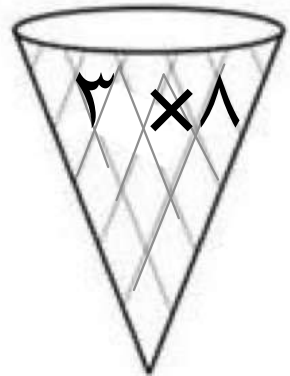
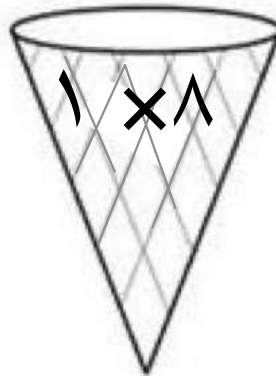
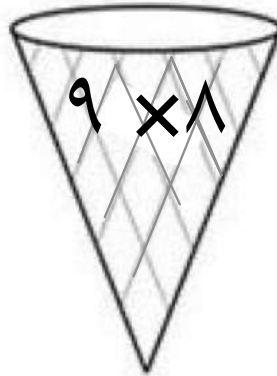
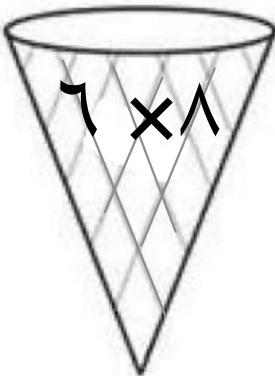
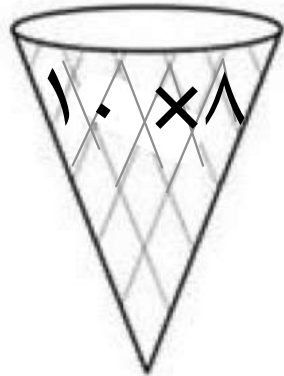
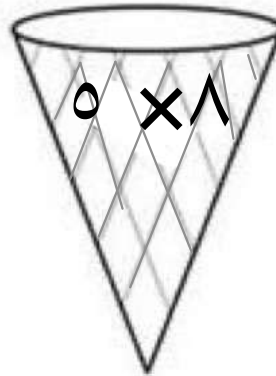
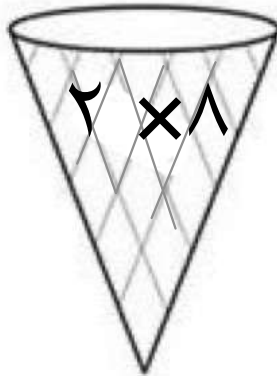
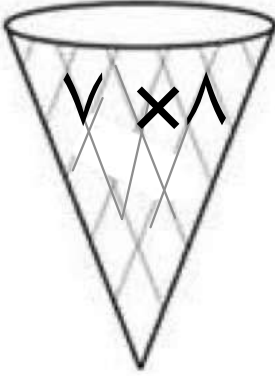
١٠٠

لون كل حاصل ضرب وناجيه بنفس اللون .





• لون كل حاصل ضرب وناتجه بنفس اللون .



أوجد حاصل الضرب :

$= 1 \times 4$

$= 3 \times 2$

$= 6 \times 6$

$= 4 \times 0$

$= 1 \times 1$

$= 7 \times 9$

$= 3 \times 3$

$= 7 \times 6$

$= 3 \times 7$

$= 4 \times 4$

$= 0 \times 7$

$= 10 \times 1$

$= 0 \times 1$

$= 2 \times 6$

أكمل التمرين .

كن متميز بحفظك لجدول الضرب 👍

$0 = 0 \times 1$	$4 = 4 \times 1$	$3 = 3 \times 1$	$2 = 2 \times 1$	$1 = 1 \times 1$
$10 = 0 \times 2$	$8 = 4 \times 2$	$6 = 3 \times 2$	$4 = 2 \times 2$	$2 = 1 \times 2$
$15 = 0 \times 3$	$12 = 4 \times 3$	$9 = 3 \times 3$	$6 = 2 \times 3$	$3 = 1 \times 3$
$20 = 0 \times 4$	$16 = 4 \times 4$	$12 = 3 \times 4$	$8 = 2 \times 4$	$4 = 1 \times 4$
$25 = 0 \times 5$	$20 = 4 \times 5$	$15 = 3 \times 5$	$10 = 2 \times 5$	$5 = 1 \times 5$
$30 = 0 \times 6$	$24 = 4 \times 6$	$18 = 3 \times 6$	$12 = 2 \times 6$	$6 = 1 \times 6$
$35 = 0 \times 7$	$28 = 4 \times 7$	$21 = 3 \times 7$	$14 = 2 \times 7$	$7 = 1 \times 7$
$40 = 0 \times 8$	$32 = 4 \times 8$	$24 = 3 \times 8$	$16 = 2 \times 8$	$8 = 1 \times 8$
$45 = 0 \times 9$	$36 = 4 \times 9$	$27 = 3 \times 9$	$18 = 2 \times 9$	$9 = 1 \times 9$
$50 = 0 \times 10$	$40 = 4 \times 10$	$30 = 3 \times 10$	$20 = 2 \times 10$	$10 = 1 \times 10$

$10 = 10 \times 1$	$9 = 9 \times 1$	$8 = 8 \times 1$	$7 = 7 \times 1$	$6 = 6 \times 1$
$20 = 10 \times 2$	$18 = 9 \times 2$	$16 = 8 \times 2$	$14 = 7 \times 2$	$12 = 6 \times 2$
$30 = 10 \times 3$	$27 = 9 \times 3$	$24 = 8 \times 3$	$21 = 7 \times 3$	$18 = 6 \times 3$
$40 = 10 \times 4$	$36 = 9 \times 4$	$32 = 8 \times 4$	$28 = 7 \times 4$	$24 = 6 \times 4$
$50 = 10 \times 5$	$45 = 9 \times 5$	$40 = 8 \times 5$	$35 = 7 \times 5$	$30 = 6 \times 5$
$60 = 10 \times 6$	$54 = 9 \times 6$	$48 = 8 \times 6$	$42 = 7 \times 6$	$36 = 6 \times 6$
$70 = 10 \times 7$	$63 = 9 \times 7$	$56 = 8 \times 7$	$49 = 7 \times 7$	$42 = 6 \times 7$
$80 = 10 \times 8$	$72 = 9 \times 8$	$64 = 8 \times 8$	$56 = 7 \times 8$	$48 = 6 \times 8$
$90 = 10 \times 9$	$81 = 9 \times 9$	$72 = 8 \times 9$	$63 = 7 \times 9$	$54 = 6 \times 9$
$100 = 10 \times 10$	$90 = 9 \times 10$	$80 = 8 \times 10$	$70 = 7 \times 10$	$60 = 6 \times 10$