

# CHAPTER(3) Vectors(المتجهات)

## Physical Quantities (الكميات الفيزيائية)

### Vector quantities

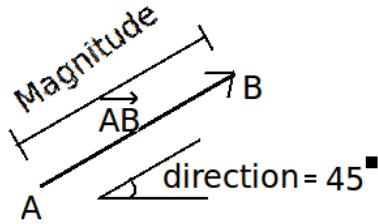
magnitude and direction

لها مقدار واتجاه

لها قواعد جمع وضرب خاصة بالمتجهات

Exp. Displacement, Velocity, Acceleration

ويمكن تمثيل المتجه بالرسم (مقدار واتجاه)



### Scalar Quantities

Magnitude

لها مقدار فقط

تتبع قواعد الجمع والضرب العادي

Exp. Pressure , Temperature , Distance, speed etc.

The magnitude of a vector can be never negative

→ The magnitude is always positive

Magnitude	المقدار او القيمة المطلقة (دائما موجب)
Sum	مجموع
The angle	الزاوية
x- component	المركبة x- (قيمة المتجه في الاتجاه x)
Unit vector notation	متجهات الوحدة ( i , j , k )
Origin	مركز الإحداثيات (نقطة الأصل (0,0))
Coordinate system	نظام الإحداثيات ( x, y, z )
horizontal component	المركبة الأفقية (قيمة المتجه في الاتجاه x)
vertical component	المركبة الرأسية (قيمة المتجه في الاتجاه y)
Direction	الاتجاه (يقصد الزاوية مع x الموجب عكس الساعة)
Vector product	الضرب الاتجاهي
Scalar product	الضرب القياسي



د. هنادي فرحان

## Addition of vectors (جمع المتجهات)

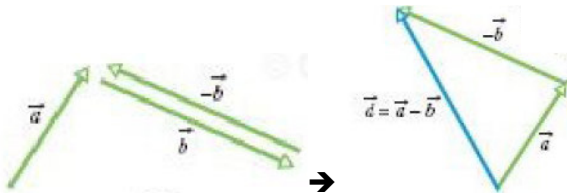
### Adding Vectors Geometrically

جمع المتجهات هندسيا



#### Properties of vector addition:

- 1- Commutative law:  $\vec{A} + \vec{B} = \vec{B} + \vec{A}$
- 2- Associative law:  $(\vec{A} + \vec{B}) + \vec{C} = \vec{A} + (\vec{B} + \vec{C})$
- 3- The negative vector of vector  $\vec{A}$  is denoted by vector  $-\vec{A}$  and is a vector with the same magnitude as of vector  $\vec{A}$  But with exactly opposite direction.
- 4- Vectors Subtraction:  $\vec{d} = \vec{a} - \vec{b} = \vec{a} + (-\vec{b})$



### Adding Vectors Analytically

جمع المتجهات تحليليا

$$\vec{r} = \vec{a} \pm \vec{b}$$

$$\vec{a} = a_x \hat{i} + a_y \hat{j} + a_z \hat{k}$$

$$\pm \quad \pm \quad \pm \quad \pm$$

$$\vec{b} = b_x \hat{i} + b_y \hat{j} + b_z \hat{k}$$

$$= \quad = \quad = \quad =$$

$$\vec{r} = r_x \hat{i} + r_y \hat{j} + r_z \hat{k}$$

$$|r| = r = \sqrt{r_x^2 + r_y^2}, \quad \theta = \tan^{-1} \frac{r_y}{r_x}$$

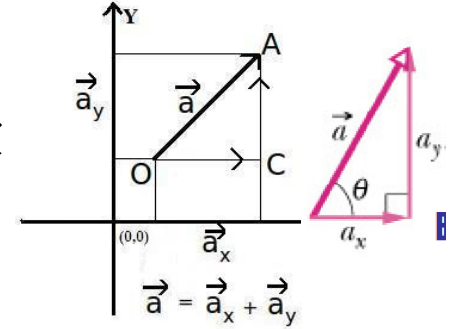
Vector addition	$\mathbf{A} + \mathbf{B} = (A_x + B_x) \hat{i} + (A_y + B_y) \hat{j} + (A_z + B_z) \hat{k}$
Vector subtraction	$\mathbf{A} - \mathbf{B} = (A_x - B_x) \hat{i} + (A_y - B_y) \hat{j} + (A_z - B_z) \hat{k}$



## Components of a Two dimensional vector:

$a_x$  and  $a_y$  are called the components of vector  $\vec{a}$

تسمى عملية تحليل المتجه الى مركباته بـ Resolving Vectors

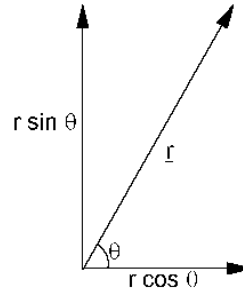


## To resolve two dimensional vector:

### x-component of vector $\vec{a}$

$$a_x = a \cos \theta$$

$a$  is the magnitude of vector  $\vec{a}$  (قيمة المتجه)  
 $\theta$  is the angle made by the vector with x axes  
 (الزاوية المحصورة بين المتجه ومحور  $x$  الموجب)  
 $a_x$  is a vector along x-axis



### y-component of vector $\vec{a}$

$$a_y = a \sin \theta$$

$a$  is the magnitude of vector  $\vec{a}$  (قيمة المتجه)  
 $\theta$  is the angle made by the vector with x axes  
 (الزاوية المحصورة بين المتجه ومحور  $x$  الموجب)  
 $a_y$  is a vector along y-axis

## يراجع تحليل المركبات كما تم شرحه في المحاضرة

ويمكن كتابة التحليل بصورة عامة كالتالي:

1- اختيار الزاوية الصغيرة والقريبة من محور  $x$  (الموجب أو السالب) مثل  $\theta_1, \theta_2, \theta_3, \theta_4$

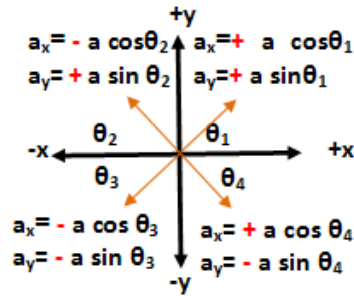
2- كتابة التحليل العام حيث أن

$$a_x = a \cos \theta, \quad a_y = a \sin \theta$$

3- وضع إشارة المحاور للمركبات وذلك حسب موقع المتجه في أي ربع (كما في الشكل)

### Unit vectors

Magnitude	direction
1	$i \rightarrow x$ -axis
1	$j \rightarrow y$ -axis
1	$k \rightarrow z$ -axis





د. مناه فرحان

## كيف نعبر عن المتجهات؟ How to express vectors?

### Unit vectors notation

### Magnitude-angle notation

$$\vec{a} = a_x i + a_y j$$

$$|a|, \theta$$

معطى في السؤال

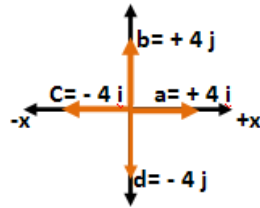
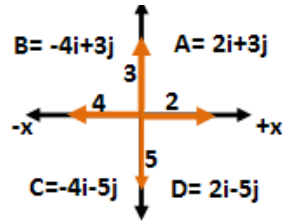
$$a_x = +3 \quad a_y = -2$$

$$\vec{a} = +3i - 2j$$

$$a_x = -4 \quad a_y = -1$$

$$\vec{a} = -4i - j$$

من الرسم



بإيجاد مركباته

إذا أعطى المتجه على صورة مقدار  $a$  واتجاه  $\theta$  فإننا نحلله

$$a_x = a \cos \theta$$

$$a_y = a \sin \theta$$

ومن ثم يكتب المتجه بدلالة متجهات الوحدة:

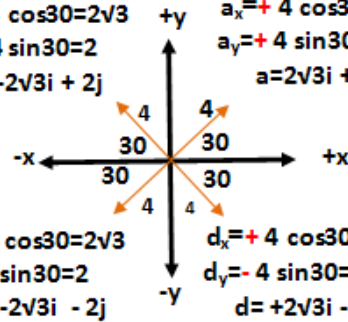
$$\vec{a} = a \cos \theta i + a \sin \theta j$$

$$\vec{a} = a_x i + a_y j$$

$$b_x = -4 \cos 30 = -2\sqrt{3} \quad a_x = +4 \cos 30 = 2\sqrt{3}$$

$$b_y = +4 \sin 30 = 2 \quad a_y = +4 \sin 30 = 2$$

$$b = -2\sqrt{3}i + 2j \quad a = 2\sqrt{3}i + 2j$$



$$c_x = -4 \cos 30 = -2\sqrt{3} \quad d_x = +4 \cos 30 = 2\sqrt{3}$$

$$c_y = -4 \sin 30 = -2 \quad d_y = -4 \sin 30 = -2$$

$$c = -2\sqrt{3}i - 2j \quad d = +2\sqrt{3}i - 2j$$

$$|a| = a = \sqrt{a_x^2 + a_y^2}$$

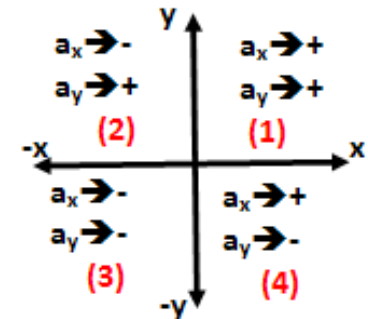
$$\theta = \tan^{-1} \frac{a_y}{a_x}$$

مع مراعاة وضع إشارة المركبات عند حساب الزاوية

$$\theta = \begin{cases} + & \text{counter clockwise} \\ - & \text{clockwise} \end{cases}$$

+ عكس عقارب الساعة

- مع عقارب الساعة



Unit vectors

Magnitude	direction
1	$i \rightarrow$ x-axis
1	$j \rightarrow$ y-axis
1	$k \rightarrow$ z-axis





## Product of Vectors : ضرب المتجهات

### Vector \* Scalar = Vector

$$\vec{b} = n\vec{a}$$

$$\text{Exp. } \vec{a} = 3i + 4j$$

$$\vec{b} = 2\vec{a} = 6i + 8j$$

$$|b| = |2\vec{a}| = \sqrt{6^2 + 8^2}$$

### Vector . Vector = Scalar Scalar (dot) Product

$$1-\vec{a} \cdot \vec{b} = |a| \cdot |b| \cos \phi$$

$$2-\vec{a} \cdot \vec{b} = a_x b_x + a_y b_y + a_z b_z$$

$$3-\vec{a} \cdot \vec{b} = \vec{b} \cdot \vec{a}$$

$$4-i \cdot i = j \cdot j = k \cdot k = 1$$

المتجهان متشابهان = 1

$$i \cdot j = j \cdot k = k \cdot i = 0$$

المتجهان مختلفان = 0

$$5-\vec{a} \cdot \vec{b} = 0 \rightarrow \phi = 90^\circ$$

المتجهان متعامدان

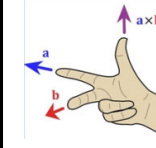
$$\vec{a} \cdot \vec{b} = ab \rightarrow \phi = 0$$

$$\vec{a} \cdot \vec{b} = -ab \rightarrow \phi = 180$$

### Vector X Vector = Vector Vector (cross) product

$$1-\vec{c} = \vec{a} \times \vec{b} = |a| \cdot |b| \sin \phi$$

$\vec{c}$  is perpendicular to both  $\vec{a}$  and  $\vec{b}$



يحدد الاتجاه باستخدام قاعدة اليد اليمنى

$$2-\vec{c} = \vec{a} \times \vec{b} = \begin{vmatrix} +i & -j & +k \\ a_x & a_y & a_z \\ b_x & b_y & b_z \end{vmatrix}$$

$$3-\vec{a} \times \vec{b} = -\vec{b} \times \vec{a}$$

$$4-i \times i = j \times j = k \times k = 0$$

المتجهان متشابهان = 0

المتجهان مختلفان = المتجه الثالث والإشارة

تتبع قاعدة اليد اليمنى

$$ijk \rightarrow (+), kji \rightarrow (-)$$

$$\text{Exp. } j \times k = +i, k \times j = -i$$

$$5-\phi = 0 \rightarrow \vec{a} \times \vec{b} = 0$$

المتجهان متوازيان

$$\phi = 90^\circ \rightarrow |\vec{a} \times \vec{b}|_{\max} = |a| |b|$$

المتجهان متعامدان

# Chapter 3

## VECTORS



# Learning Outcomes

***By the end of the chapter student should be able:***

- to define vector quantity and scalar quantity and differentiate between them.
- to add vectors geometrically and write the resultant equation.
- to identify vector addition properties: commutative law, associative law and vector subtraction.
- to find the inverse of any vector.
- to resolve any vector and find its x and y components.
- to calculate the magnitude and direction of vector.
- to identify the unit vector ( magnitude and direction) on three axes.
- to write a vector in unit vector notations.
- to differentiate between scalar and vector components of a vector.
- to add vectors by components.
- to multiply vector by scalar (either +ve or - ve no.).
- to identify the two kinds of multiplication of a vector by another vector.



# Learning Outcomes

***By the end of the chapter student should be able:***

- to calculate the scalar product of two vectors in terms of the magnitude of the two vectors and angle between them.
- to calculate the scalar product of unit vectors.
- to identify the properties of the scalar product at certain angles ( $=0,90,180$ ).
- to calculate the scalar product of two vectors when they are written in unit- vector notation.
- to define the properties of the scalar product at certain angles ( $=0,90,180$ ).
- to calculate the vector product of two vectors in terms of the magnitude of the two vectors and the angle between them, in magnitude and direction.
- to use the right-hand rule to find the direction of the vector product.
- to identify the properties of the scalar product at certain angles ( $=0,90,180$ ).
- to calculate the vector product of unit vectors.
- to calculate the magnitude of the vector product of two vectors when they are written in unit-vector notation .



# Physical Quantities

## Vector Quantities

magnitude

+

direction

Follow certain rules  
of addition and  
multiplication

## Scalar Quantities

+Ve Number

-Ve Number

Follow the rules of  
ordinary algebra



# Vectors Addition

## Adding Vectors Geometrically

- Vector equation
- Commutative Law
- Associative Law
- Vector Subtraction

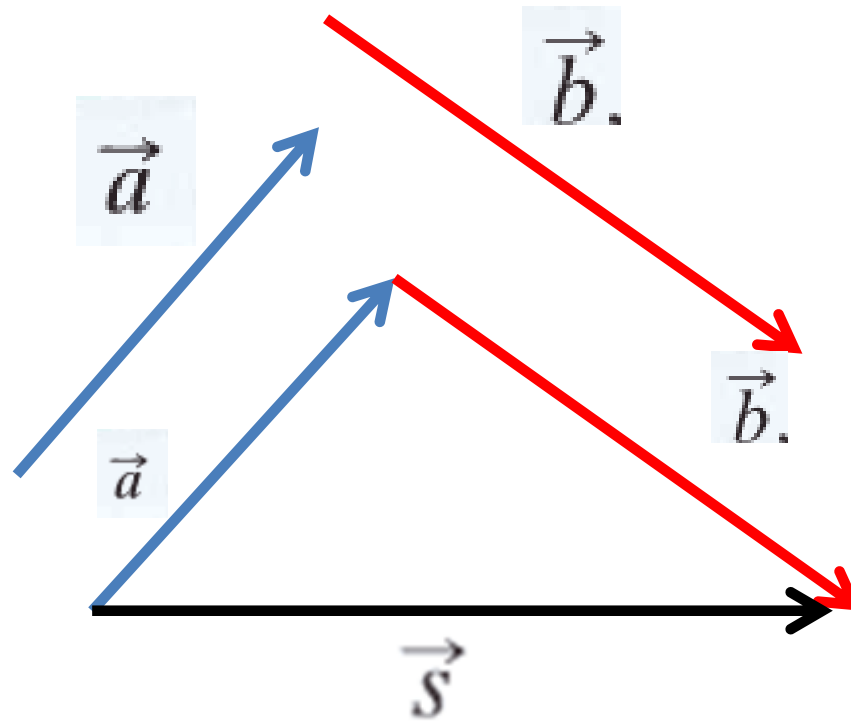
## Adding Vectors by Components

- Components
- resolving the vector
- writing a vector in magnitude- angle notation

- Unit Vectors
- writing a vector in Unit vector notation



# Adding Vectors Geometrically



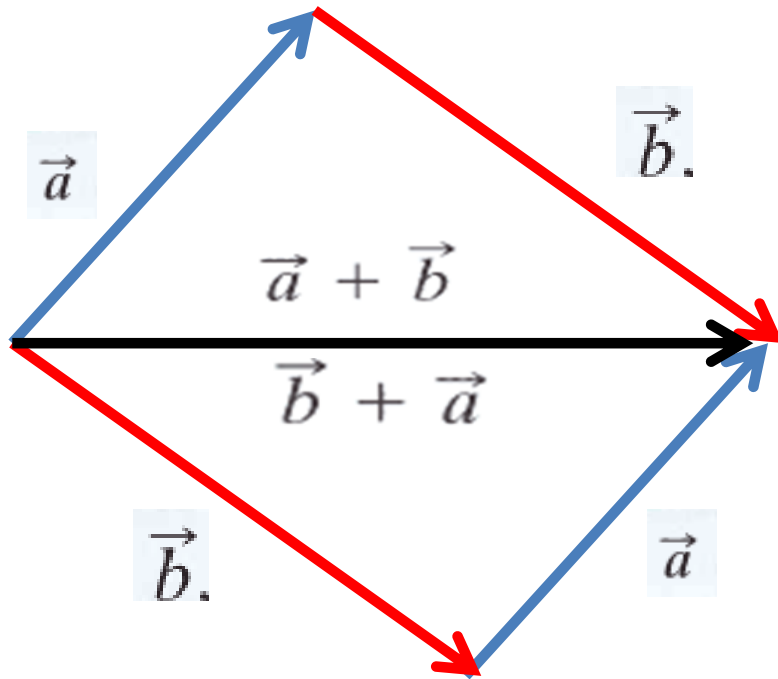
• Vector equation



$$\vec{s} = \vec{a} + \vec{b},$$



• Commutative Law

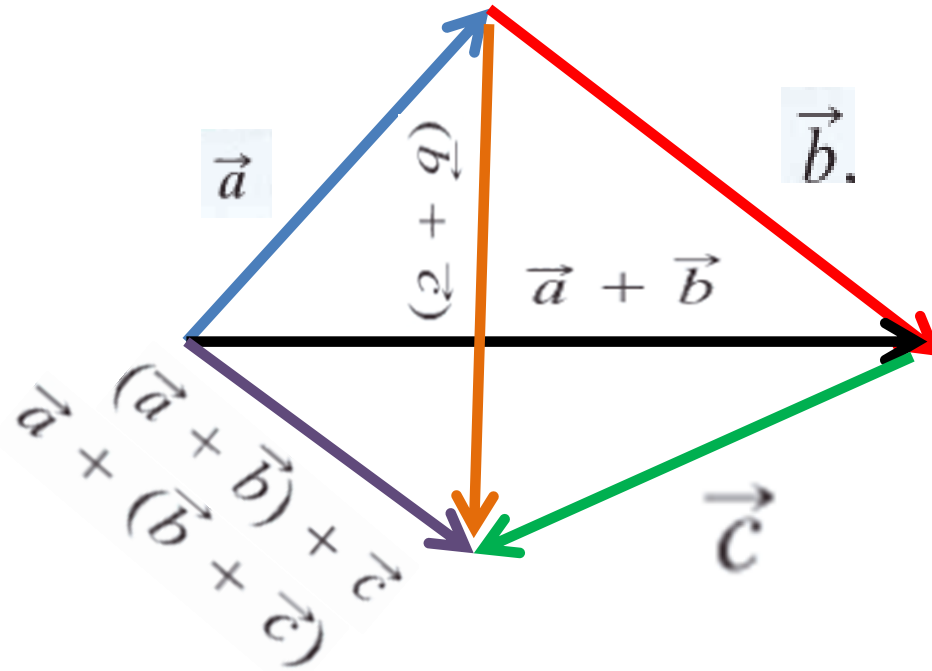


$$\vec{a} + \vec{b} = \vec{b} + \vec{a}$$





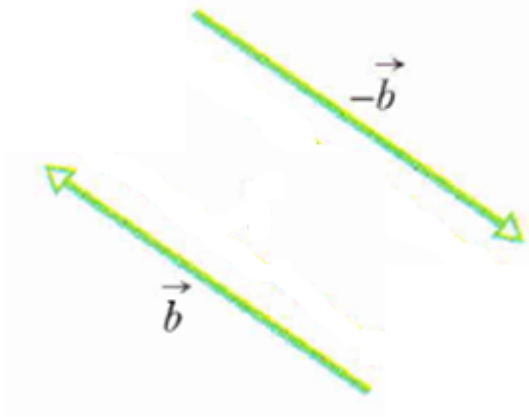
# • Associative Law



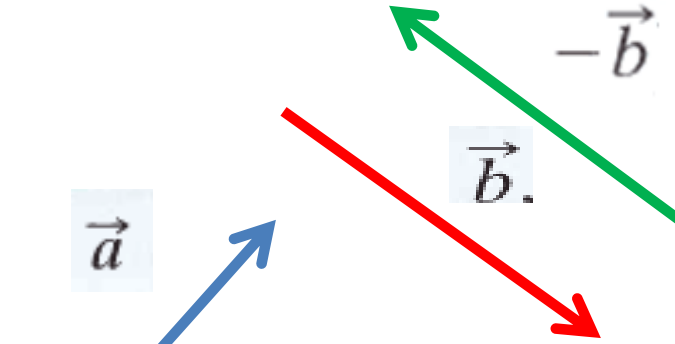
$$(\vec{a} + \vec{b}) + \vec{c} = \vec{a} + (\vec{b} + \vec{c})$$



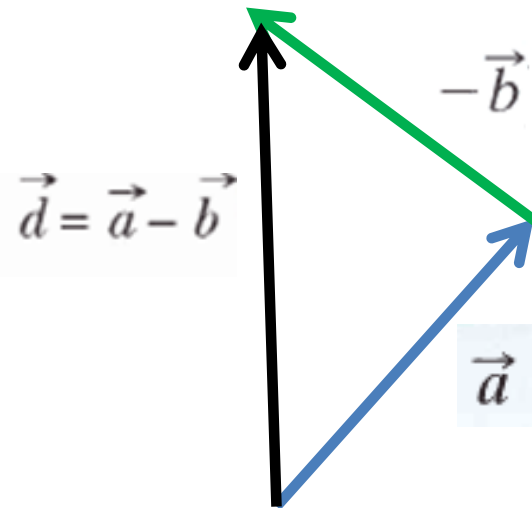
# • Vector Subtraction



$$\vec{b} + (-\vec{b}) = 0$$



$$\vec{a} - \vec{b} = \vec{a} + (-\vec{b})$$



$$\vec{d} = \vec{a} - \vec{b}$$

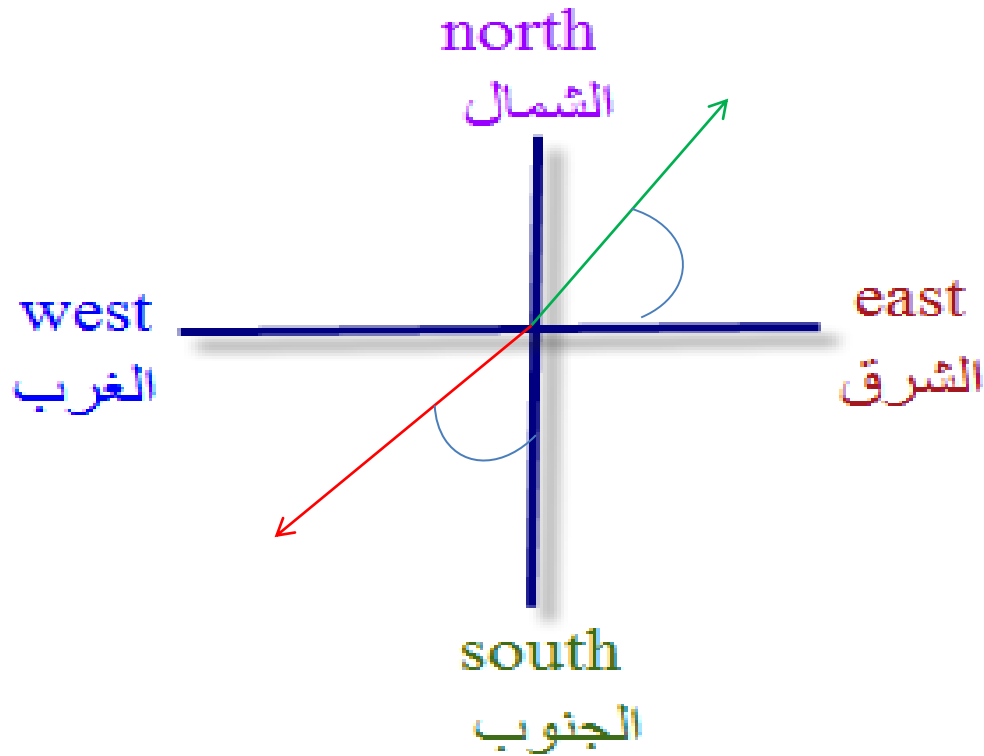
$$\vec{d} = \vec{a} - \vec{b} = \vec{a} + (-\vec{b})$$

## Sample Problem

## 3-1

In an orienteering class, you have the goal of moving as far (straight-line distance) from base camp as possible by making three straight-line moves. You may use the following displacements in any order: (a)  $\vec{a}$ , 2.0 km due east (directly toward the east); (b)  $\vec{b}$ , 2.0 km  $30^\circ$  north of east (at an angle of  $30^\circ$  toward the north from due east); (c)  $\vec{c}$ , 1.0 km due west. Alternatively, you may substitute either  $-\vec{b}$  for  $\vec{b}$  or  $-\vec{c}$  for  $\vec{c}$ . What is the greatest distance you can be from base camp at the end of the third displacement?





North of **east** = toward the north from due **east**

West of **south** = toward the west from due **south**



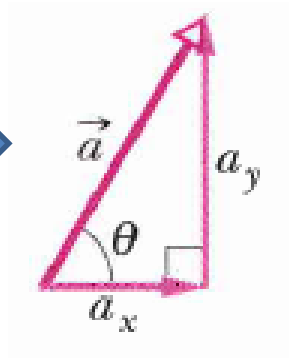
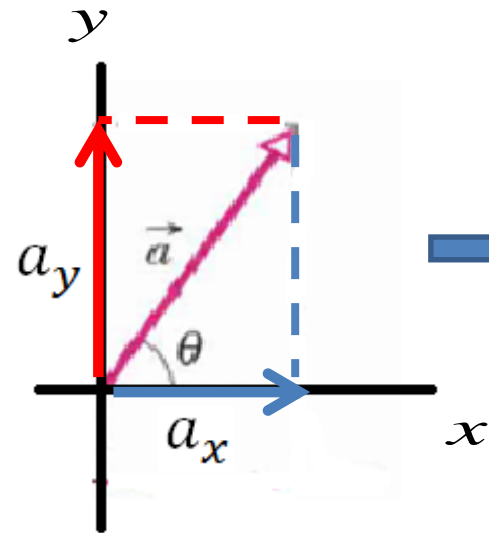


# Components of Vectors

- Resolving the vector is the process of finding the components



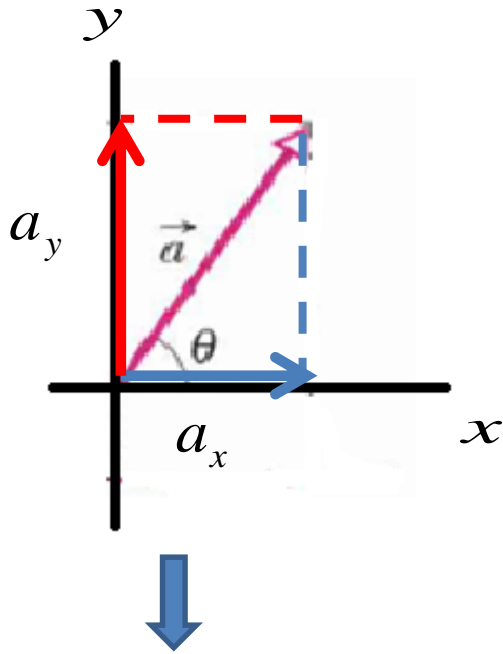
- Component is the projection of the vector on an axis



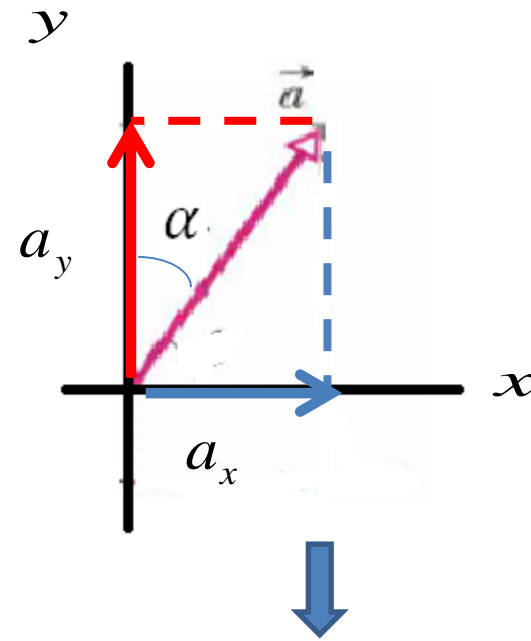
$$\cos \theta = \frac{a_x}{a} , \quad \sin \theta = \frac{a_y}{a}$$



$$a_x = a \cos \theta \text{ and } a_y = a \sin \theta$$



$$a_x = a \cos \theta \text{ and } a_y = a \sin \theta$$



$$a_x = a \sin \alpha \text{ and } a_y = a \cos \alpha$$



- Writing a vector in magnitude- angle notation

$\vec{a} : a_x \text{ and } a_y$

Magnitude

$$a = |\vec{a}| = \sqrt{a_x^2 + a_y^2}$$

Angle (Direction)

$$\tan \theta = \frac{a_y}{a_x} \Rightarrow \theta = \tan^{-1} \frac{a_y}{a_x}$$



$\vec{a}$

$a$  and  $\theta$

$a_x$  and  $a_y$

- Finding the components.

- Writing a vector in magnitude-angle notation

$$a_x = a \cos \theta$$

$$a_y = a \sin \theta$$

$$a = |\vec{a}| = \sqrt{a_x^2 + a_y^2}$$

$$\tan \theta = \frac{a_y}{a_x}$$

**Rem :** When use these formulas to find the components, the angle must be measured from positive X-axis, if clockwise put  $\theta$  -ve if counterclockwise put  $\theta$  +ve.



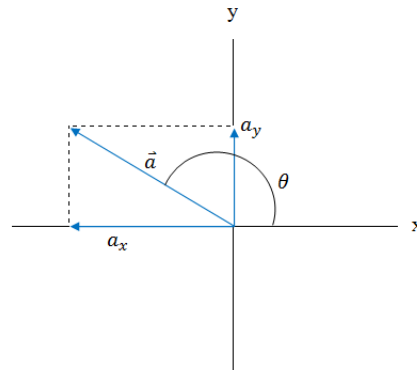
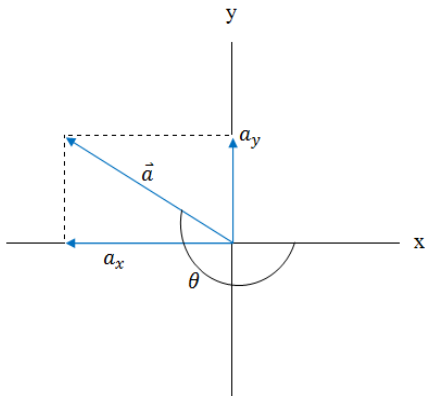
# How to find the components of a vector in different positions?

When the angle is from the +ve x-axis

When the angle is from any different axis

Clockwise

Counter-clockwise

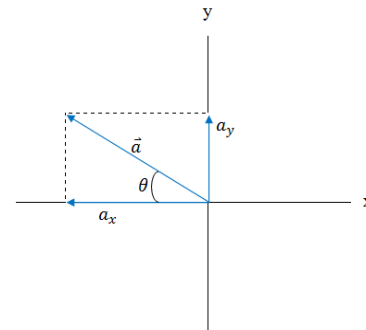


$$a_x = a \cos -\theta$$

$$a_y = a \sin -\theta$$

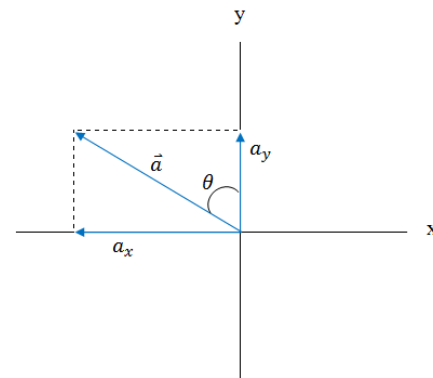
$$a_x = a \cos \theta$$

$$a_y = a \sin \theta$$



$$a_x = -a \cos \theta$$

$$a_y = +a \sin \theta$$

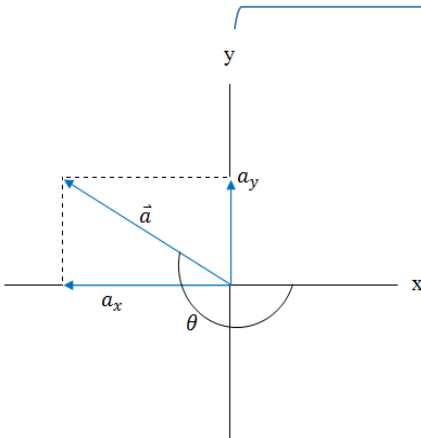


$$a_x = -a \sin \theta$$

$$a_y = +a \cos \theta$$

To find the components, when the angle is measured from the +ve x-axis use

$$a_x = a \cos \theta$$
$$a_y = a \sin \theta$$

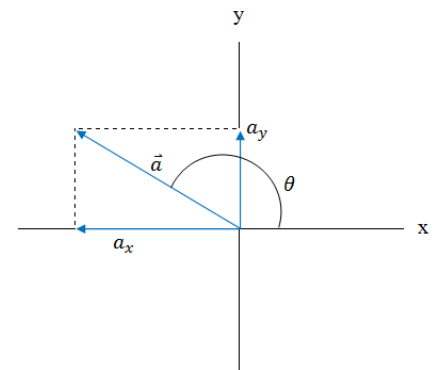


Put  $\theta = -ve$ , When the angle is measured clockwise from the +ve x-axis



$$a_x = a \cos -\theta$$

$$a_y = a \sin -\theta$$



Put  $\theta = +ve$ , When the angle is measured Counter-clockwise from the +ve x-axis

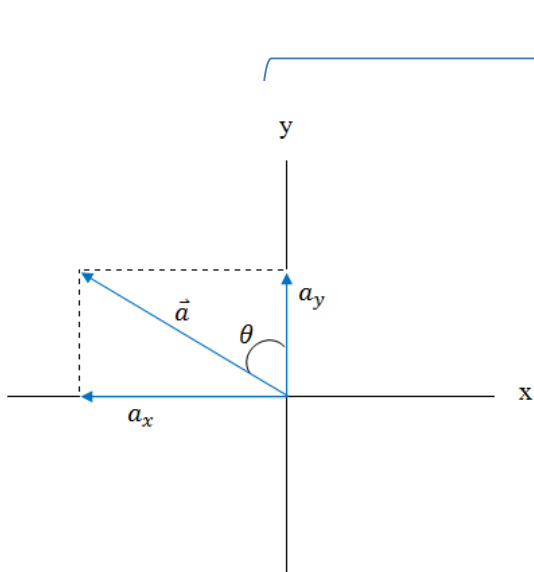


$$a_x = a \cos \theta$$

$$a_y = a \sin \theta$$

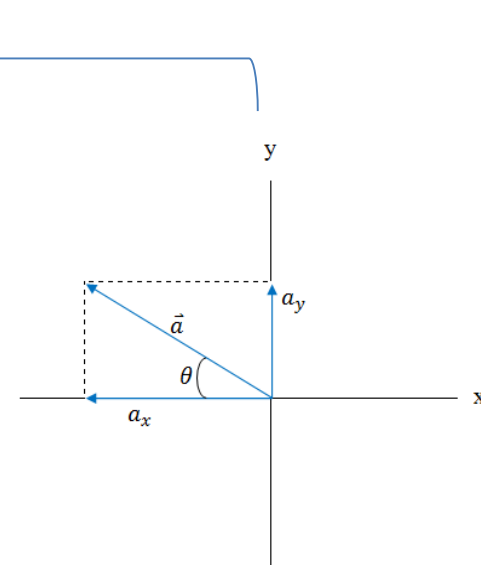
# To find the components , when the angle is measured from any axis even the +ve x-axis

- 1- Take the given angle with the axis
- 2- put the signs of the components according to their positions on the axes
- 3- put sine or cosine according to the angle position.



$$a_x = - a \sin \theta$$

$$a_y = + a \cos \theta$$



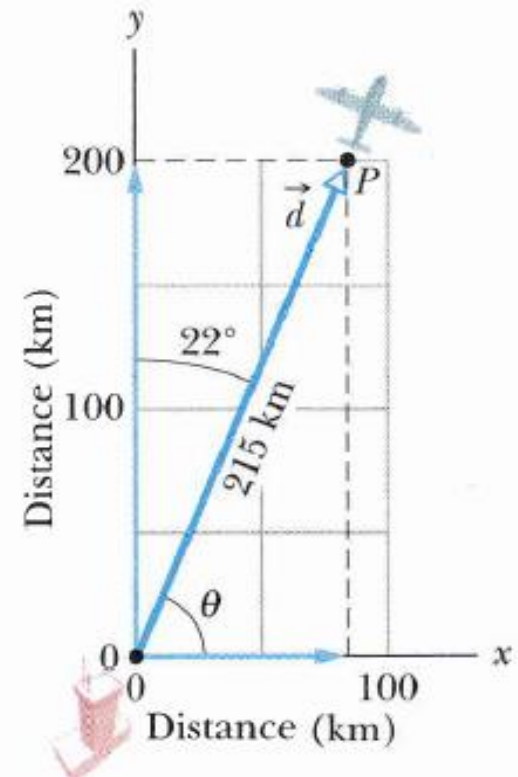
$$a_x = - a \cos \theta$$

$$a_y = + a \sin \theta$$

## Sample Problem

### 3-2

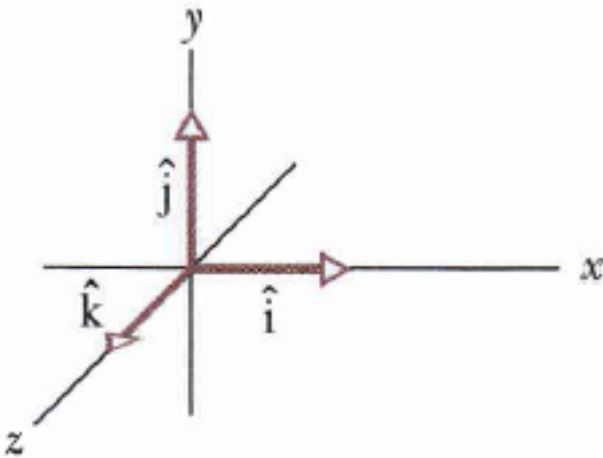
A small airplane leaves an airport on an overcast day and is later sighted 215 km away, in a direction making an angle of  $22^\circ$  east of due north. How far east and north is the airplane from the airport when sighted?





# Unit Vectors

- Unit vector is a vector of magnitude 1 and points in a particular direction



- Writing a vector in Unit vector notation



$$\vec{a} = a_x \hat{i} + a_y \hat{j} + a_z \hat{k}$$

Vector Components

$$\vec{a} = a_x \hat{i} + a_y \hat{j} + a_z \hat{k}$$

Scalar components



# Adding vectors by Components

$$\vec{a} = a_x \hat{i} + a_y \hat{j} + a_z \hat{k}$$

$$\vec{b} = b_x \hat{i} + b_y \hat{j} + b_z \hat{k}$$

$$\vec{a} = a_x \hat{i} + a_y \hat{j} + a_z \hat{k}$$

$$\vec{b} = b_x \hat{i} + b_y \hat{j} + b_z \hat{k}$$

$$\vec{a} + \vec{b} = (a_x + b_x) \hat{i} + (a_y + b_y) \hat{j} + (a_z + b_z) \hat{k}$$

## Sample Problem

## 3-4

Figure 3-16a shows the following three vectors:

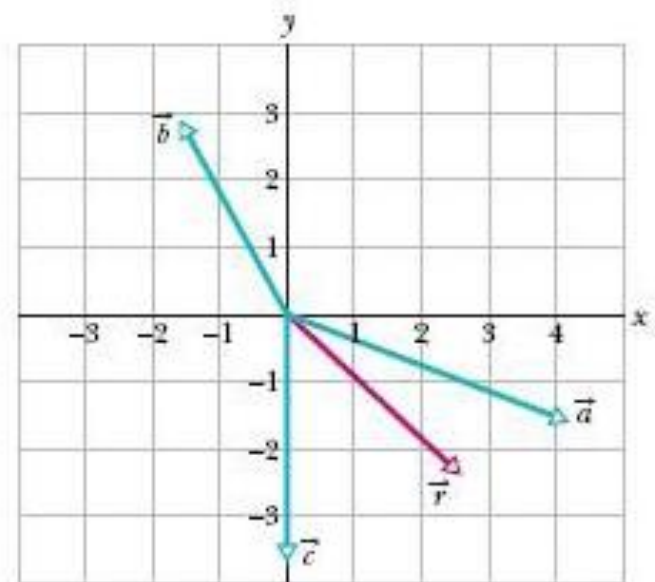
$$\vec{a} = (4.2 \text{ m})\hat{i} - (1.5 \text{ m})\hat{j},$$

$$\vec{b} = (-1.6 \text{ m})\hat{i} + (2.9 \text{ m})\hat{j},$$

and

$$\vec{c} = (-3.7 \text{ m})\hat{j}.$$

What is their vector sum  $\vec{r}$  which is also shown?





# Vectors Multiplication

## Multiplying a vector by a scalar

+ve scalar

will produce a new vector in the same direction as the started vector

$$\vec{a} = 2\hat{i} + 3\hat{j}$$

$$2\vec{a} = 4\hat{i} + 6\hat{j}$$

-ve scalar

will produce a new vector in the opposite direction of the started vector

$$\vec{a} = 2\hat{i} + 3\hat{j}$$

$$-2\vec{a} = -4\hat{i} - 6\hat{j}$$

## Multiplying a vector by a vector

Scalar product  
(or Dot product)

will produce a scalar

Vector product  
(or cross product)

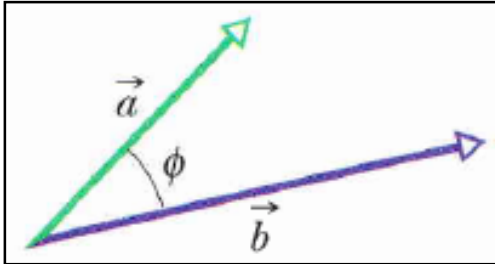
will produce a new vector





## Scalar (or Dot product)

If the two vectors are given in magnitude and the angle between them



$$\vec{a} \cdot \vec{b} = ab \cos \phi$$

If the two vectors are given in unit vector notation

$$\vec{a} = a_x \hat{i} + a_y \hat{j} + a_z \hat{k}$$
$$\vec{b} = b_x \hat{i} + b_y \hat{j} + b_z \hat{k}$$

$$\vec{a} \cdot \vec{b} = a_x b_x + a_y b_y + a_z b_z$$



$$\vec{a} \cdot \vec{b} = ab \cos \phi$$

1- The scalar product is commutative  $\Rightarrow \vec{a} \cdot \vec{b} = \vec{b} \cdot \vec{a}$

2- If the two vectors are parallel  $\Rightarrow \theta = 0 \Rightarrow \vec{a} \cdot \vec{b} = ab$  

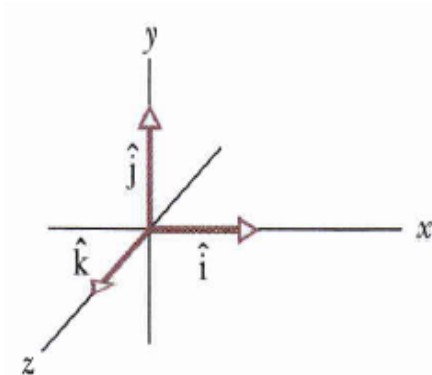
3- If the two vectors are perpendicular  $\Rightarrow \theta = 90 \Rightarrow \vec{a} \cdot \vec{b} = 0$  

4- If the two vectors are Antiparallel  $\Rightarrow \theta = 180 \Rightarrow \vec{a} \cdot \vec{b} = -ab$  

5- Multiplying Unit vectors

$$\hat{i} \cdot \hat{i} = (1)(1) \cos 0 = 1 \quad \Rightarrow \quad \hat{i} \cdot \hat{i} = \hat{j} \cdot \hat{j} = \hat{k} \cdot \hat{k} = 1$$

$$\hat{i} \cdot \hat{j} = (1)(1) \cos 90 = 0 \quad \Rightarrow \quad \hat{i} \cdot \hat{j} = \hat{j} \cdot \hat{k} = \hat{k} \cdot \hat{i} = 0,$$





The scalar product is commutative

$$\vec{a} \cdot \vec{b} = \vec{b} \cdot \vec{a}$$

the angle between two vectors can be found

$$\vec{a} \cdot \vec{b} = ab \cos \theta$$

any two similar unit vectors

$$\hat{i} \cdot \hat{i} = \hat{j} \cdot \hat{j} = \hat{k} \cdot \hat{k} = 1$$

any two different unit vectors

$$\hat{i} \cdot \hat{j} = \hat{j} \cdot \hat{k} = \hat{k} \cdot \hat{i} = 0$$

## Properties Of the scalar product

If  $\theta = 0 \Rightarrow \vec{a} \cdot \vec{b} = ab \Rightarrow$  vectors are parallel

$\theta = 180 \Rightarrow \vec{a} \cdot \vec{b} = -ab \Rightarrow$  vectors are anti parallel

$\theta = 90 \Rightarrow \vec{a} \cdot \vec{b} = 0 \Rightarrow$  vectors are perpendicular



## Sample Problem 3-7

What is the angle  $\phi$  between  $\vec{a} = 3.0\hat{i} - 4.0\hat{j}$  and  $\vec{b} = -2.0\hat{i} + 3.0\hat{k}$ ?

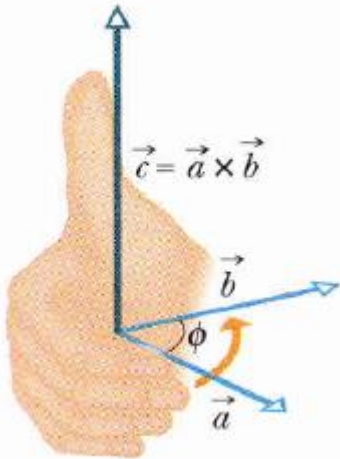


# Vector (or Cross product)

If the two vectors are given in magnitude and angle between them

$$|\vec{a} \times \vec{b}| = |c| = ab \sin \phi$$

The direction of the result vector



If the two vectors are given in unit vector notation

$$\vec{a} = a_x \hat{i} + a_y \hat{j} + a_z \hat{k}$$

$$\vec{b} = b_x \hat{i} + b_y \hat{j} + b_z \hat{k}$$

$$\begin{aligned} \vec{a} \times \vec{b} &= \begin{vmatrix} \hat{i} & \hat{j} & \hat{k} \\ a_x & a_y & a_z \\ b_x & b_y & b_z \end{vmatrix} \\ &= \hat{i} \begin{vmatrix} a_y & a_z \\ b_y & b_z \end{vmatrix} - \hat{j} \begin{vmatrix} a_x & a_z \\ b_x & b_z \end{vmatrix} + \hat{k} \begin{vmatrix} a_x & a_y \\ b_x & b_y \end{vmatrix} \\ &= (a_y b_z - b_y a_z) \hat{i} + (a_z b_x - b_z a_x) \hat{j} \\ &\quad + (a_x b_y - b_x a_y) \hat{k} \end{aligned}$$



$$|\vec{a} \times \vec{b}| = |c| = ab \sin \phi$$

1- The vector product is Anti commutative  $\Rightarrow \vec{a} \times \vec{b} = -\vec{b} \times \vec{a}$

2- If the two vectors are parallel  $\Rightarrow \theta = 0 \Rightarrow \vec{a} \times \vec{b} = 0$

3- If the two vectors are perpendicular  $\Rightarrow \theta = 90 \Rightarrow |\vec{a} \times \vec{b}| = ab$

4- If the two vectors are Anti-parallel  $\Rightarrow \theta = 180 \Rightarrow \vec{a} \times \vec{b} = 0$

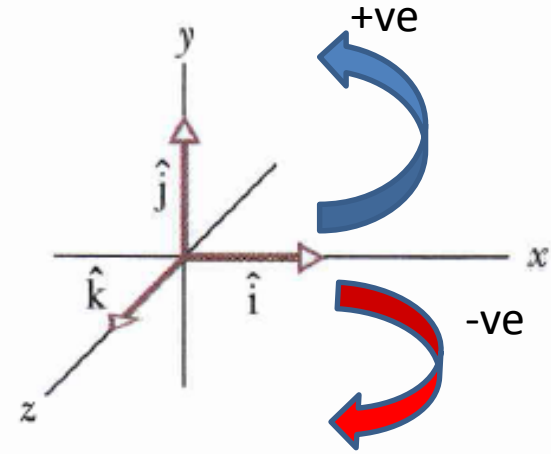
5- Multiplying Unit vectors

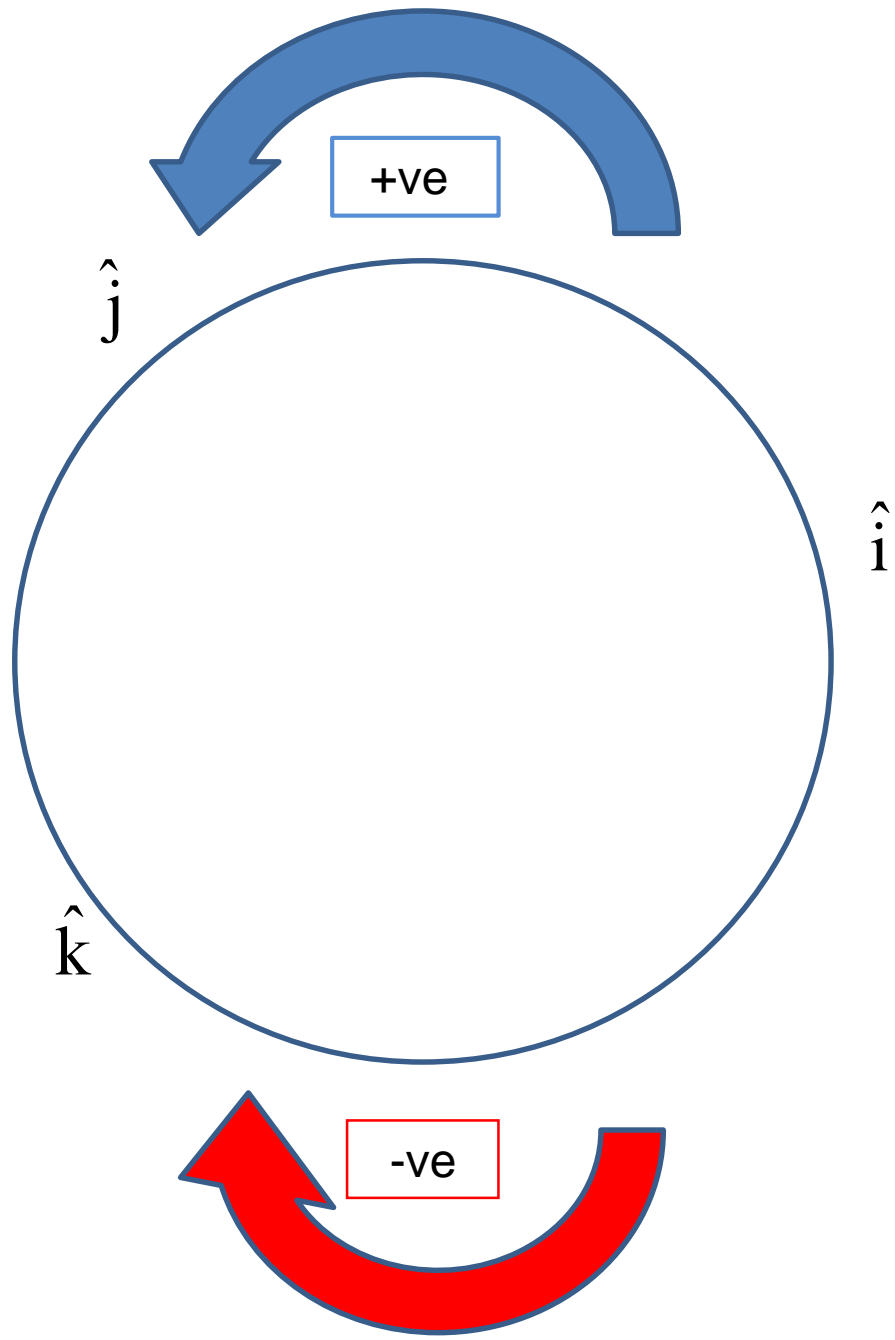
$$|\hat{i} \times \hat{i}| = (1)(1) \sin 0 = 0 \Rightarrow \hat{i} \times \hat{i} = \hat{j} \times \hat{j} = \hat{k} \times \hat{k} = 0$$

$$|\hat{i} \times \hat{j}| = (1)(1) \sin 90 = 1 \Rightarrow \hat{i} \times \hat{j} = \hat{k}$$

$$\hat{i} \times \hat{j} = \hat{k}, \quad \hat{j} \times \hat{k} = \hat{i}, \quad \hat{k} \times \hat{i} = \hat{j}$$

$$\hat{j} \times \hat{i} = -\hat{k} \quad \hat{k} \times \hat{j} = -\hat{i} \quad \hat{i} \times \hat{k} = -\hat{j}$$







Anti-commutative

$$\vec{a} \times \vec{b} = -\vec{b} \times \vec{a}$$

any two different  
unit vectors

$$\hat{i} \times \hat{j} = \hat{k}, \quad \hat{j} \times \hat{k} = \hat{i},$$

$$\hat{k} \times \hat{i} = \hat{j}$$

any two similar unit  
vectors

$$\hat{i} \times \hat{i} = \hat{j} \times \hat{j} = \hat{k} \times \hat{k} = 0$$

## Properties of the Vector product

The small angle  
between the two  
vectors must be used  
because the odd  
property of the sin  
function

$$|\vec{a} \times \vec{b}| = |c| = ab \sin \phi$$

If  $\theta = 0 \Rightarrow \vec{a} \times \vec{b} = 0$   $\Rightarrow$  vectors are parallel

$\theta = 180 \Rightarrow \vec{a} \times \vec{b} = 0$   $\Rightarrow$  vectors are anti parallel

$\theta = 90 \Rightarrow |\vec{a} \times \vec{b}| = ab$   $\Rightarrow$  vectors are perpendicular





## Sample Problem

3-9

If  $\vec{a} = 3\hat{i} - 4\hat{j}$  and  $\vec{b} = -2\hat{i} + 3\hat{k}$ , what is  $\vec{c} = \vec{a} \times \vec{b}$ ?

# The End

Skills of Teaching



قسم الفيزياء

فرع السليمانية

## VECTORS

## 3-1 WHAT IS PHYSICS?

Physics deals with a great many quantities that have both size and direction, and it needs a special mathematical language—the language of vectors—to describe those quantities. This language is also used in engineering, the other sciences, and even in common speech. If you have ever given directions such as “Go five blocks down this street and then hang a left,” you have used the language of vectors. In fact, navigation of any sort is based on vectors, but physics and engineering also need vectors in special ways to explain phenomena involving rotation and magnetic forces, which we get to in later chapters. In this chapter, we focus on the basic language of vectors.

## 3-2 Vectors and Scalars

A particle moving along a straight line can move in only two directions. We can take its motion to be positive in one of these directions and negative in the other. For a particle moving in three dimensions, however, a plus sign or minus sign is no longer enough to indicate a direction. Instead, we must use a *vector*.

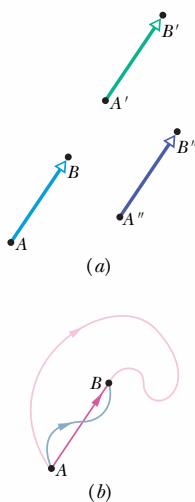
A **vector** has magnitude as well as direction, and vectors follow certain (vector) rules of combination, which we examine in this chapter. A **vector quantity** is a quantity that has both a magnitude and a direction and thus can be represented with a vector. Some physical quantities that are vector quantities are displacement, velocity, and acceleration. You will see many more throughout this book, so learning the rules of vector combination now will help you greatly in later chapters.

Not all physical quantities involve a direction. Temperature, pressure, energy, mass, and time, for example, do not “point” in the spatial sense. We call such quantities **scalars**, and we deal with them by the rules of ordinary algebra. A single value, with a sign (as in a temperature of  $-40^{\circ}\text{F}$ ), specifies a scalar.

The simplest vector quantity is displacement, or change of position. A vector that represents a displacement is called, reasonably, a **displacement vector**. (Similarly, we have velocity vectors and acceleration vectors.) If a particle changes its position by moving from  $A$  to  $B$  in Fig. 3-1a, we say that it undergoes a displacement from  $A$  to  $B$ , which we represent with an arrow pointing from  $A$  to  $B$ . The arrow specifies the vector graphically. To distinguish vector symbols from other kinds of arrows in this book, we use the outline of a triangle as the arrowhead.

In Fig. 3-1a, the arrows from  $A$  to  $B$ , from  $A'$  to  $B'$ , and from  $A''$  to  $B''$  have the same magnitude and direction. Thus, they specify identical displacement vectors and represent the same *change of position* for the particle. A vector can be shifted without changing its value *if* its length and direction are not changed.

The displacement vector tells us nothing about the actual path that the particle takes. In Fig. 3-1b, for example, all three paths connecting points  $A$  and  $B$  correspond to the same displacement vector, that of Fig. 3-1a. Displacement vectors represent only the overall effect of the motion, not the motion itself.



**Fig. 3-1** (a) All three arrows have the same magnitude and direction and thus represent the same displacement. (b) All three paths connecting the two points correspond to the same displacement vector.

### 3-3 Adding Vectors Geometrically

Suppose that, as in the vector diagram of Fig. 3-2a, a particle moves from  $A$  to  $B$  and then later from  $B$  to  $C$ . We can represent its overall displacement (no matter what its actual path) with two successive displacement vectors,  $AB$  and  $BC$ . The *net* displacement of these two displacements is a single displacement from  $A$  to  $C$ . We call  $AC$  the **vector sum** (or **resultant**) of the vectors  $AB$  and  $BC$ . This sum is not the usual algebraic sum.

In Fig. 3-2b, we redraw the vectors of Fig. 3-2a and relabel them in the way that we shall use from now on, namely, with an arrow over an italic symbol, as in  $\vec{a}$ . If we want to indicate only the magnitude of the vector (a quantity that lacks a sign or direction), we shall use the italic symbol, as in  $a$ ,  $b$ , and  $s$ . (You can use just a handwritten symbol.) A symbol with an overhead arrow always implies both properties of a vector, magnitude and direction.

We can represent the relation among the three vectors in Fig. 3-2b with the *vector equation*

$$\vec{s} = \vec{a} + \vec{b}, \quad (3-1)$$

which says that the vector  $\vec{s}$  is the vector sum of vectors  $\vec{a}$  and  $\vec{b}$ . The symbol  $+$  in Eq. 3-1 and the words “sum” and “add” have different meanings for vectors than they do in the usual algebra because they involve both magnitude *and* direction.

Figure 3-2 suggests a procedure for adding two-dimensional vectors  $\vec{a}$  and  $\vec{b}$  geometrically. (1) On paper, sketch vector  $\vec{a}$  to some convenient scale and at the proper angle. (2) Sketch vector  $\vec{b}$  to the same scale, with its tail at the head of vector  $\vec{a}$ , again at the proper angle. (3) The vector sum  $\vec{s}$  is the vector that extends from the tail of  $\vec{a}$  to the head of  $\vec{b}$ .

Vector addition, defined in this way, has two important properties. First, the order of addition does not matter. Adding  $\vec{a}$  to  $\vec{b}$  gives the same result as adding  $\vec{b}$  to  $\vec{a}$  (Fig. 3-3); that is,

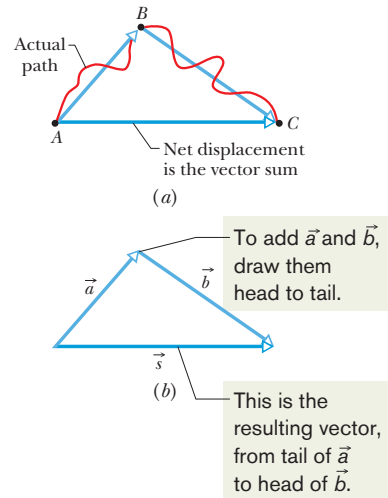
$$\vec{a} + \vec{b} = \vec{b} + \vec{a} \quad (\text{commutative law}). \quad (3-2)$$

Second, when there are more than two vectors, we can group them in any order as we add them. Thus, if we want to add vectors  $\vec{a}$ ,  $\vec{b}$ , and  $\vec{c}$ , we can add  $\vec{a}$  and  $\vec{b}$  first and then add their vector sum to  $\vec{c}$ . We can also add  $\vec{b}$  and  $\vec{c}$  first and then add *that* sum to  $\vec{a}$ . We get the same result either way, as shown in Fig. 3-4. That is,

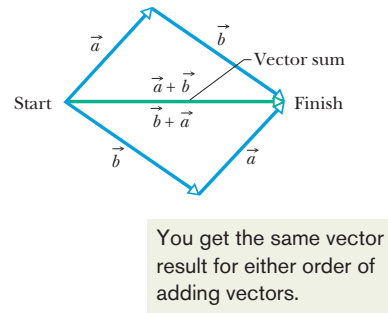
$$(\vec{a} + \vec{b}) + \vec{c} = \vec{a} + (\vec{b} + \vec{c}) \quad (\text{associative law}). \quad (3-3)$$

The vector  $-\vec{b}$  is a vector with the same magnitude as  $\vec{b}$  but the opposite direction (see Fig. 3-5). Adding the two vectors in Fig. 3-5 would yield

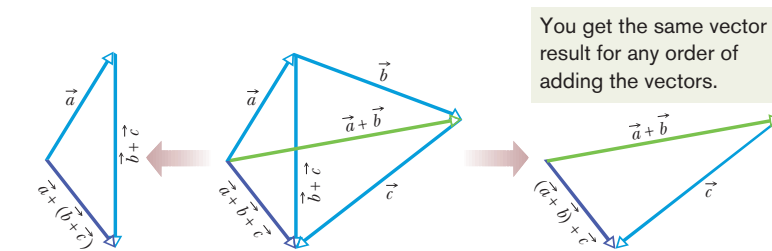
$$\vec{b} + (-\vec{b}) = 0.$$



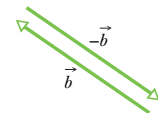
**Fig. 3-2** (a)  $AC$  is the vector sum of the vectors  $AB$  and  $BC$ . (b) The same vectors relabeled.



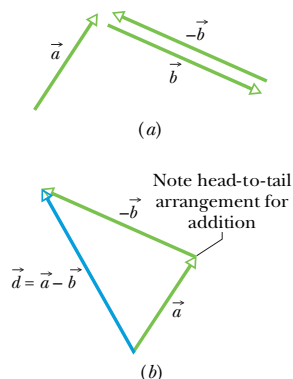
**Fig. 3-3** The two vectors  $\vec{a}$  and  $\vec{b}$  can be added in either order; see Eq. 3-2.



**Fig. 3-4** The three vectors  $\vec{a}$ ,  $\vec{b}$ , and  $\vec{c}$  can be grouped in any way as they are added; see Eq. 3-3.



**Fig. 3-5** The vectors  $\vec{b}$  and  $-\vec{b}$  have the same magnitude and opposite directions.



**Fig. 3-6** (a) Vectors  $\vec{a}$ ,  $\vec{b}$ , and  $-\vec{b}$ . (b) To subtract vector  $\vec{b}$  from vector  $\vec{a}$ , add vector  $-\vec{b}$  to vector  $\vec{a}$ .

Thus, adding  $-\vec{b}$  has the effect of subtracting  $\vec{b}$ . We use this property to define the difference between two vectors: let  $\vec{d} = \vec{a} - \vec{b}$ . Then

$$\vec{d} = \vec{a} - \vec{b} = \vec{a} + (-\vec{b}) \quad (\text{vector subtraction}); \quad (3-4)$$

that is, we find the difference vector  $\vec{d}$  by adding the vector  $-\vec{b}$  to the vector  $\vec{a}$ . Figure 3-6 shows how this is done geometrically.

As in the usual algebra, we can move a term that includes a vector symbol from one side of a vector equation to the other, but we must change its sign. For example, if we are given Eq. 3-4 and need to solve for  $\vec{a}$ , we can rearrange the equation as

$$\vec{d} + \vec{b} = \vec{a} \quad \text{or} \quad \vec{a} = \vec{d} + \vec{b}.$$

Remember that, although we have used displacement vectors here, the rules for addition and subtraction hold for vectors of all kinds, whether they represent velocities, accelerations, or any other vector quantity. However, we can add only vectors of the same kind. For example, we can add two displacements, or two velocities, but adding a displacement and a velocity makes no sense. In the arithmetic of scalars, that would be like trying to add 21 s and 12 m.

**CHECKPOINT 1**

The magnitudes of displacements  $\vec{a}$  and  $\vec{b}$  are 3 m and 4 m, respectively, and  $\vec{c} = \vec{a} + \vec{b}$ . Considering various orientations of  $\vec{a}$  and  $\vec{b}$ , what is (a) the maximum possible magnitude for  $\vec{c}$  and (b) the minimum possible magnitude?

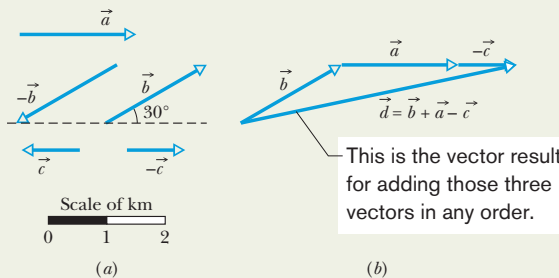
**Sample Problem**

**Adding vectors in a drawing, orienteering**

In an orienteering class, you have the goal of moving as far (straight-line distance) from base camp as possible by making three straight-line moves. You may use the following displacements in any order: (a)  $\vec{a}$ , 2.0 km due east (directly toward the east); (b)  $\vec{b}$ , 2.0 km  $30^\circ$  north of east (at an angle of  $30^\circ$  toward the north from due east); (c)  $\vec{c}$ , 1.0 km due west. Alternatively, you may substitute either  $-\vec{b}$  for  $\vec{b}$  or  $-\vec{c}$  for  $\vec{c}$ . What is the greatest distance you can be from base camp at the end of the third displacement?

**Reasoning:** Using a convenient scale, we draw vectors  $\vec{a}$ ,  $\vec{b}$ ,  $\vec{c}$ ,  $-\vec{b}$ , and  $-\vec{c}$  as in Fig. 3-7a. We then mentally slide the vectors over the page, connecting three of them at a time in head-to-tail arrangements to find their vector sum  $\vec{d}$ . The tail of the first vector represents base camp. The head of the third vector represents the point at which you stop. The vector sum  $\vec{d}$  extends from the tail of the first vector to the head of the third vector. Its magnitude  $d$  is your distance from base camp.

We find that distance  $d$  is greatest for a head-to-tail arrangement of vectors  $\vec{a}$ ,  $\vec{b}$ , and  $-\vec{c}$ . They can be in any order, because their vector sum is the same for any order.



**Fig. 3-7** (a) Displacement vectors; three are to be used. (b) Your distance from base camp is greatest if you undergo displacements  $\vec{a}$ ,  $\vec{b}$ , and  $-\vec{c}$ , in any order.

The order shown in Fig. 3-7b is for the vector sum

$$\vec{d} = \vec{b} + \vec{a} + (-\vec{c}).$$

Using the scale given in Fig. 3-7a, we measure the length  $d$  of this vector sum, finding

$$d = 4.8 \text{ m.} \quad (\text{Answer})$$



Additional examples, video, and practice available at WileyPLUS

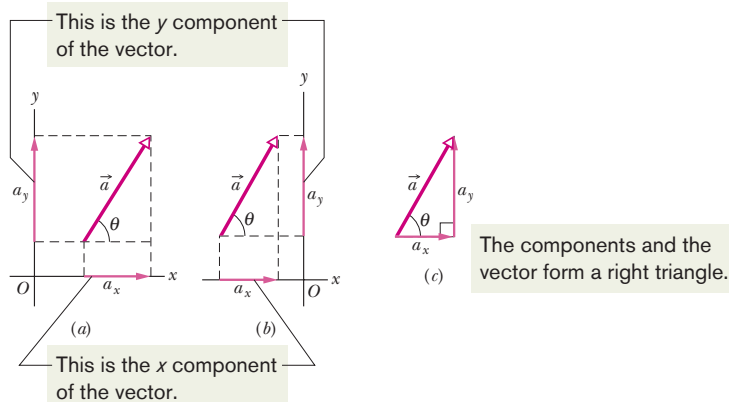
### 3-4 Components of Vectors

Adding vectors geometrically can be tedious. A neater and easier technique involves algebra but requires that the vectors be placed on a rectangular coordinate system. The  $x$  and  $y$  axes are usually drawn in the plane of the page, as shown in Fig. 3-8a. The  $z$  axis comes directly out of the page at the origin; we ignore it for now and deal only with two-dimensional vectors.

A **component** of a vector is the projection of the vector on an axis. In Fig. 3-8a, for example,  $a_x$  is the component of vector  $\vec{a}$  on (or along) the  $x$  axis and  $a_y$  is the component along the  $y$  axis. To find the projection of a vector along an axis, we draw perpendicular lines from the two ends of the vector to the axis, as shown. The projection of a vector on an  $x$  axis is its  $x$  component, and similarly the projection on the  $y$  axis is the  $y$  component. The process of finding the components of a vector is called **resolving the vector**.

A component of a vector has the same direction (along an axis) as the vector. In Fig. 3-8,  $a_x$  and  $a_y$  are both positive because  $\vec{a}$  extends in the positive direction of both axes. (Note the small arrowheads on the components, to indicate their direction.) If we were to reverse vector  $\vec{a}$ , then both components would be negative and their arrowheads would point toward negative  $x$  and  $y$ . Resolving vector  $\vec{b}$  in Fig. 3-9 yields a positive component  $b_x$  and a negative component  $b_y$ .

In general, a vector has three components, although for the case of Fig. 3-8a the component along the  $z$  axis is zero. As Figs. 3-8a and b show, if you shift a vector without changing its direction, its components do not change.



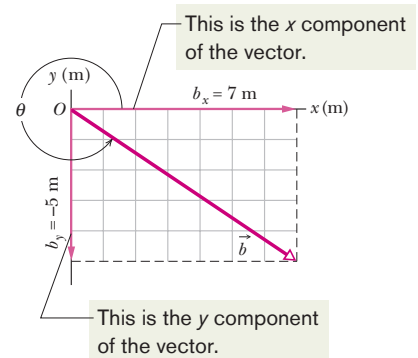
**Fig. 3-8** (a) The components  $a_x$  and  $a_y$  of vector  $\vec{a}$ . (b) The components are unchanged if the vector is shifted, as long as the magnitude and orientation are maintained. (c) The components form the legs of a right triangle whose hypotenuse is the magnitude of the vector.

We can find the components of  $\vec{a}$  in Fig. 3-8a geometrically from the right triangle there:

$$a_x = a \cos \theta \quad \text{and} \quad a_y = a \sin \theta, \quad (3-5)$$

where  $\theta$  is the angle that the vector  $\vec{a}$  makes with the positive direction of the  $x$  axis, and  $a$  is the magnitude of  $\vec{a}$ . Figure 3-8c shows that  $\vec{a}$  and its  $x$  and  $y$  components form a right triangle. It also shows how we can reconstruct a vector from its components: we arrange those components *head to tail*. Then we complete a right triangle with the vector forming the hypotenuse, from the tail of one component to the head of the other component.

Once a vector has been resolved into its components along a set of axes, the components themselves can be used in place of the vector. For example,  $\vec{a}$  in



**Fig. 3-9** The component of  $\vec{b}$  on the  $x$  axis is positive, and that on the  $y$  axis is negative.

Fig. 3-8a is given (completely determined) by  $a$  and  $\theta$ . It can also be given by its components  $a_x$  and  $a_y$ . Both pairs of values contain the same information. If we know a vector in *component notation* ( $a_x$  and  $a_y$ ) and want it in *magnitude-angle notation* ( $a$  and  $\theta$ ), we can use the equations

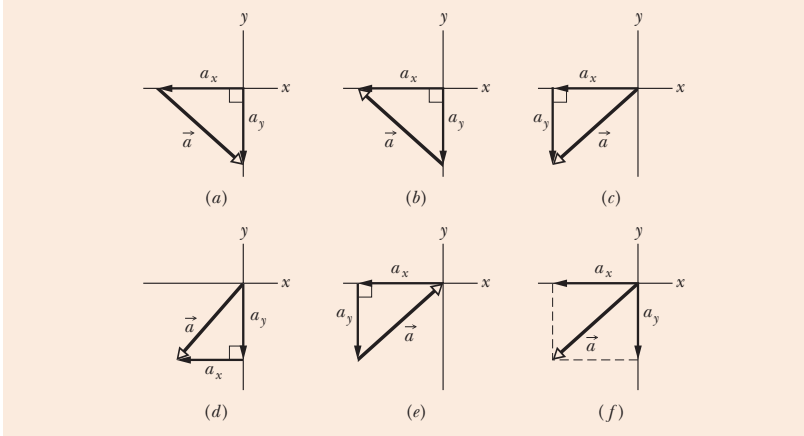
$$a = \sqrt{a_x^2 + a_y^2} \quad \text{and} \quad \tan \theta = \frac{a_y}{a_x} \tag{3-6}$$

to transform it.

In the more general three-dimensional case, we need a magnitude and two angles (say,  $a$ ,  $\theta$ , and  $\phi$ ) or three components ( $a_x$ ,  $a_y$ , and  $a_z$ ) to specify a vector.

**CHECKPOINT 2**

In the figure, which of the indicated methods for combining the  $x$  and  $y$  components of vector  $\vec{a}$  are proper to determine that vector?



**Sample Problem**

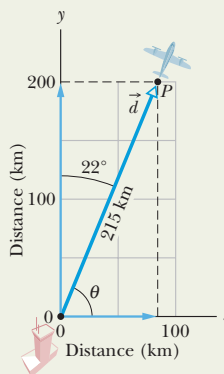
**Finding components, airplane flight**

A small airplane leaves an airport on an overcast day and is later sighted 215 km away, in a direction making an angle of  $22^\circ$  east of due north. How far east and north is the airplane from the airport when sighted?

**KEY IDEA**

We are given the magnitude (215 km) and the angle ( $22^\circ$  east of due north) of a vector and need to find the components of the vector.

**Calculations:** We draw an  $xy$  coordinate system with the positive direction of  $x$  due east and that of  $y$  due north (Fig. 3-10). For convenience, the origin is placed at the airport. The airplane's displacement  $\vec{a}$  points from the origin to where the airplane is sighted.



**Fig. 3-10** A plane takes off from an airport at the origin and is later sighted at  $P$ .

To find the components of  $\vec{d}$ , we use Eq. 3-5 with  $\theta = 68^\circ (= 90^\circ - 22^\circ)$ :

$$d_x = d \cos \theta = (215 \text{ km})(\cos 68^\circ) = 81 \text{ km} \quad (\text{Answer})$$

$$d_y = d \sin \theta = (215 \text{ km})(\sin 68^\circ) = 199 \text{ km} \approx 2.0 \times 10^2 \text{ km.} \quad (\text{Answer})$$

Thus, the airplane is 81 km east and  $2.0 \times 10^2$  km north of the airport.

### Problem-Solving Tactics

#### Angles, trig functions, and inverse trig functions

**Tactic 1: Angles—Degrees and Radians** Angles that are measured relative to the positive direction of the  $x$  axis are positive if they are measured in the counterclockwise direction and negative if measured clockwise. For example,  $210^\circ$  and  $-150^\circ$  are the same angle.

Angles may be measured in degrees or radians (rad). To relate the two measures, recall that a full circle is  $360^\circ$  and  $2\pi$  rad. To convert, say,  $40^\circ$  to radians, write

$$40^\circ \frac{2\pi \text{ rad}}{360^\circ} = 0.70 \text{ rad.}$$

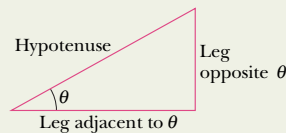
**Tactic 2: Trig Functions** You need to know the definitions of the common trigonometric functions—sine, cosine, and tangent—because they are part of the language of science and engineering. They are given in Fig. 3-11 in a form that does not depend on how the triangle is labeled.

You should also be able to sketch how the trig functions vary with angle, as in Fig. 3-12, in order to be able to judge whether a calculator result is reasonable. Even knowing the signs of the functions in the various quadrants can be of help.

$$\sin \theta = \frac{\text{leg opposite } \theta}{\text{hypotenuse}}$$

$$\cos \theta = \frac{\text{leg adjacent to } \theta}{\text{hypotenuse}}$$

$$\tan \theta = \frac{\text{leg opposite } \theta}{\text{leg adjacent to } \theta}$$

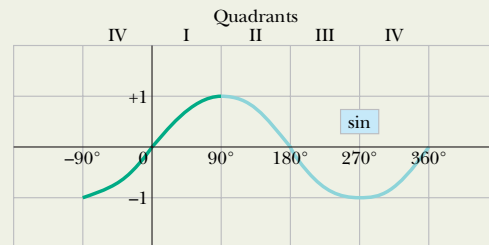


**Fig. 3-11** A triangle used to define the trigonometric functions. See also Appendix E.

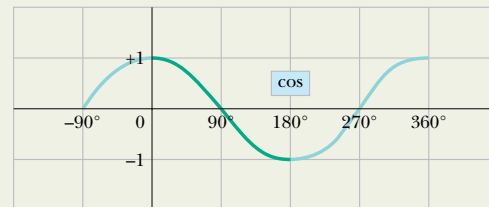
**Tactic 3: Inverse Trig Functions** When the inverse trig functions  $\sin^{-1}$ ,  $\cos^{-1}$ , and  $\tan^{-1}$  are taken on a calculator, you must consider the reasonableness of the answer you get, because there is usually another possible answer that the calculator does not give. The range of operation for a calculator in taking each inverse trig function is indicated in Fig. 3-12. As an example,  $\sin^{-1} 0.5$  has associated angles of  $30^\circ$  (which is displayed by the calculator, since  $30^\circ$  falls within its range of operation) and  $150^\circ$ . To see both values, draw a horizontal line through 0.5 in Fig. 3-12a and note where it cuts the sine curve. How do you distinguish a correct answer? It is the one that seems more reasonable for the given situation.

**Tactic 4: Measuring Vector Angles** The equations for  $\cos \theta$  and  $\sin \theta$  in Eq. 3-5 and for  $\tan \theta$  in Eq. 3-6 are valid only if

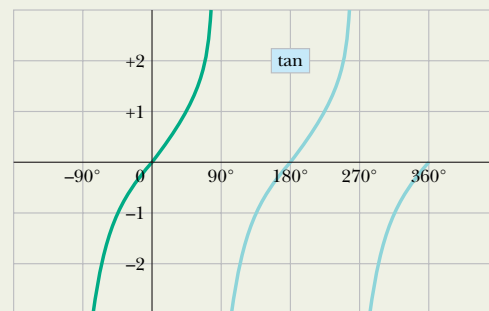
the angle is measured from the positive direction of the  $x$  axis. If it is measured relative to some other direction, then the trig functions in Eq. 3-5 may have to be interchanged and the ratio in Eq. 3-6 may have to be inverted. A safer method is to convert the angle to one measured from the positive direction of the  $x$  axis.



(a)



(b)



(c)

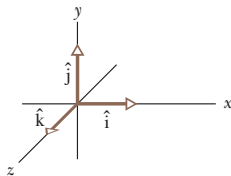
**Fig. 3-12** Three useful curves to remember. A calculator's range of operation for taking *inverse* trig functions is indicated by the darker portions of the colored curves.



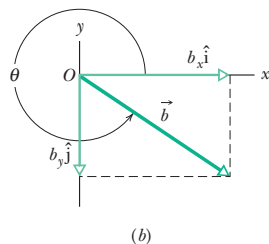
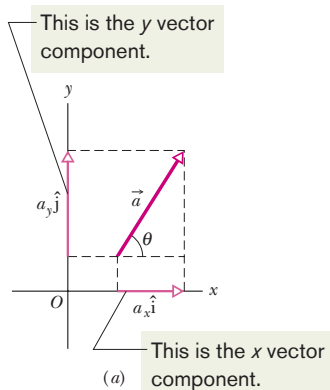
Additional examples, video, and practice available at WileyPLUS



The unit vectors point along axes.



**Fig. 3-13** Unit vectors  $\hat{i}$ ,  $\hat{j}$ , and  $\hat{k}$  define the directions of a right-handed coordinate system.



**Fig. 3-14** (a) The vector components of vector  $\vec{a}$ . (b) The vector components of vector  $\vec{b}$ .

### 3-5 Unit Vectors

A **unit vector** is a vector that has a magnitude of exactly 1 and points in a particular direction. It lacks both dimension and unit. Its sole purpose is to point—that is, to specify a direction. The unit vectors in the positive directions of the  $x$ ,  $y$ , and  $z$  axes are labeled  $\hat{i}$ ,  $\hat{j}$ , and  $\hat{k}$ , where the hat  $\hat{\phantom{x}}$  is used instead of an overhead arrow as for other vectors (Fig. 3-13). The arrangement of axes in Fig. 3-13 is said to be a **right-handed coordinate system**. The system remains right-handed if it is rotated rigidly. We use such coordinate systems exclusively in this book.

Unit vectors are very useful for expressing other vectors; for example, we can express  $\vec{a}$  and  $\vec{b}$  of Figs. 3-8 and 3-9 as

$$\vec{a} = a_x \hat{i} + a_y \hat{j} \tag{3-7}$$

and 
$$\vec{b} = b_x \hat{i} + b_y \hat{j}. \tag{3-8}$$

These two equations are illustrated in Fig. 3-14. The quantities  $a_x \hat{i}$  and  $a_y \hat{j}$  are vectors, called the **vector components** of  $\vec{a}$ . The quantities  $a_x$  and  $a_y$  are scalars, called the **scalar components** of  $\vec{a}$  (or, as before, simply its **components**).

### 3-6 Adding Vectors by Components

Using a sketch, we can add vectors geometrically. On a vector-capable calculator, we can add them directly on the screen. A third way to add vectors is to combine their components axis by axis, which is the way we examine here.

To start, consider the statement

$$\vec{r} = \vec{a} + \vec{b}, \tag{3-9}$$

which says that the vector  $\vec{r}$  is the same as the vector  $(\vec{a} + \vec{b})$ . Thus, each component of  $\vec{r}$  must be the same as the corresponding component of  $(\vec{a} + \vec{b})$ :

$$r_x = a_x + b_x \tag{3-10}$$

$$r_y = a_y + b_y \tag{3-11}$$

$$r_z = a_z + b_z. \tag{3-12}$$

In other words, two vectors must be equal if their corresponding components are equal. Equations 3-9 to 3-12 tell us that to add vectors  $\vec{a}$  and  $\vec{b}$ , we must (1) resolve the vectors into their scalar components; (2) combine these scalar components, axis by axis, to get the components of the sum  $\vec{r}$ ; and (3) combine the components of  $\vec{r}$  to get  $\vec{r}$  itself. We have a choice in step 3. We can express  $\vec{r}$  in unit-vector notation or in magnitude-angle notation.

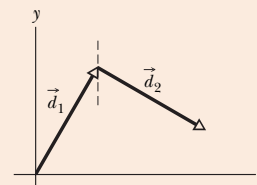
This procedure for adding vectors by components also applies to vector subtractions. Recall that a subtraction such as  $\vec{d} = \vec{a} - \vec{b}$  can be rewritten as an addition  $\vec{d} = \vec{a} + (-\vec{b})$ . To subtract, we add  $\vec{a}$  and  $-\vec{b}$  by components, to get

$$d_x = a_x - b_x, \quad d_y = a_y - b_y, \quad \text{and} \quad d_z = a_z - b_z,$$

where 
$$\vec{d} = d_x \hat{i} + d_y \hat{j} + d_z \hat{k}. \tag{3-13}$$

#### CHECKPOINT 3

(a) In the figure here, what are the signs of the  $x$  components of  $\vec{d}_1$  and  $\vec{d}_2$ ? (b) What are the signs of the  $y$  components of  $\vec{d}_1$  and  $\vec{d}_2$ ? (c) What are the signs of the  $x$  and  $y$  components of  $\vec{d}_1 + \vec{d}_2$ ?



## Sample Problem

## Adding vectors, unit-vector components

Figure 3-15a shows the following three vectors:

$$\vec{a} = (4.2 \text{ m})\hat{i} - (1.5 \text{ m})\hat{j},$$

$$\vec{b} = (-1.6 \text{ m})\hat{i} + (2.9 \text{ m})\hat{j},$$

and 
$$\vec{c} = (-3.7 \text{ m})\hat{j}.$$

What is their vector sum  $\vec{r}$  which is also shown?

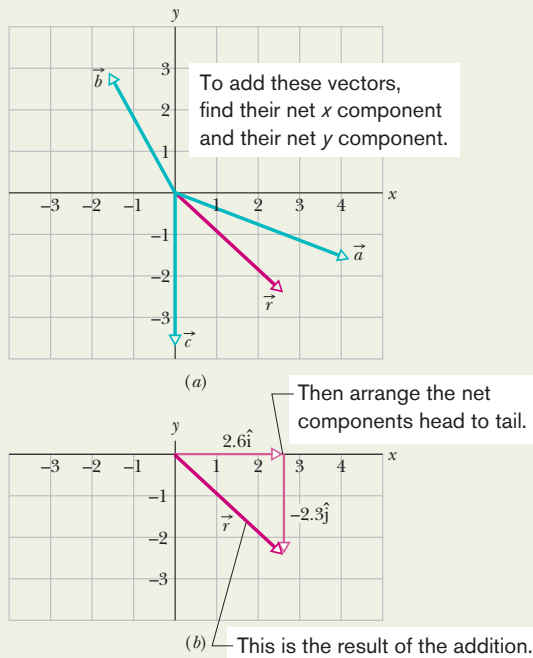


Fig. 3-15 Vector  $\vec{r}$  is the vector sum of the other three vectors.

## KEY IDEA

We can add the three vectors by components, axis by axis, and then combine the components to write the vector sum  $\vec{r}$ .

**Calculations:** For the  $x$  axis, we add the  $x$  components of  $\vec{a}$ ,  $\vec{b}$ , and  $\vec{c}$ , to get the  $x$  component of the vector sum  $\vec{r}$ :

$$\begin{aligned} r_x &= a_x + b_x + c_x \\ &= 4.2 \text{ m} - 1.6 \text{ m} + 0 = 2.6 \text{ m}. \end{aligned}$$

Similarly, for the  $y$  axis,

$$\begin{aligned} r_y &= a_y + b_y + c_y \\ &= -1.5 \text{ m} + 2.9 \text{ m} - 3.7 \text{ m} = -2.3 \text{ m}. \end{aligned}$$

We then combine these components of  $\vec{r}$  to write the vector in unit-vector notation:

$$\vec{r} = (2.6 \text{ m})\hat{i} - (2.3 \text{ m})\hat{j}, \quad (\text{Answer})$$

where  $(2.6 \text{ m})\hat{i}$  is the vector component of  $\vec{r}$  along the  $x$  axis and  $-(2.3 \text{ m})\hat{j}$  is that along the  $y$  axis. Figure 3-15b shows one way to arrange these vector components to form  $\vec{r}$ . (Can you sketch the other way?)

We can also answer the question by giving the magnitude and an angle for  $\vec{r}$ . From Eq. 3-6, the magnitude is

$$r = \sqrt{(2.6 \text{ m})^2 + (-2.3 \text{ m})^2} \approx 3.5 \text{ m} \quad (\text{Answer})$$

and the angle (measured from the  $+x$  direction) is

$$\theta = \tan^{-1}\left(\frac{-2.3 \text{ m}}{2.6 \text{ m}}\right) = -41^\circ, \quad (\text{Answer})$$

where the minus sign means clockwise.

## Sample Problem

## Adding vectors by components, desert ant

The desert ant *Cataglyphis fortis* lives in the plains of the Sahara desert. When one of the ants forages for food, it travels from its home nest along a haphazard search path, over flat, featureless sand that contains no landmarks. Yet, when the ant decides to return home, it turns and then runs directly home. According to experiments, the ant keeps track of its movements along a mental coordinate system. When it wants to return to its home nest, it effectively sums its displacements along the axes of the system to calculate a vector that points directly home. As an example of the calculation, let's consider an ant making five runs of 6.0 cm each on an  $xy$  coordinate system, in the directions shown in

Fig. 3-16a, starting from home. At the end of the fifth run, what are the magnitude and angle of the ant's net displacement vector  $\vec{d}_{\text{net}}$ , and what are those of the homeward vector  $\vec{d}_{\text{home}}$  that extends from the ant's final position back to home? In a real situation, such vector calculations might involve thousands of such runs.

## KEY IDEAS

(1) To find the net displacement  $\vec{d}_{\text{net}}$ , we need to sum the five individual displacement vectors:

$$\vec{d}_{\text{net}} = \vec{d}_1 + \vec{d}_2 + \vec{d}_3 + \vec{d}_4 + \vec{d}_5.$$

(2) We evaluate this sum for the  $x$  components alone,

$$d_{\text{net},x} = d_{1x} + d_{2x} + d_{3x} + d_{4x} + d_{5x}, \quad (3-14)$$

and for the  $y$  components alone,

$$d_{\text{net},y} = d_{1y} + d_{2y} + d_{3y} + d_{4y} + d_{5y}. \quad (3-15)$$

(3) We construct  $\vec{d}_{\text{net}}$  from its  $x$  and  $y$  components.

**Calculations:** To evaluate Eq. 3-14, we apply the  $x$  part of Eq. 3-5 to each run:

$$\begin{aligned} d_{1x} &= (6.0 \text{ cm}) \cos 0^\circ = +6.0 \text{ cm} \\ d_{2x} &= (6.0 \text{ cm}) \cos 150^\circ = -5.2 \text{ cm} \\ d_{3x} &= (6.0 \text{ cm}) \cos 180^\circ = -6.0 \text{ cm} \\ d_{4x} &= (6.0 \text{ cm}) \cos(-120^\circ) = -3.0 \text{ cm} \\ d_{5x} &= (6.0 \text{ cm}) \cos 90^\circ = 0. \end{aligned}$$

Equation 3-14 then gives us

$$\begin{aligned} d_{\text{net},x} &= +6.0 \text{ cm} + (-5.2 \text{ cm}) + (-6.0 \text{ cm}) \\ &\quad + (-3.0 \text{ cm}) + 0 \\ &= -8.2 \text{ cm}. \end{aligned}$$

Similarly, we evaluate the individual  $y$  components of the five runs using the  $y$  part of Eq. 3-5. The results are shown in Table 3-1. Substituting the results into Eq. 3-15 then gives us

$$d_{\text{net},y} = +3.8 \text{ cm}.$$

Table 3-1

Run	$d_x$ (cm)	$d_y$ (cm)
1	+6.0	0
2	-5.2	+3.0
3	-6.0	0
4	-3.0	-5.2
5	0	+6.0
net	-8.2	+3.8

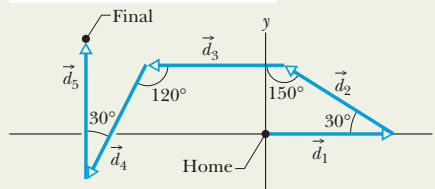
Vector  $\vec{d}_{\text{net}}$  and its  $x$  and  $y$  components are shown in Fig. 3-16*b*. To find the magnitude and angle of  $\vec{d}_{\text{net}}$  from its components, we use Eq. 3-6. The magnitude is

$$\begin{aligned} d_{\text{net}} &= \sqrt{d_{\text{net},x}^2 + d_{\text{net},y}^2} \\ &= \sqrt{(-8.2 \text{ cm})^2 + (3.8 \text{ cm})^2} = 9.0 \text{ cm}. \end{aligned}$$

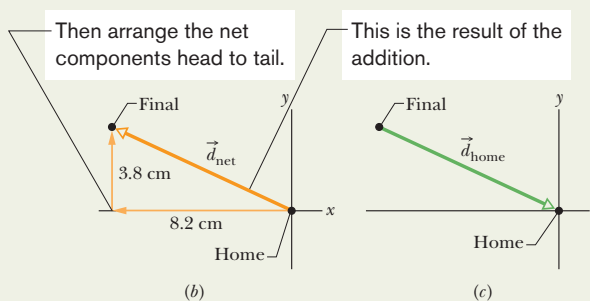
To find the angle (measured from the positive direction of  $x$ ), we take an inverse tangent:

$$\begin{aligned} \theta &= \tan^{-1}\left(\frac{d_{\text{net},y}}{d_{\text{net},x}}\right) \\ &= \tan^{-1}\left(\frac{3.8 \text{ cm}}{-8.2 \text{ cm}}\right) = -24.86^\circ. \end{aligned} \quad (3-16)$$

To add these vectors, find their net  $x$  component and their net  $y$  component.



(a)



(b)

(c)

Fig. 3-16 (a) A search path of five runs. (b) The  $x$  and  $y$  components of  $\vec{d}_{\text{net}}$ . (c) Vector  $\vec{d}_{\text{home}}$  points the way to the home nest.

**Caution:** Taking an inverse tangent on a calculator may not give the correct answer. The answer  $-24.86^\circ$  indicates that the direction of  $\vec{d}_{\text{net}}$  is in the fourth quadrant of our  $xy$  coordinate system. However, when we construct the vector from its components (Fig. 3-16*b*), we see that the direction of  $\vec{d}_{\text{net}}$  is in the second quadrant. Thus, we must “fix” the calculator’s answer by adding  $180^\circ$ :

$$\theta = -24.86^\circ + 180^\circ = 155.14^\circ \approx 155^\circ. \quad (3-17)$$

Thus, the ant’s displacement  $\vec{d}_{\text{net}}$  has magnitude and angle

$$d_{\text{net}} = 9.0 \text{ cm at } 155^\circ. \quad (\text{Answer})$$

Vector  $\vec{d}_{\text{home}}$  directed from the ant to its home has the same magnitude as  $\vec{d}_{\text{net}}$  but the opposite direction (Fig. 3-16*c*). We already have the angle ( $-24.86^\circ \approx -25^\circ$ ) for the direction opposite  $\vec{d}_{\text{net}}$ . Thus,  $\vec{d}_{\text{home}}$  has magnitude and angle

$$d_{\text{home}} = 9.0 \text{ cm at } -25^\circ. \quad (\text{Answer})$$

A desert ant traveling more than 500 m from its home will actually make thousands of individual runs. Yet, it somehow knows how to calculate  $\vec{d}_{\text{home}}$  (without studying this chapter).



### 3-7 Vectors and the Laws of Physics

So far, in every figure that includes a coordinate system, the  $x$  and  $y$  axes are parallel to the edges of the book page. Thus, when a vector  $\vec{a}$  is included, its components  $a_x$  and  $a_y$  are also parallel to the edges (as in Fig. 3-17*a*). The only reason for that orientation of the axes is that it looks “proper”; there is no deeper reason. We could, instead, rotate the axes (but not the vector  $\vec{a}$ ) through an angle  $\phi$  as in Fig. 3-17*b*, in which case the components would have new values, call them  $a'_x$  and  $a'_y$ . Since there are an infinite number of choices of  $\phi$ , there are an infinite number of different pairs of components for  $\vec{a}$ .

Which then is the “right” pair of components? The answer is that they are all equally valid because each pair (with its axes) just gives us a different way of describing the same vector  $\vec{a}$ ; all produce the same magnitude and direction for the vector. In Fig. 3-17 we have

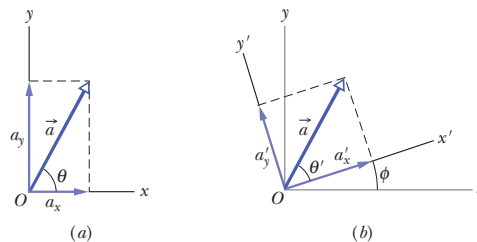
$$a = \sqrt{a_x^2 + a_y^2} = \sqrt{a_x'^2 + a_y'^2} \quad (3-18)$$

and

$$\theta = \theta' + \phi. \quad (3-19)$$

The point is that we have great freedom in choosing a coordinate system, because the relations among vectors do not depend on the location of the origin or on the orientation of the axes. This is also true of the relations of physics; they are all independent of the choice of coordinate system. Add to that the simplicity and richness of the language of vectors and you can see why the laws of physics are almost always presented in that language: one equation, like Eq. 3-9, can represent three (or even more) relations, like Eqs. 3-10, 3-11, and 3-12.

Rotating the axes changes the components but not the vector.



**Fig. 3-17** (a) The vector  $\vec{a}$  and its components. (b) The same vector, with the axes of the coordinate system rotated through an angle  $\phi$ .

### 3-8 Multiplying Vectors\*

There are three ways in which vectors can be multiplied, but none is exactly like the usual algebraic multiplication. As you read this section, keep in mind that a vector-capable calculator will help you multiply vectors only if you understand the basic rules of that multiplication.

#### Multiplying a Vector by a Scalar

If we multiply a vector  $\vec{a}$  by a scalar  $s$ , we get a new vector. Its magnitude is the product of the magnitude of  $\vec{a}$  and the absolute value of  $s$ . Its direction is the

\*This material will not be employed until later (Chapter 7 for scalar products and Chapter 11 for vector products), and so your instructor may wish to postpone assignment of this section.

direction of  $\vec{a}$  if  $s$  is positive but the opposite direction if  $s$  is negative. To divide  $\vec{a}$  by  $s$ , we multiply  $\vec{a}$  by  $1/s$ .

### Multiplying a Vector by a Vector

There are two ways to multiply a vector by a vector: one way produces a scalar (called the *scalar product*), and the other produces a new vector (called the *vector product*). (Students commonly confuse the two ways.)

### The Scalar Product

The **scalar product** of the vectors  $\vec{a}$  and  $\vec{b}$  in Fig. 3-18a is written as  $\vec{a} \cdot \vec{b}$  and defined to be

$$\vec{a} \cdot \vec{b} = ab \cos \phi, \tag{3-20}$$

where  $a$  is the magnitude of  $\vec{a}$ ,  $b$  is the magnitude of  $\vec{b}$ , and  $\phi$  is the angle between  $\vec{a}$  and  $\vec{b}$  (or, more properly, between the directions of  $\vec{a}$  and  $\vec{b}$ ). There are actually two such angles:  $\phi$  and  $360^\circ - \phi$ . Either can be used in Eq. 3-20, because their cosines are the same.

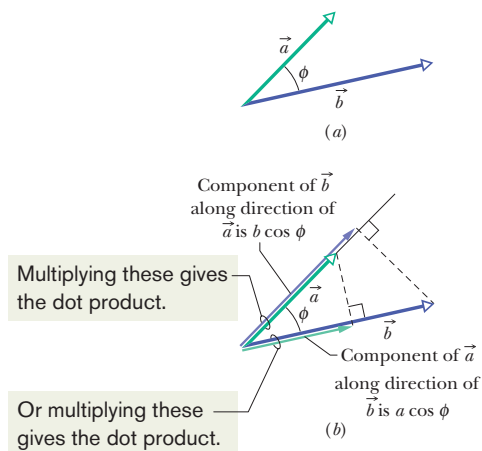
Note that there are only scalars on the right side of Eq. 3-20 (including the value of  $\cos \phi$ ). Thus  $\vec{a} \cdot \vec{b}$  on the left side represents a *scalar* quantity. Because of the notation,  $\vec{a} \cdot \vec{b}$  is also known as the **dot product** and is spoken as “a dot b.”

A dot product can be regarded as the product of two quantities: (1) the magnitude of one of the vectors and (2) the scalar component of the second vector along the direction of the first vector. For example, in Fig. 3-18b,  $\vec{a}$  has a scalar component  $a \cos \phi$  along the direction of  $\vec{b}$ ; note that a perpendicular dropped from the head of  $\vec{a}$  onto  $\vec{b}$  determines that component. Similarly,  $\vec{b}$  has a scalar component  $b \cos \phi$  along the direction of  $\vec{a}$ .

If the angle  $\phi$  between two vectors is  $0^\circ$ , the component of one vector along the other is maximum, and so also is the dot product of the vectors. If, instead,  $\phi$  is  $90^\circ$ , the component of one vector along the other is zero, and so is the dot product.

Equation 3-20 can be rewritten as follows to emphasize the components:

$$\vec{a} \cdot \vec{b} = (a \cos \phi)(b) = (a)(b \cos \phi). \tag{3-21}$$



**Fig. 3-18** (a) Two vectors  $\vec{a}$  and  $\vec{b}$ , with an angle  $\phi$  between them. (b) Each vector has a component along the direction of the other vector.

The commutative law applies to a scalar product, so we can write

$$\vec{a} \cdot \vec{b} = \vec{b} \cdot \vec{a}.$$

When two vectors are in unit-vector notation, we write their dot product as

$$\vec{a} \cdot \vec{b} = (a_x \hat{i} + a_y \hat{j} + a_z \hat{k}) \cdot (b_x \hat{i} + b_y \hat{j} + b_z \hat{k}), \quad (3-22)$$

which we can expand according to the distributive law: Each vector component of the first vector is to be dotted with each vector component of the second vector. By doing so, we can show that

$$\vec{a} \cdot \vec{b} = a_x b_x + a_y b_y + a_z b_z. \quad (3-23)$$

#### CHECKPOINT 4

Vectors  $\vec{C}$  and  $\vec{D}$  have magnitudes of 3 units and 4 units, respectively. What is the angle between the directions of  $\vec{C}$  and  $\vec{D}$  if  $\vec{C} \cdot \vec{D}$  equals (a) zero, (b) 12 units, and (c)  $-12$  units?

### Sample Problem

#### Angle between two vectors using dot products

What is the angle  $\phi$  between  $\vec{a} = 3.0\hat{i} - 4.0\hat{j}$  and  $\vec{b} = -2.0\hat{i} + 3.0\hat{k}$ ? (*Caution:* Although many of the following steps can be bypassed with a vector-capable calculator, you will learn more about scalar products if, at least here, you use these steps.)

#### KEY IDEA

The angle between the directions of two vectors is included in the definition of their scalar product (Eq. 3-20):

$$\vec{a} \cdot \vec{b} = ab \cos \phi. \quad (3-24)$$

**Calculations:** In Eq. 3-24,  $a$  is the magnitude of  $\vec{a}$ , or

$$a = \sqrt{3.0^2 + (-4.0)^2} = 5.00, \quad (3-25)$$

and  $b$  is the magnitude of  $\vec{b}$ , or

$$b = \sqrt{(-2.0)^2 + 3.0^2} = 3.61. \quad (3-26)$$

We can separately evaluate the left side of Eq. 3-24 by writ-

ing the vectors in unit-vector notation and using the distributive law:

$$\begin{aligned} \vec{a} \cdot \vec{b} &= (3.0\hat{i} - 4.0\hat{j}) \cdot (-2.0\hat{i} + 3.0\hat{k}) \\ &= (3.0\hat{i}) \cdot (-2.0\hat{i}) + (3.0\hat{i}) \cdot (3.0\hat{k}) \\ &\quad + (-4.0\hat{j}) \cdot (-2.0\hat{i}) + (-4.0\hat{j}) \cdot (3.0\hat{k}). \end{aligned}$$

We next apply Eq. 3-20 to each term in this last expression. The angle between the unit vectors in the first term ( $\hat{i}$  and  $\hat{i}$ ) is  $0^\circ$ , and in the other terms it is  $90^\circ$ . We then have

$$\begin{aligned} \vec{a} \cdot \vec{b} &= -(6.0)(1) + (9.0)(0) + (8.0)(0) - (12)(0) \\ &= -6.0. \end{aligned}$$

Substituting this result and the results of Eqs. 3-25 and 3-26 into Eq. 3-24 yields

$$-6.0 = (5.00)(3.61) \cos \phi,$$

so  $\phi = \cos^{-1} \frac{-6.0}{(5.00)(3.61)} = 109^\circ \approx 110^\circ$ . (Answer)



Additional examples, video, and practice available at WileyPLUS

## The Vector Product

The **vector product** of  $\vec{a}$  and  $\vec{b}$ , written  $\vec{a} \times \vec{b}$ , produces a third vector  $\vec{c}$  whose magnitude is

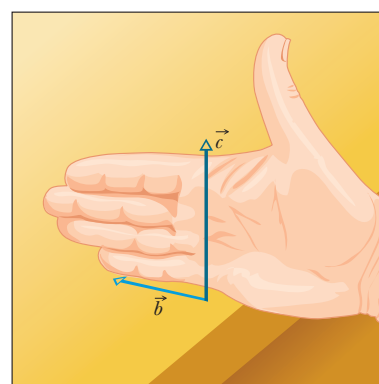
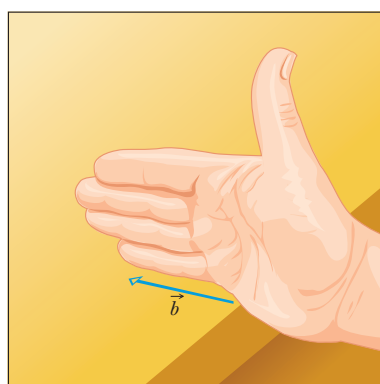
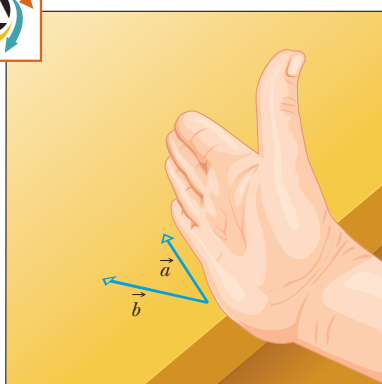
$$c = ab \sin \phi, \quad (3-27)$$

where  $\phi$  is the *smaller* of the two angles between  $\vec{a}$  and  $\vec{b}$ . (You must use the smaller of the two angles between the vectors because  $\sin \phi$  and  $\sin(360^\circ - \phi)$  differ in algebraic sign.) Because of the notation,  $\vec{a} \times \vec{b}$  is also known as the **cross product**, and in speech it is “a cross b.”

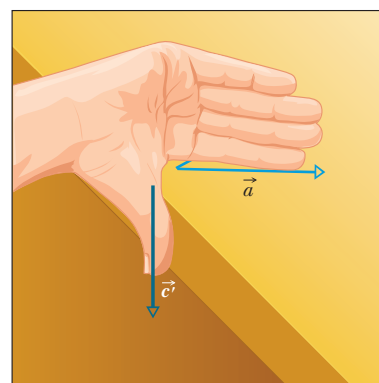
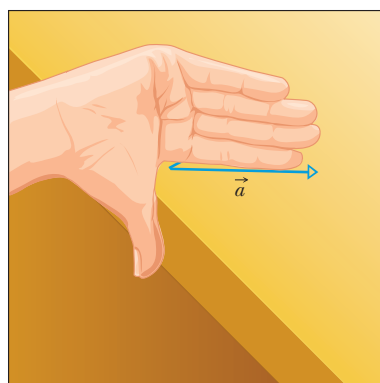
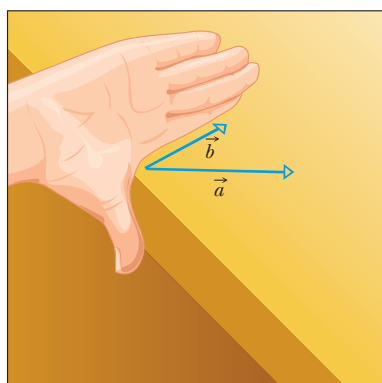
If  $\vec{a}$  and  $\vec{b}$  are parallel or antiparallel,  $\vec{a} \times \vec{b} = 0$ . The magnitude of  $\vec{a} \times \vec{b}$ , which can be written as  $|\vec{a} \times \vec{b}|$ , is maximum when  $\vec{a}$  and  $\vec{b}$  are perpendicular to each other.

The direction of  $\vec{c}$  is perpendicular to the plane that contains  $\vec{a}$  and  $\vec{b}$ . Figure 3-19a shows how to determine the direction of  $\vec{c} = \vec{a} \times \vec{b}$  with what is known as a **right-hand rule**. Place the vectors  $\vec{a}$  and  $\vec{b}$  tail to tail without altering their orientations, and imagine a line that is perpendicular to their plane where they meet. Pretend to place your *right* hand around that line in such a way that your fingers would sweep  $\vec{a}$  into  $\vec{b}$  through the smaller angle between them. Your outstretched thumb points in the direction of  $\vec{c}$ .

The order of the vector multiplication is important. In Fig. 3-19b, we are determining the direction of  $\vec{c}' = \vec{b} \times \vec{a}$ , so the fingers are placed to sweep  $\vec{b}$  into  $\vec{a}$  through the smaller angle. The thumb ends up in the opposite direction from



(a)



(b)

**Fig. 3-19** Illustration of the right-hand rule for vector products. (a) Sweep vector  $\vec{a}$  into vector  $\vec{b}$  with the fingers of your right hand. Your outstretched thumb shows the direction of vector  $\vec{c} = \vec{a} \times \vec{b}$ . (b) Showing that  $\vec{b} \times \vec{a}$  is the reverse of  $\vec{a} \times \vec{b}$ .

previously, and so it must be that  $\vec{c}' = -\vec{c}$ ; that is,

$$\vec{b} \times \vec{a} = -(\vec{a} \times \vec{b}). \quad (3-28)$$

In other words, the commutative law does not apply to a vector product.

In unit-vector notation, we write

$$\vec{a} \times \vec{b} = (a_x \hat{i} + a_y \hat{j} + a_z \hat{k}) \times (b_x \hat{i} + b_y \hat{j} + b_z \hat{k}), \quad (3-29)$$

which can be expanded according to the distributive law; that is, each component of the first vector is to be crossed with each component of the second vector. The cross products of unit vectors are given in Appendix E (see “Products of Vectors”). For example, in the expansion of Eq. 3-29, we have

$$a_x \hat{i} \times b_x \hat{i} = a_x b_x (\hat{i} \times \hat{i}) = 0,$$

because the two unit vectors  $\hat{i}$  and  $\hat{i}$  are parallel and thus have a zero cross product. Similarly, we have

$$a_x \hat{i} \times b_y \hat{j} = a_x b_y (\hat{i} \times \hat{j}) = a_x b_y \hat{k}.$$

In the last step we used Eq. 3-27 to evaluate the magnitude of  $\hat{i} \times \hat{j}$  as unity. (These vectors  $\hat{i}$  and  $\hat{j}$  each have a magnitude of unity, and the angle between them is  $90^\circ$ .) Also, we used the right-hand rule to get the direction of  $\hat{i} \times \hat{j}$  as being in the positive direction of the  $z$  axis (thus in the direction of  $\hat{k}$ ).

Continuing to expand Eq. 3-29, you can show that

$$\vec{a} \times \vec{b} = (a_y b_z - b_y a_z) \hat{i} + (a_z b_x - b_z a_x) \hat{j} + (a_x b_y - b_x a_y) \hat{k}. \quad (3-30)$$

A determinant (Appendix E) or a vector-capable calculator can also be used.

To check whether any  $xyz$  coordinate system is a right-handed coordinate system, use the right-hand rule for the cross product  $\hat{i} \times \hat{j} = \hat{k}$  with that system. If your fingers sweep  $\hat{i}$  (positive direction of  $x$ ) into  $\hat{j}$  (positive direction of  $y$ ) with the outstretched thumb pointing in the positive direction of  $z$  (not the negative direction), then the system is right-handed.

### CHECKPOINT 5

Vectors  $\vec{C}$  and  $\vec{D}$  have magnitudes of 3 units and 4 units, respectively. What is the angle between the directions of  $\vec{C}$  and  $\vec{D}$  if the magnitude of the vector product  $\vec{C} \times \vec{D}$  is (a) zero and (b) 12 units?

### Sample Problem

#### Cross product, right-hand rule

In Fig. 3-20, vector  $\vec{a}$  lies in the  $xy$  plane, has a magnitude of 18 units and points in a direction  $250^\circ$  from the positive direction of the  $x$  axis. Also, vector  $\vec{b}$  has a magnitude of 12 units and points in the positive direction of the  $z$  axis. What is the vector product  $\vec{c} = \vec{a} \times \vec{b}$ ?

#### KEY IDEA

When we have two vectors in magnitude-angle notation, we find the magnitude of their cross product with Eq. 3-27 and the direction of their cross product with the right-hand rule of Fig. 3-19.

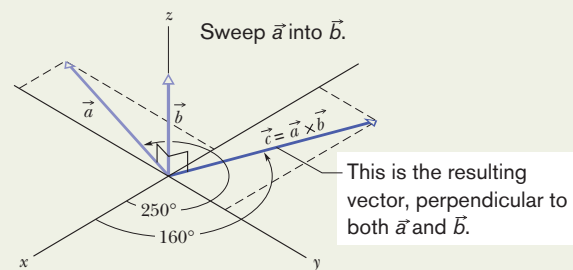


Fig. 3-20 Vector  $\vec{c}$  (in the  $xy$  plane) is the vector (or cross) product of vectors  $\vec{a}$  and  $\vec{b}$ .



**Calculations:** For the magnitude we write

$$c = ab \sin \phi = (18)(12)(\sin 90^\circ) = 216. \quad (\text{Answer})$$

To determine the direction in Fig. 3-20, imagine placing the fingers of your right hand around a line perpendicular to the plane of  $\vec{a}$  and  $\vec{b}$  (the line on which  $\vec{c}$  is shown) such that your fingers sweep  $\vec{a}$  into  $\vec{b}$ . Your outstretched thumb then

gives the direction of  $\vec{c}$ . Thus, as shown in the figure,  $\vec{c}$  lies in the  $xy$  plane. Because its direction is perpendicular to the direction of  $\vec{a}$  (a cross product always gives a perpendicular vector), it is at an angle of

$$250^\circ - 90^\circ = 160^\circ \quad (\text{Answer})$$

from the positive direction of the  $x$  axis.

### Sample Problem

#### Cross product, unit-vector notation

If  $\vec{a} = 3\hat{i} - 4\hat{j}$  and  $\vec{b} = -2\hat{i} + 3\hat{k}$ , what is  $\vec{c} = \vec{a} \times \vec{b}$ ?

#### KEY IDEA

When two vectors are in unit-vector notation, we can find their cross product by using the distributive law.

**Calculations:** Here we write

$$\begin{aligned} \vec{c} &= (3\hat{i} - 4\hat{j}) \times (-2\hat{i} + 3\hat{k}) \\ &= 3\hat{i} \times (-2\hat{i}) + 3\hat{i} \times 3\hat{k} + (-4\hat{j}) \times (-2\hat{i}) \\ &\quad + (-4\hat{j}) \times 3\hat{k}. \end{aligned}$$

We next evaluate each term with Eq. 3-27, finding the direction with the right-hand rule. For the first term here, the angle  $\phi$  between the two vectors being crossed is 0. For the other terms,  $\phi$  is  $90^\circ$ . We find

$$\begin{aligned} \vec{c} &= -6(0) + 9(-\hat{j}) + 8(-\hat{k}) - 12\hat{i} \\ &= -12\hat{i} - 9\hat{j} - 8\hat{k}. \end{aligned} \quad (\text{Answer})$$

This vector  $\vec{c}$  is perpendicular to both  $\vec{a}$  and  $\vec{b}$ , a fact you can check by showing that  $\vec{c} \cdot \vec{a} = 0$  and  $\vec{c} \cdot \vec{b} = 0$ ; that is, there is no component of  $\vec{c}$  along the direction of either  $\vec{a}$  or  $\vec{b}$ .



Additional examples, video, and practice available at *WileyPLUS*

### REVIEW & SUMMARY

**Scalars and Vectors** *Scalars*, such as temperature, have magnitude only. They are specified by a number with a unit ( $10^\circ\text{C}$ ) and obey the rules of arithmetic and ordinary algebra. *Vectors*, such as displacement, have both magnitude and direction (5 m, north) and obey the rules of vector algebra.

**Adding Vectors Geometrically** Two vectors  $\vec{a}$  and  $\vec{b}$  may be added geometrically by drawing them to a common scale and placing them head to tail. The vector connecting the tail of the first to the head of the second is the vector sum  $\vec{s}$ . To subtract  $\vec{b}$  from  $\vec{a}$ , reverse the direction of  $\vec{b}$  to get  $-\vec{b}$ ; then add  $-\vec{b}$  to  $\vec{a}$ . Vector addition is commutative and obeys the associative law.

**Components of a Vector** The (scalar) *components*  $a_x$  and  $a_y$  of any two-dimensional vector  $\vec{a}$  along the coordinate axes are found by dropping perpendicular lines from the ends of  $\vec{a}$  onto the coordinate axes. The components are given by

$$a_x = a \cos \theta \quad \text{and} \quad a_y = a \sin \theta, \quad (3-5)$$

where  $\theta$  is the angle between the positive direction of the  $x$  axis and the direction of  $\vec{a}$ . The algebraic sign of a component indicates

its direction along the associated axis. Given its components, we can find the magnitude and orientation of the vector  $\vec{a}$  with

$$a = \sqrt{a_x^2 + a_y^2} \quad \text{and} \quad \tan \theta = \frac{a_y}{a_x}. \quad (3-6)$$

**Unit-Vector Notation** *Unit vectors*  $\hat{i}$ ,  $\hat{j}$ , and  $\hat{k}$  have magnitudes of unity and are directed in the positive directions of the  $x$ ,  $y$ , and  $z$  axes, respectively, in a right-handed coordinate system. We can write a vector  $\vec{a}$  in terms of unit vectors as

$$\vec{a} = a_x\hat{i} + a_y\hat{j} + a_z\hat{k}, \quad (3-7)$$

in which  $a_x\hat{i}$ ,  $a_y\hat{j}$ , and  $a_z\hat{k}$  are the **vector components** of  $\vec{a}$  and  $a_x$ ,  $a_y$ , and  $a_z$  are its **scalar components**.

**Adding Vectors in Component Form** To add vectors in component form, we use the rules

$$r_x = a_x + b_x \quad r_y = a_y + b_y \quad r_z = a_z + b_z. \quad (3-10 \text{ to } 3-12)$$

Here  $\vec{a}$  and  $\vec{b}$  are the vectors to be added, and  $\vec{r}$  is the vector sum. Note that we add components axis by axis.

**Product of a Scalar and a Vector** The product of a scalar  $s$  and a vector  $\vec{v}$  is a new vector whose magnitude is  $sv$  and whose direction is the same as that of  $\vec{v}$  if  $s$  is positive, and opposite that of  $\vec{v}$  if  $s$  is negative. To divide  $\vec{v}$  by  $s$ , multiply  $\vec{v}$  by  $1/s$ .

**The Scalar Product** The **scalar** (or **dot**) **product** of two vectors  $\vec{a}$  and  $\vec{b}$  is written  $\vec{a} \cdot \vec{b}$  and is the *scalar* quantity given by

$$\vec{a} \cdot \vec{b} = ab \cos \phi, \quad (3-20)$$

in which  $\phi$  is the angle between the directions of  $\vec{a}$  and  $\vec{b}$ . A scalar product is the product of the magnitude of one vector and the scalar component of the second vector along the direction of the first vector. In unit-vector notation,

$$\vec{a} \cdot \vec{b} = (a_x \hat{i} + a_y \hat{j} + a_z \hat{k}) \cdot (b_x \hat{i} + b_y \hat{j} + b_z \hat{k}), \quad (3-22)$$

**\*\* View All Solutions Here \*\***

which may be expanded according to the distributive law. Note that  $\vec{a} \cdot \vec{b} = \vec{b} \cdot \vec{a}$ .

**The Vector Product** The **vector** (or **cross**) **product** of two vectors  $\vec{a}$  and  $\vec{b}$  is written  $\vec{a} \times \vec{b}$  and is a *vector*  $\vec{c}$  whose magnitude  $c$  is given by

$$c = ab \sin \phi, \quad (3-27)$$

in which  $\phi$  is the smaller of the angles between the directions of  $\vec{a}$  and  $\vec{b}$ . The direction of  $\vec{c}$  is perpendicular to the plane defined by  $\vec{a}$  and  $\vec{b}$  and is given by a right-hand rule, as shown in Fig. 3-19. Note that  $\vec{a} \times \vec{b} = -(\vec{b} \times \vec{a})$ . In unit-vector notation,

$$\vec{a} \times \vec{b} = (a_x \hat{i} + a_y \hat{j} + a_z \hat{k}) \times (b_x \hat{i} + b_y \hat{j} + b_z \hat{k}), \quad (3-29)$$

which we may expand with the distributive law.

**1** Can the sum of the magnitudes of two vectors ever be equal to the magnitude of the sum of the same two vectors? If no, why not? If yes, when?

**2** The two vectors shown in Fig. 3-21 lie in an  $xy$  plane. What are the signs of the  $x$  and  $y$  components, respectively, of (a)  $\vec{d}_1 + \vec{d}_2$ , (b)  $\vec{d}_1 - \vec{d}_2$ , and (c)  $\vec{d}_2 - \vec{d}_1$ ?

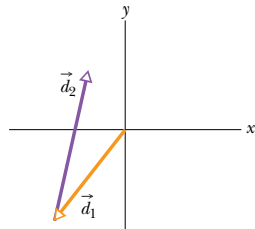


Fig. 3-21 Question 2.

**3** Being part of the “Gators,” the University of Florida golfing team must play on a putting green with an alligator pit. Figure 3-22 shows an overhead view of one putting challenge of the team; an  $xy$  coordinate system is superimposed. Team members must putt from the origin to the hole, which is at  $xy$  coordinates (8 m, 12 m), but they can putt the golf ball using only one or more of the following displacements, one or more times:

$$\vec{d}_1 = (8 \text{ m})\hat{i} + (6 \text{ m})\hat{j}, \quad \vec{d}_2 = (6 \text{ m})\hat{j}, \quad \vec{d}_3 = (8 \text{ m})\hat{i}.$$

The pit is at coordinates (8 m, 6 m). If a team member putts the ball

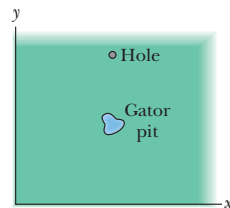


Fig. 3-22 Question 3.

into or through the pit, the member is automatically transferred to Florida State University, the arch rival. What sequence of displacements should a team member use to avoid the pit?

**4** Equation 3-2 shows that the addition of two vectors  $\vec{a}$  and  $\vec{b}$  is commutative. Does that mean subtraction is commutative, so that  $\vec{a} - \vec{b} = \vec{b} - \vec{a}$ ?

**5** Which of the arrangements of axes in Fig. 3-23 can be labeled “right-handed coordinate system”? As usual, each axis label indicates the positive side of the axis.

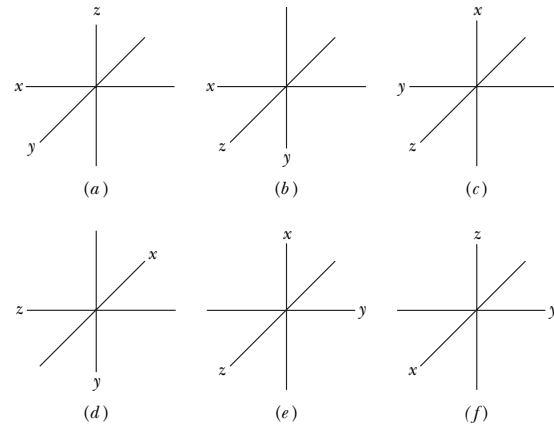


Fig. 3-23 Question 5.

**6** Describe two vectors  $\vec{a}$  and  $\vec{b}$  such that

(a)  $\vec{a} + \vec{b} = \vec{c}$  and  $a + b = c$ ;

(b)  $\vec{a} + \vec{b} = \vec{a} - \vec{b}$ ;

(c)  $\vec{a} + \vec{b} = \vec{c}$  and  $a^2 + b^2 = c^2$ .

**7** If  $\vec{d} = \vec{a} + \vec{b} + (-\vec{c})$ , does (a)  $\vec{a} + (-\vec{d}) = \vec{c} + (-\vec{b})$ , (b)  $\vec{a} = (-\vec{b}) + \vec{d} + \vec{c}$ , and (c)  $\vec{c} + (-\vec{d}) = \vec{a} + \vec{b}$ ?

**8** If  $\vec{a} \cdot \vec{b} = \vec{a} \cdot \vec{c}$ , must  $\vec{b}$  equal  $\vec{c}$ ?

**9** If  $\vec{F} = q(\vec{v} \times \vec{B})$  and  $\vec{v}$  is perpendicular to  $\vec{B}$ , then what is the

**\*\* View All Solutions Here \*\***

direction of  $\vec{B}$  in the three situations shown in Fig. 3-24 when constant  $q$  is (a) positive and (b) negative?

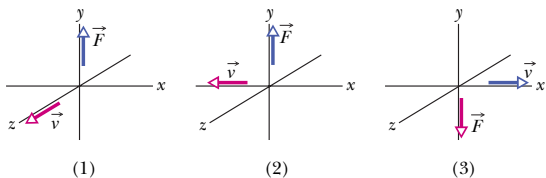


Fig. 3-24 Question 9.

10 Figure 3-25 shows vector  $\vec{A}$  and four other vectors that have the same magnitude but differ in orientation. (a) Which of those other four vectors have the same dot product with  $\vec{A}$ ? (b) Which have a negative dot product with  $\vec{A}$ ?

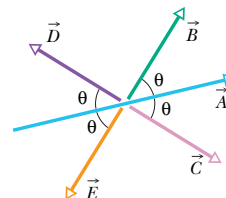


Fig. 3-25 Question 10.

**\*\* View All Solutions Here \*\***



**GO** Tutoring problem available (at instructor's discretion) in WileyPLUS and WebAssign  
**SSM** Worked-out solution available in Student Solutions Manual  
**WWW** Worked-out solution is at <http://www.wiley.com/college/halliday>  
**ILW** Interactive solution is at  
 Number of dots indicates level of problem difficulty  
 Additional information available in *The Flying Circus of Physics* and at [flyingcircusofphysics.com](http://flyingcircusofphysics.com)

**sec. 3-4 Components of Vectors**

•1 **SSM** What are (a) the  $x$  component and (b) the  $y$  component of a vector  $\vec{a}$  in the  $xy$  plane if its direction is  $250^\circ$  counterclockwise from the positive direction of the  $x$  axis and its magnitude is  $7.3$  m?

•2 A displacement vector  $\vec{r}$  in the  $xy$  plane is  $15$  m long and directed at angle  $\theta = 30^\circ$  in Fig. 3-26. Determine (a) the  $x$  component and (b) the  $y$  component of the vector.

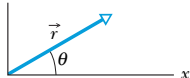


Fig. 3-26 Problem 2.

•3 **SSM** The  $x$  component of vector  $\vec{A}$  is  $-25.0$  m and the  $y$  component is  $+40.0$  m. (a) What is the magnitude of  $\vec{A}$ ? (b) What is the angle between the direction of  $\vec{A}$  and the positive direction of  $x$ ?

•4 Express the following angles in radians: (a)  $20.0^\circ$ , (b)  $50.0^\circ$ , (c)  $100^\circ$ . Convert the following angles to degrees: (d)  $0.330$  rad, (e)  $2.10$  rad, (f)  $7.70$  rad.

•5 A ship sets out to sail to a point  $120$  km due north. An unexpected storm blows the ship to a point  $100$  km due east of its starting point. (a) How far and (b) in what direction must it now sail to reach its original destination?

•6 In Fig. 3-27, a heavy piece of machinery is raised by sliding it a distance  $d = 12.5$  m along a plank oriented at angle  $\theta = 20.0^\circ$  to the horizontal. How far is it moved (a) vertically and (b) horizontally?

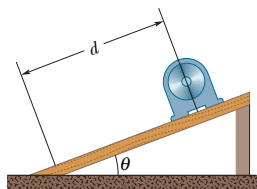


Fig. 3-27 Problem 6.

••7 **SSM WWW** A room has dimensions  $3.00$  m (height)  $\times$   $3.70$  m  $\times$   $4.30$  m. A fly starting at one corner flies around, ending up at the diagonally opposite corner. (a) What is the magnitude of its displacement? (b) Could the length of its path be less than this magnitude? (c) Greater? (d) Equal? (e) Choose a suitable coordinate system and express the components of the displacement vector in that system in unit-vector notation. (f) If the fly walks, what is the length of the shortest path? (*Hint:* This can be answered without calculus. The room is like a box. Unfold its walls to flatten them into a plane.)

**sec. 3-6 Adding Vectors by Components**

•8 A person walks in the following pattern:  $3.1$  km north, then  $2.4$  km west, and finally  $5.2$  km south. (a) Sketch the vector diagram that represents this motion. (b) How far and (c) in what direction would a bird fly in a straight line from the same starting point to the same final point?

•9 Two vectors are given by

$$\vec{a} = (4.0 \text{ m})\hat{i} - (3.0 \text{ m})\hat{j} + (1.0 \text{ m})\hat{k}$$

and  $\vec{b} = (-1.0 \text{ m})\hat{i} + (1.0 \text{ m})\hat{j} + (4.0 \text{ m})\hat{k}$ .

In unit-vector notation, find (a)  $\vec{a} + \vec{b}$ , (b)  $\vec{a} - \vec{b}$ , and (c) a third vector  $\vec{c}$  such that  $\vec{a} - \vec{b} + \vec{c} = 0$ .

•10 Find the (a)  $x$ , (b)  $y$ , and (c)  $z$  components of the sum  $\vec{r}$  of the displacements  $\vec{c}$  and  $\vec{d}$  whose components in meters are  $c_x = 7.4, c_y = -3.8, c_z = -6.1; d_x = 4.4, d_y = -2.0, d_z = 3.3$ .

•11 **SSM** (a) In unit-vector notation, what is the sum  $\vec{a} + \vec{b}$  if  $\vec{a} = (4.0 \text{ m})\hat{i} + (3.0 \text{ m})\hat{j}$  and  $\vec{b} = (-13.0 \text{ m})\hat{i} + (7.0 \text{ m})\hat{j}$ ? What are the (b) magnitude and (c) direction of  $\vec{a} + \vec{b}$ ?

•12 A car is driven east for a distance of  $50$  km, then north for  $30$  km, and then in a direction  $30^\circ$  east of north for  $25$  km. Sketch the vector diagram and determine (a) the magnitude and (b) the angle of the car's total displacement from its starting point.

•13 A person desires to reach a point that is  $3.40$  km from her present location and in a direction that is  $35.0^\circ$  north of east. However, she must travel along streets that are oriented either north-south or east-west. What is the minimum distance she could travel to reach her destination?

•14 You are to make four straight-line moves over a flat desert floor, starting at the origin of an  $xy$  coordinate system and ending at the  $xy$  coordinates  $(-140 \text{ m}, 30 \text{ m})$ . The  $x$  component and  $y$  component of your moves are the following, respectively, in meters:  $(20$  and  $60)$ , then  $(b_x$  and  $-70)$ , then  $(-20$  and  $c_y)$ , then  $(-60$  and  $-70)$ . What are (a) component  $b_x$  and (b) component  $c_y$ ? What are (c) the magnitude and (d) the angle (relative to the positive direction of the  $x$  axis) of the overall displacement?

•15 **SSM ILW WWW** The two vectors  $\vec{a}$  and  $\vec{b}$  in Fig. 3-28 have equal magnitudes of  $10.0$  m and the angles are  $\theta_1 = 30^\circ$  and  $\theta_2 =$

**\*\* View All Solutions Here \*\***

## \*\* View All Solutions Here \*\*

105°. Find the (a)  $x$  and (b)  $y$  components of their vector sum  $\vec{r}$ , (c) the magnitude of  $\vec{r}$ , and (d) the angle  $\vec{r}$  makes with the positive direction of the  $x$  axis.

•16 For the displacement vectors  $\vec{a} = (3.0 \text{ m})\hat{i} + (4.0 \text{ m})\hat{j}$  and  $\vec{b} = (5.0 \text{ m})\hat{i} + (-2.0 \text{ m})\hat{j}$ , give  $\vec{a} + \vec{b}$  in (a) unit-vector notation, and as (b) a magnitude and (c) an angle (relative to  $\hat{i}$ ). Now give  $\vec{b} - \vec{a}$  in (d) unit-vector notation, and as (e) a magnitude and (f) an angle.

•17 **GO ILW** Three vectors  $\vec{a}$ ,  $\vec{b}$ , and  $\vec{c}$  each have a magnitude of 50 m and lie in an  $xy$  plane. Their directions relative to the positive direction of the  $x$  axis are  $30^\circ$ ,  $195^\circ$ , and  $315^\circ$ , respectively. What are (a) the magnitude and (b) the angle of the vector  $\vec{a} + \vec{b} + \vec{c}$ , and (c) the magnitude and (d) the angle of  $\vec{a} - \vec{b} + \vec{c}$ ? What are the (e) magnitude and (f) angle of a fourth vector  $\vec{d}$  such that  $(\vec{a} + \vec{b}) - (\vec{c} + \vec{d}) = 0$ ?

•18 In the sum  $\vec{A} + \vec{B} = \vec{C}$ , vector  $\vec{A}$  has a magnitude of 12.0 m and is angled  $40.0^\circ$  counterclockwise from the  $+x$  direction, and vector  $\vec{C}$  has a magnitude of 15.0 m and is angled  $20.0^\circ$  counterclockwise from the  $-x$  direction. What are (a) the magnitude and (b) the angle (relative to  $+x$ ) of  $\vec{B}$ ?

•19 In a game of lawn chess, where pieces are moved between the centers of squares that are each 1.00 m on edge, a knight is moved in the following way: (1) two squares forward, one square rightward; (2) two squares leftward, one square forward; (3) two squares forward, one square leftward. What are (a) the magnitude and (b) the angle (relative to “forward”) of the knight’s overall displacement for the series of three moves?

•20 **GO** An explorer is caught in a whiteout (in which the snowfall is so thick that the ground cannot be distinguished from the sky) while returning to base camp. He was supposed to travel due north for 5.6 km, but when the snow clears, he discovers that he actually traveled 7.8 km at  $50^\circ$  north of due east. (a) How far and (b) in what direction must he now travel to reach base camp?

•21 **GO** An ant, crazed by the Sun on a hot Texas afternoon, darts over an  $xy$  plane scratched in the dirt. The  $x$  and  $y$  components of four consecutive darts are the following, all in centimeters:  $(30.0, 40.0)$ ,  $(b_x, -70.0)$ ,  $(-20.0, c_y)$ ,  $(-80.0, -70.0)$ . The overall displacement of the four darts has the  $xy$  components  $(-140, -20.0)$ . What are (a)  $b_x$  and (b)  $c_y$ ? What are the (c) magnitude and (d) angle (relative to the positive direction of the  $x$  axis) of the overall displacement?

•22 (a) What is the sum of the following four vectors in unit-vector notation? For that sum, what are (b) the magnitude, (c) the angle in degrees, and (d) the angle in radians?

$$\vec{E}: 6.00 \text{ m at } +0.900 \text{ rad} \quad \vec{F}: 5.00 \text{ m at } -75.0^\circ$$

$$\vec{G}: 4.00 \text{ m at } +1.20 \text{ rad} \quad \vec{H}: 6.00 \text{ m at } -210^\circ$$

•23 If  $\vec{B}$  is added to  $\vec{C} = 3.0\hat{i} + 4.0\hat{j}$ , the result is a vector in the positive direction of the  $y$  axis, with a magnitude equal to that of  $\vec{C}$ . What is the magnitude of  $\vec{B}$ ?

•24 Vector  $\vec{A}$ , which is directed along an  $x$  axis, is to be added to vector  $\vec{B}$ , which has a magnitude of 7.0 m. The sum is a third vector that is directed along the  $y$  axis, with a magnitude that is 3.0 times that of  $\vec{A}$ . What is that magnitude of  $\vec{A}$ ?

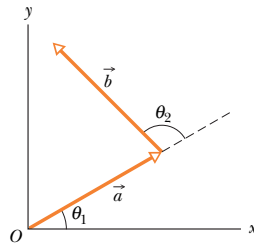


Fig. 3-28 Problem 15.

•25 **GO** Oasis  $B$  is 25 km due east of oasis  $A$ . Starting from oasis  $A$ , a camel walks 24 km in a direction  $15^\circ$  south of east and then walks 8.0 km due north. How far is the camel then from oasis  $B$ ?

•26 What is the sum of the following four vectors in (a) unit-vector notation, and as (b) a magnitude and (c) an angle?

$$\vec{A} = (2.00 \text{ m})\hat{i} + (3.00 \text{ m})\hat{j} \quad \vec{B}: 4.00 \text{ m, at } +65.0^\circ$$

$$\vec{C} = (-4.00 \text{ m})\hat{i} + (-6.00 \text{ m})\hat{j} \quad \vec{D}: 5.00 \text{ m, at } -235^\circ$$

•27 **GO** If  $\vec{d}_1 + \vec{d}_2 = 5\vec{d}_3$ ,  $\vec{d}_1 - \vec{d}_2 = 3\vec{d}_3$ , and  $\vec{d}_3 = 2\hat{i} + 4\hat{j}$ , then what are, in unit-vector notation, (a)  $\vec{d}_1$  and (b)  $\vec{d}_2$ ?

•28 Two beetles run across flat sand, starting at the same point. Beetle 1 runs 0.50 m due east, then 0.80 m at  $30^\circ$  north of due east. Beetle 2 also makes two runs; the first is 1.6 m at  $40^\circ$  east of due north. What must be (a) the magnitude and (b) the direction of its second run if it is to end up at the new location of beetle 1?

•29 **GO** Typical backyard ants often create a network of chemical trails for guidance. Extending outward from the nest, a trail branches (*bifurcates*) repeatedly, with  $60^\circ$  between the branches. If a roaming ant chances upon a trail, it can tell the way to the nest at any branch point: If it is moving away from the nest, it has two choices of path requiring a small turn in its travel direction, either  $30^\circ$  leftward or  $30^\circ$  rightward. If it is moving toward the nest, it has only one such choice. Figure 3-29 shows a typical ant trail, with lettered straight sections of 2.0 cm length and symmetric bifurcation of  $60^\circ$ . Path  $v$  is parallel to the  $y$  axis. What are the (a) magnitude and (b) angle (relative to the positive direction of the superimposed  $x$  axis) of an ant’s displacement from the nest (find it in the figure) if the ant enters the trail at point  $A$ ? What are the (c) magnitude and (d) angle if it enters at point  $B$ ?

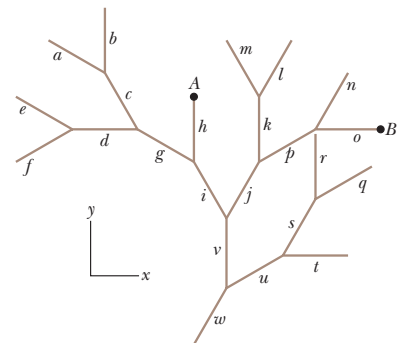


Fig. 3-29 Problem 29.

•30 Here are two vectors:

$$\vec{a} = (4.0 \text{ m})\hat{i} - (3.0 \text{ m})\hat{j} \quad \text{and} \quad \vec{b} = (6.0 \text{ m})\hat{i} + (8.0 \text{ m})\hat{j}.$$

What are (a) the magnitude and (b) the angle (relative to  $\hat{i}$ ) of  $\vec{a}$ ? What are (c) the magnitude and (d) the angle of  $\vec{b}$ ? What are (e) the magnitude and (f) the angle of  $\vec{a} + \vec{b}$ ; (g) the magnitude and (h) the angle of  $\vec{b} - \vec{a}$ ; and (i) the magnitude and (j) the angle of  $\vec{a} - \vec{b}$ ? (k) What is the angle between the directions of  $\vec{b} - \vec{a}$  and  $\vec{a} - \vec{b}$ ?

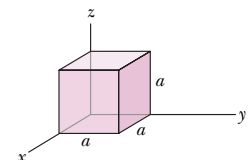


Fig. 3-30 Problem 31.

•31 In Fig. 3-30, a cube of edge length  $a$  sits with one corner at the ori-

## \*\* View All Solutions Here \*\*

gin of an  $xyz$  coordinate system. A *body diagonal* is a line that extends from one corner to another through the center. In unit-vector notation, what is the body diagonal that extends from the corner at (a) coordinates  $(0, 0, 0)$ , (b) coordinates  $(a, 0, 0)$ , (c) coordinates  $(0, a, 0)$ , and (d) coordinates  $(a, a, 0)$ ? (e) Determine the angles that the body diagonals make with the adjacent edges. (f) Determine the length of the body diagonals in terms of  $a$ .

### sec. 3-7 Vectors and the Laws of Physics

**•32** In Fig. 3-31, a vector  $\vec{a}$  with a magnitude of 17.0 m is directed at angle  $\theta = 56.0^\circ$  counterclockwise from the  $+x$  axis. What are the components (a)  $a_x$  and (b)  $a_y$  of the vector? A second coordinate system is inclined by angle  $\theta' = 18.0^\circ$  with respect to the first. What are the components (c)  $a'_x$  and (d)  $a'_y$  in this primed coordinate system?

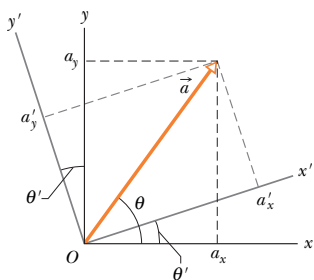


Fig. 3-31 Problem 32.

### sec. 3-8 Multiplying Vectors

**•33** For the vectors in Fig. 3-32, with  $a = 4$ ,  $b = 3$ , and  $c = 5$ , what are (a) the magnitude and (b) the direction of  $\vec{a} \times \vec{b}$ , (c) the magnitude and (d) the direction of  $\vec{a} \times \vec{c}$ , and (e) the magnitude and (f) the direction of  $\vec{b} \times \vec{c}$ ? (The  $z$  axis is not shown.)

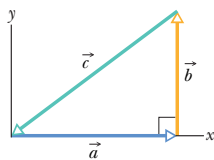


Fig. 3-32 Problems 33 and 54.

**•34** Two vectors are presented as  $\vec{a} = 3.0\hat{i} + 5.0\hat{j}$  and  $\vec{b} = 2.0\hat{i} + 4.0\hat{j}$ . Find (a)  $\vec{a} \times \vec{b}$ , (b)  $\vec{a} \cdot \vec{b}$ , (c)  $(\vec{a} + \vec{b}) \cdot \vec{b}$ , and (d) the component of  $\vec{a}$  along the direction of  $\vec{b}$ . (Hint: For (d), consider Eq. 3-20 and Fig. 3-18.)

**•35** Two vectors,  $\vec{r}$  and  $\vec{s}$ , lie in the  $xy$  plane. Their magnitudes are 4.50 and 7.30 units, respectively, and their directions are  $320^\circ$  and  $85.0^\circ$ , respectively, as measured counterclockwise from the positive  $x$  axis. What are the values of (a)  $\vec{r} \cdot \vec{s}$  and (b)  $\vec{r} \times \vec{s}$ ?

**•36** If  $\vec{d}_1 = 3\hat{i} - 2\hat{j} + 4\hat{k}$  and  $\vec{d}_2 = -5\hat{i} + 2\hat{j} - \hat{k}$ , then what is  $(\vec{d}_1 + \vec{d}_2) \cdot (\vec{d}_1 \times 4\vec{d}_2)$ ?

**•37** Three vectors are given by  $\vec{a} = 3.0\hat{i} + 3.0\hat{j} - 2.0\hat{k}$ ,  $\vec{b} = -1.0\hat{i} - 4.0\hat{j} + 2.0\hat{k}$ , and  $\vec{c} = 2.0\hat{i} + 2.0\hat{j} + 1.0\hat{k}$ . Find (a)  $\vec{a} \cdot (\vec{b} \times \vec{c})$ , (b)  $\vec{a} \cdot (\vec{b} + \vec{c})$ , and (c)  $\vec{a} \times (\vec{b} + \vec{c})$ .

**••38** For the following three vectors, what is  $3\vec{C} \cdot (2\vec{A} \times \vec{B})$ ?

$$\vec{A} = 2.00\hat{i} + 3.00\hat{j} - 4.00\hat{k}$$

$$\vec{B} = -3.00\hat{i} + 4.00\hat{j} + 2.00\hat{k} \quad \vec{C} = 7.00\hat{i} - 8.00\hat{j}$$

**••39** Vector  $\vec{A}$  has a magnitude of 6.00 units, vector  $\vec{B}$  has a magnitude of 7.00 units, and  $\vec{A} \cdot \vec{B}$  has a value of 14.0. What is the angle between the directions of  $\vec{A}$  and  $\vec{B}$ ?

**••40** Displacement  $\vec{d}_1$  is in the  $yz$  plane  $63.0^\circ$  from the positive direction of the  $y$  axis, has a positive  $z$  component, and has a magnitude of 4.50 m. Displacement  $\vec{d}_2$  is in the  $xz$  plane  $30.0^\circ$  from the positive direction of the  $x$  axis, has a positive  $z$  component, and has magnitude 1.40 m. What are (a)  $\vec{d}_1 \cdot \vec{d}_2$ , (b)  $\vec{d}_1 \times \vec{d}_2$ , and (c) the angle between  $\vec{d}_1$  and  $\vec{d}_2$ ?

**••41** SSM ILW WWW Use the definition of scalar product,  $\vec{a} \cdot \vec{b} = ab \cos \theta$ , and the fact that  $\vec{a} \cdot \vec{b} = a_x b_x + a_y b_y + a_z b_z$  to calculate the angle between the two vectors given by  $\vec{a} = 3.0\hat{i} + 3.0\hat{j} + 3.0\hat{k}$  and  $\vec{b} = 2.0\hat{i} + 1.0\hat{j} + 3.0\hat{k}$ .

**••42** In a meeting of mimes, mime 1 goes through a displacement  $\vec{d}_1 = (4.0 \text{ m})\hat{i} + (5.0 \text{ m})\hat{j}$  and mime 2 goes through a displacement  $\vec{d}_2 = (-3.0 \text{ m})\hat{i} + (4.0 \text{ m})\hat{j}$ . What are (a)  $\vec{d}_1 \times \vec{d}_2$ , (b)  $\vec{d}_1 \cdot \vec{d}_2$ , (c)  $(\vec{d}_1 + \vec{d}_2) \cdot \vec{d}_2$ , and (d) the component of  $\vec{d}_1$  along the direction of  $\vec{d}_2$ ? (Hint: For (d), see Eq. 3-20 and Fig. 3-18.)

**••43** SSM ILW The three vectors in Fig. 3-33 have magnitudes  $a = 3.00$  m,  $b = 4.00$  m, and  $c = 10.0$  m and angle  $\theta = 30.0^\circ$ . What are (a) the  $x$  component and (b) the  $y$  component of  $\vec{a}$ ; (c) the  $x$  component and (d) the  $y$  component of  $\vec{b}$ ; and (e) the  $x$  component and (f) the  $y$  component of  $\vec{c}$ ? If  $\vec{c} = p\vec{a} + q\vec{b}$ , what are the values of (g)  $p$  and (h)  $q$ ?

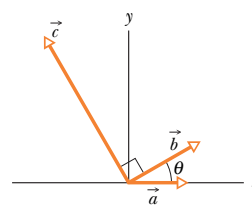


Fig. 3-33 Problem 43.

**••44** In the product  $\vec{F} = q\vec{v} \times \vec{B}$ , take  $q = 2$ ,

$$\vec{v} = 2.0\hat{i} + 4.0\hat{j} + 6.0\hat{k} \quad \text{and} \quad \vec{F} = 4.0\hat{i} - 20\hat{j} + 12\hat{k}.$$

What then is  $\vec{B}$  in unit-vector notation if  $B_x = B_y$ ?

### Additional Problems

**45** Vectors  $\vec{A}$  and  $\vec{B}$  lie in an  $xy$  plane.  $\vec{A}$  has magnitude 8.00 and angle  $130^\circ$ ;  $\vec{B}$  has components  $B_x = -7.72$  and  $B_y = -9.20$ . (a) What is  $5\vec{A} \cdot \vec{B}$ ? (b) What is  $4\vec{A} \times 3\vec{B}$  in (c) unit-vector notation and (d) magnitude-angle notation with spherical coordinates (see Fig. 3-34)? (e) What is the angle between the directions of  $\vec{A}$  and  $4\vec{A} \times 3\vec{B}$ ? (Hint: Think a bit before you resort to a calculation.) (f) What is  $\vec{A} + 3.00\hat{k}$  in (g) unit-vector notation and (h) magnitude-angle notation with spherical coordinates?

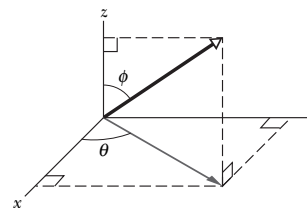


Fig. 3-34 Problem 45.

**46** Vector  $\vec{a}$  has a magnitude of 5.0 m and is directed east. Vector  $\vec{b}$  has a magnitude of 4.0 m and is directed  $35^\circ$  west of due north. What are (a) the magnitude and (b) the direction of  $\vec{a} + \vec{b}$ ? What are (c) the magnitude and (d) the direction of  $\vec{b} - \vec{a}$ ? (e) Draw a vector diagram for each combination.

**47** Vectors  $\vec{A}$  and  $\vec{B}$  lie in an  $xy$  plane.  $\vec{A}$  has magnitude 8.00 and angle  $130^\circ$ ;  $\vec{B}$  has components  $B_x = -7.72$  and  $B_y = -9.20$ . What are the angles between the negative direction of the  $y$  axis and (a) the direction of  $\vec{A}$ , (b) the direction of the product  $\vec{A} \times \vec{B}$ , and (c) the direction of  $\vec{A} \times (\vec{B} + 3.00\hat{k})$ ?

**48** Two vectors  $\vec{a}$  and  $\vec{b}$  have the components, in meters,  $a_x = 3.2$ ,  $a_y = 1.6$ ,  $b_x = 0.50$ ,  $b_y = 4.5$ . (a) Find the angle between the directions of  $\vec{a}$  and  $\vec{b}$ . There are two vectors in the  $xy$  plane that are



## \*\* View All Solutions Here \*\*

perpendicular to  $\vec{a}$  and have a magnitude of 5.0 m. One, vector  $\vec{c}$ , has a positive  $x$  component and the other, vector  $\vec{d}$ , a negative  $x$  component. What are (b) the  $x$  component and (c) the  $y$  component of vector  $\vec{c}$ , and (d) the  $x$  component and (e) the  $y$  component of vector  $\vec{d}$ ?

**49 SSM** A sailboat sets out from the U.S. side of Lake Erie for a point on the Canadian side, 90.0 km due north. The sailor, however, ends up 50.0 km due east of the starting point. (a) How far and (b) in what direction must the sailor now sail to reach the original destination?

**50** Vector  $\vec{d}_1$  is in the negative direction of a  $y$  axis, and vector  $\vec{d}_2$  is in the positive direction of an  $x$  axis. What are the directions of (a)  $\vec{d}_2/4$  and (b)  $\vec{d}_1/(-4)$ ? What are the magnitudes of products (c)  $\vec{d}_1 \cdot \vec{d}_2$  and (d)  $\vec{d}_1 \cdot (\vec{d}_2/4)$ ? What is the direction of the vector resulting from (e)  $\vec{d}_1 \times \vec{d}_2$  and (f)  $\vec{d}_2 \times \vec{d}_1$ ? What is the magnitude of the vector product in (g) part (e) and (h) part (f)? What are the (i) magnitude and (j) direction of  $\vec{d}_1 \times (\vec{d}_2/4)$ ?

**51** Rock *faults* are ruptures along which opposite faces of rock have slid past each other. In Fig. 3-35, points  $A$  and  $B$  coincided before the rock in the foreground slid down to the right. The net displacement  $\vec{AB}$  is along the plane of the fault. The horizontal component of  $\vec{AB}$  is the *strike-slip*  $AC$ . The component of  $\vec{AB}$  that is directed down the plane of the fault is the *dip-slip*  $AD$ . (a) What is the magnitude of the net displacement  $\vec{AB}$  if the strike-slip is 22.0 m and the dip-slip is 17.0 m? (b) If the plane of the fault is inclined at angle  $\phi = 52.0^\circ$  to the horizontal, what is the vertical component of  $\vec{AB}$ ?

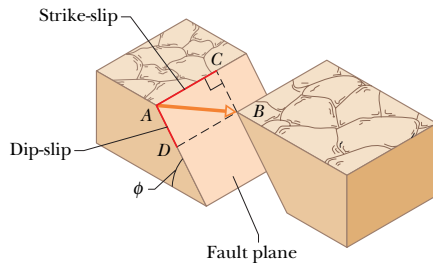


Fig. 3-35 Problem 51.

**52** Here are three displacements, each measured in meters:  $\vec{d}_1 = 4.0\hat{i} + 5.0\hat{j} - 6.0\hat{k}$ ,  $\vec{d}_2 = -1.0\hat{i} + 2.0\hat{j} + 3.0\hat{k}$ , and  $\vec{d}_3 = 4.0\hat{i} + 3.0\hat{j} + 2.0\hat{k}$ . (a) What is  $\vec{r} = \vec{d}_1 - \vec{d}_2 + \vec{d}_3$ ? (b) What is the angle between  $\vec{r}$  and the positive  $z$  axis? (c) What is the component of  $\vec{d}_1$  along the direction of  $\vec{d}_2$ ? (d) What is the component of  $\vec{d}_1$  that is perpendicular to the direction of  $\vec{d}_2$  and in the plane of  $\vec{d}_1$  and  $\vec{d}_2$ ? (Hint: For (c), consider Eq. 3-20 and Fig. 3-18; for (d), consider Eq. 3-27.)

**53 SSM** A vector  $\vec{a}$  of magnitude 10 units and another vector  $\vec{b}$  of magnitude 6.0 units differ in directions by  $60^\circ$ . Find (a) the scalar product of the two vectors and (b) the magnitude of the vector product  $\vec{a} \times \vec{b}$ .

**54** For the vectors in Fig. 3-32, with  $a = 4$ ,  $b = 3$ , and  $c = 5$ , calculate (a)  $\vec{a} \cdot \vec{b}$ , (b)  $\vec{a} \cdot \vec{c}$ , and (c)  $\vec{b} \cdot \vec{c}$ .

**55** A particle undergoes three successive displacements in a plane, as follows:  $\vec{d}_1$ , 4.00 m southwest; then  $\vec{d}_2$ , 5.00 m east; and finally  $\vec{d}_3$ , 6.00 m in a direction  $60.0^\circ$  north of east. Choose a coordinate system with the  $y$  axis pointing north and the  $x$  axis pointing east. What are (a) the  $x$  component and (b) the  $y$  component of  $\vec{d}_1$ ? What are (c) the  $x$  component and (d) the  $y$  component of

$\vec{d}_2$ ? What are (e) the  $x$  component and (f) the  $y$  component of  $\vec{d}_3$ ? Next, consider the *net* displacement of the particle for the three successive displacements. What are (g) the  $x$  component, (h) the  $y$  component, (i) the magnitude, and (j) the direction of the net displacement? If the particle is to return directly to the starting point, (k) how far and (l) in what direction should it move?

**56** Find the sum of the following four vectors in (a) unit-vector notation, and as (b) a magnitude and (c) an angle relative to  $+x$ .

$$\vec{P}: 10.0 \text{ m, at } 25.0^\circ \text{ counterclockwise from } +x$$

$$\vec{Q}: 12.0 \text{ m, at } 10.0^\circ \text{ counterclockwise from } +y$$

$$\vec{R}: 8.00 \text{ m, at } 20.0^\circ \text{ clockwise from } -y$$

$$\vec{S}: 9.00 \text{ m, at } 40.0^\circ \text{ counterclockwise from } -y$$

**57 SSM** If  $\vec{B}$  is added to  $\vec{A}$ , the result is  $6.0\hat{i} + 1.0\hat{j}$ . If  $\vec{B}$  is subtracted from  $\vec{A}$ , the result is  $-4.0\hat{i} + 7.0\hat{j}$ . What is the magnitude of  $\vec{A}$ ?

**58** A vector  $\vec{d}$  has a magnitude of 2.5 m and points north. What are (a) the magnitude and (b) the direction of  $4.0\vec{d}$ ? What are (c) the magnitude and (d) the direction of  $-3.0\vec{d}$ ?

**59**  $\vec{A}$  has the magnitude 12.0 m and is angled  $60.0^\circ$  counterclockwise from the positive direction of the  $x$  axis of an  $xy$  coordinate system. Also,  $\vec{B} = (12.0 \text{ m})\hat{i} + (8.00 \text{ m})\hat{j}$  on that same coordinate system. We now rotate the system counterclockwise about the origin by  $20.0^\circ$  to form an  $x'y'$  system. On this new system, what are (a)  $\vec{A}$  and (b)  $\vec{B}$ , both in unit-vector notation?

**60** If  $\vec{a} - \vec{b} = 2\vec{c}$ ,  $\vec{a} + \vec{b} = 4\vec{c}$ , and  $\vec{c} = 3\hat{i} + 4\hat{j}$ , then what are (a)  $\vec{a}$  and (b)  $\vec{b}$ ?

**61** (a) In unit-vector notation, what is  $\vec{r} = \vec{a} - \vec{b} + \vec{c}$  if  $\vec{a} = 5.0\hat{i} + 4.0\hat{j} - 6.0\hat{k}$ ,  $\vec{b} = -2.0\hat{i} + 2.0\hat{j} + 3.0\hat{k}$ , and  $\vec{c} = 4.0\hat{i} + 3.0\hat{j} + 2.0\hat{k}$ ? (b) Calculate the angle between  $\vec{r}$  and the positive  $z$  axis. (c) What is the component of  $\vec{a}$  along the direction of  $\vec{b}$ ? (d) What is the component of  $\vec{a}$  perpendicular to the direction of  $\vec{b}$  but in the plane of  $\vec{a}$  and  $\vec{b}$ ? (Hint: For (c), see Eq. 3-20 and Fig. 3-18; for (d), see Eq. 3-27.)

**62** A golfer takes three putts to get the ball into the hole. The first putt displaces the ball 3.66 m north, the second 1.83 m south-east, and the third 0.91 m southwest. What are (a) the magnitude and (b) the direction of the displacement needed to get the ball into the hole on the first putt?

**63** Here are three vectors in meters:

$$\vec{d}_1 = -3.0\hat{i} + 3.0\hat{j} + 2.0\hat{k}$$

$$\vec{d}_2 = -2.0\hat{i} - 4.0\hat{j} + 2.0\hat{k}$$

$$\vec{d}_3 = 2.0\hat{i} + 3.0\hat{j} + 1.0\hat{k}.$$

What results from (a)  $\vec{d}_1 \cdot (\vec{d}_2 + \vec{d}_3)$ , (b)  $\vec{d}_1 \cdot (\vec{d}_2 \times \vec{d}_3)$ , and (c)  $\vec{d}_1 \times (\vec{d}_2 + \vec{d}_3)$ ?

**64** Consider two displacements, one of magnitude 3 m and another of magnitude 4 m. Show how the displacement vectors may be combined to get a resultant displacement of magnitude (a) 7 m, (b) 1 m, and (c) 5 m.

**65** A protester carries his sign of protest, starting from the origin of an  $xyz$  coordinate system, with the  $xy$  plane horizontal. He moves 40 m in the negative direction of the  $x$  axis, then 20 m along a perpendicular path to his left, and then 25 m up a water tower. (a) In unit-vector notation, what is the displacement of the sign from start to end? (b) The sign then falls to the foot of the tower. What is the magnitude of the displacement of the sign from start to this new end?

## \*\* View All Solutions Here \*\*

## Chapter (3): VECTORS

Choose the correct answer:

1. A vector has two components (  $A_x = 3 \text{ cm}$  and  $A_y = -4 \text{ cm}$  ). What is the **magnitude of  $\vec{A}$**  ?

- (a) 4 cm                      (b) 5 cm                      (c) 1 cm                      (d) 7 cm

2. In question 2, What is the **direction of  $\vec{A}$**  ?

- (a)  $-53.1^\circ$                       (b)  $-25.3^\circ$                       (c)  $-17.9^\circ$                       (d)  $-36.9^\circ$

3. Given the two vectors  $\vec{a} = 2\hat{i} + 3\hat{j} + 4\hat{k}$  and  $\vec{b} = \hat{i} - 2\hat{j} + 3\hat{k}$ , Find  $\vec{c}$  where  $\vec{c} = \vec{a} + \vec{b}$  ?

- (a)  $\vec{c} = 3\hat{i} + 5\hat{j} + 7\hat{k}$                       (b)  $\vec{c} = 3\hat{i} + \hat{j} + 7\hat{k}$                       (c)  $\vec{c} = \hat{i} + \hat{j} + 7\hat{k}$                       (d)  $\vec{c} = \hat{i} + 5\hat{j} + \hat{k}$

4. In question 3, Find  $\vec{a} \cdot \vec{b}$  ?

- (a) 5                      (b) 15                      (c) 20                      (d) 8

5. Vectors  $\vec{C}$  and  $\vec{D}$  have magnitudes of **3 units** and **4 units** respectively. What is the **angle between the directions of  $\vec{C}$  and  $\vec{D}$**  if  $\vec{C} \times \vec{D} = 12$

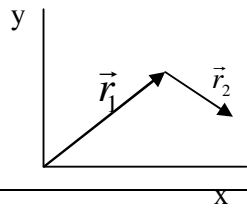
- (a)  $90^\circ$                       (b)  $180^\circ$                       (c)  $270^\circ$                       (d)  $0^\circ$

6. A vectors  $\vec{a}$  has two component,  $a_x = 2.6 \text{ m}$ ,  $a_y = -2.3 \text{ m}$ , what is the **direction of  $\vec{a}$**  ?

- (a)  $-48.5^\circ$                       (b)  $48.5^\circ$                       (c)  $-41.3^\circ$                       (d)  $41.3^\circ$

7. In the figure **what are the signs** of the **x and y** component of  $\vec{r}_1 + \vec{r}_2$  ?

- (a)  $(+, +)$                       (b)  $(-, -)$                       (c)  $(+, -)$                       (d)  $(-, +)$

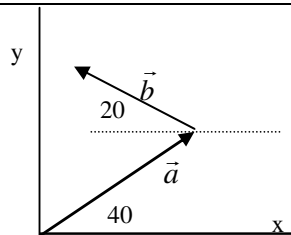


8. If  $\vec{a} \times \vec{b} = \vec{c}$  then **the value of  $c_y$**  equals:

- (a)  $a_z b_x - b_z a_x$                       (b)  $a_x b_y - b_x a_y$                       (c)  $a_y b_z - b_y a_z$                       (d)  $a_y b_x - b_y a_x$

9. Two vectors  $\vec{a}$  and  $\vec{b}$ ,  $\vec{a}$  has a magnitude of **12 m** and has an **angle of  $40^\circ$**  from the **+x** direction, and  $\vec{b}$  has a magnitude of **9 m** in the **direction shown**. **Find the x component of their vector sum?**

- (a) 17.65 m                      (b) 10.79 m                      (c) 0.73 m                      (d) 3.21 m



10. Two vectors  $\vec{a} = (4m)\hat{i} - (3m)\hat{j}$  and  $\vec{b} = (6m)\hat{i} + (8m)\hat{j}$ , What is **the magnitude** of  $\vec{a}$  ?

- (a) 1 m                      (b) 4 m                      (c) 5 m                      (d) 7 m

11. In **question 10**, find  $\vec{a} + \vec{b}$  ?

- (a)  $10\hat{i} + 5\hat{j}$                       (b)  $2\hat{i} + 11\hat{j}$                       (c)  $10\hat{i} + 11\hat{j}$                       (d)  $9\hat{i} + 12\hat{j}$

12. In **question 10**, Find  $\vec{a} \cdot \vec{b}$  ?

- (a) 1                      (b) 24                      (c) 48                      (d) zero

13. In **question 10**, Find  $\frac{\vec{b}}{2}$  ?

- (a)  $3\hat{i} + 4\hat{j}$                       (b)  $-3\hat{i} - 4\hat{j}$                       (c)  $12\hat{i} + 16\hat{j}$                       (d)  $-12\hat{i} - 16\hat{j}$

14. Given the two vectors  $\vec{a} = 2\hat{i} + 3\hat{j} + 4\hat{k}$  and  $\vec{b} = \hat{i} - 2\hat{j} + 3\hat{k}$ , Find  $\vec{c}$  where  $\vec{c} = \vec{a} + \vec{b}$  ?

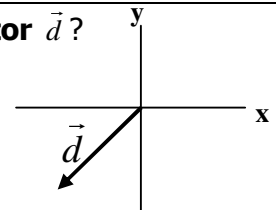
- (a)  $\vec{c} = 3\hat{i} + 5\hat{j} + 7\hat{k}$                       (b)  $\vec{c} = 3\hat{i} + \hat{j} + 7\hat{k}$                       (c)  $\vec{c} = \hat{i} + \hat{j} + 7\hat{k}$                       (d)  $\vec{c} = \hat{i} + 5\hat{j} + \hat{k}$

15. Vector  $\vec{A}$  has a **magnitude of 6 units** and is in the **direction of positive x-axis**, vector  $\vec{B}$  has a **magnitude of 4 units** and making an angle of  $30^\circ$  with the positive x-axis. What is the **magnitude of  $\vec{A} \times \vec{B}$**  ?

- (a) 12 units                      (b) 24 units                      (c) 20.8 units                      (d) 28 units

16. In the figure, what is the **signs of the x and y components of vector  $\vec{d}$** ?

- (a) (+, +)                      (b) (+, -)                      (c) (-, -)                      (d) (-, +)



17. Two vectors :  $\vec{A} = 2\hat{i} + 3\hat{j} + 4\hat{k}$  and  $\vec{B} = \hat{i} - 2\hat{j} + 3\hat{k}$ . Find  $\vec{A} \cdot \vec{B}$  ?

- (a) 5                      (b) 15                      (c) 20                      (d) 8

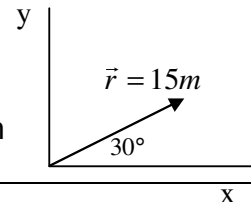
18. Which figure of the following represent the relation  $\vec{s} = \vec{a} + \vec{b}$  :

- (a)                      (b)                      (c)                      (d)



19. from the figure, the **y component** of the vector  $\vec{r}$  equals:

- (a) 13 m                      (b) 7.5 m                      (c) 8.7 m                      (d) 7.8 m



20. Which one of the following is the **scalar quantity**?

- (a) Displacement              (b) Length                      (c) Velocity                      (d) acceleration

21. Vector  $\vec{A}$  has two components,  $A_x = -25 \text{ m}$ ,  $A_y = 40 \text{ m}$ , what is the direction of  $\vec{A}$  ?

- (a)  $32^\circ$                       (b)  $-32^\circ$                       (c)  $58^\circ$                       (d)  $-58^\circ$

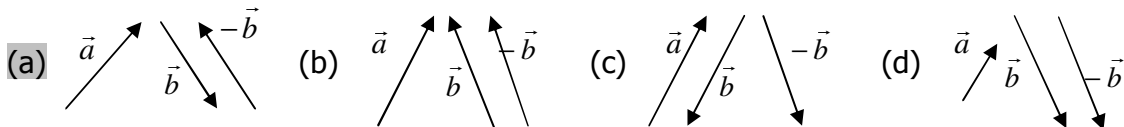
22. If the **x component** of vector  $\vec{r}$  is **2.6 m** and the **y component** is **-2.3 m** then  $\vec{r}$  in **unit-vector notation** is:

- (a)  $2.6 \hat{i} - 2.3 \hat{j}$               (b)  $-2.3 \hat{i} + 2.6 \hat{j}$               (c)  $2.6 \hat{i} - (-2.3)\hat{j}$               (d)  $2.6 \hat{i} - 2.3 \hat{j} + \hat{k}$

23. Vector  $\vec{c}$  has the **magnitude of 36**, what is the magnitude of  $\frac{\vec{c}}{4} - 9$  ?

- (a) zero                      (b) 6                      (c) 9                      (d) 27

24. Which one of the following figures **shows the three vectors  $\vec{a}$ ,  $\vec{b}$  and  $-\vec{b}$**  :



25. Two vectors are given by:  $\vec{a} = 4\hat{i} - 3\hat{j} + \hat{k}$  and  $\vec{b} = 6\hat{i} + 8\hat{j} + 4\hat{k}$

Find  $\vec{c}$  where  $\vec{a} - \vec{b} + \vec{c} = 0$

- (a)  $4\hat{i} - 3\hat{j} + \hat{k}$               (b)  $2\hat{i} + 11\hat{j} + 3\hat{k}$               (c)  $-2\hat{i} - 5\hat{j} + \hat{k}$               (d)  $\hat{i} + 3\hat{j} + 11\hat{k}$

26. If the **angle between  $\vec{A}$  and  $\vec{B}$**  is  **$60^\circ$** , and  **$A = 5$  units,  $B = 6$  units**, then the **magnitude** of the **vector product  $\vec{A} \times \vec{B}$**  is:

- (a) 30                      (b) 20.89                      (c) 15                      (d) 25.98

27. For the following two vectors:  $\vec{A} = 2\hat{i} + 3\hat{j} - 4\hat{k}$ ,  $\vec{B} = -3\hat{i} + 4\hat{j} + 2\hat{k}$ . Find  $\vec{A} \cdot \vec{B}$

- (a) -4                      (b) -2                      (c) -8                      (d) -10


28. In question 27, the **magnitude** of vector  $\vec{A}$  equals:

- (a) 5.4                      (b) 3                      (c) 1.7                      (d) 4.2

29. If  $\vec{a} \times \vec{b} = \vec{c}$  then the **value of  $c_x$**  equals:

- (a)  $a_z b_x - b_z a_x$               (b)  $a_x b_y - b_x a_y$               (c)  $a_y b_z - a_z b_y$               (d)  $a_y b_x - b_y a_x$

30. Which **vector** of the following has the **y-component equals zero**:

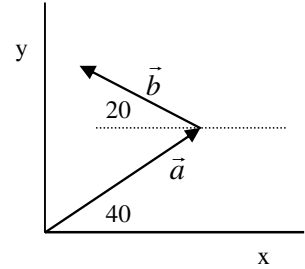


31. Vectors  $\vec{C}$  and  $\vec{D}$  have magnitudes of **3 units** and **4 units** respectively. What is the **angle between the directions of  $\vec{C}$  and  $\vec{D}$  if  $\vec{C} \cdot \vec{D} = 12$  units?**

- (a)  $90^\circ$                       (b)  $180^\circ$                       ©  $270^\circ$                       (d)  $0^\circ$

32. Two vectors  $\vec{a}$  and  $\vec{b}$  shown in the figure, if  $\vec{r} = \vec{a} + \vec{b}$  then :

- (a)  $r_x = a \cos 40 + b \cos 20$   
 (b)  $r_x = a \cos 40 + b \cos 160$   
 (c)  $r_x = a \sin 40 + b \sin 20$   
 (d)  $r_x = a \sin 40 + b \sin 160$

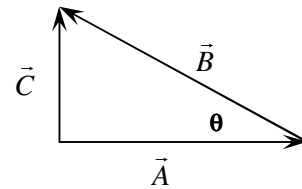


33. If  $\vec{A} = 3\hat{i} - 3\hat{j}$  and  $\vec{B} = \hat{i} - 2\hat{j}$ , then  $\vec{A} - 2\vec{B} =$

- (a)  $\hat{i} + \hat{j}$                       (b)  $2\hat{i} - \hat{j}$                       (c)  $5\hat{i} - 7\hat{j}$                       (d)  $4\hat{i} - 5\hat{j}$

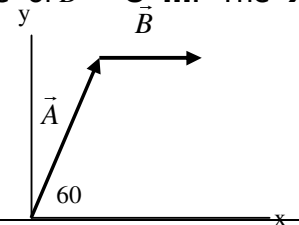
34. The vector  $\vec{B}$  in the diagram is equal to:

- (a)  $\vec{B} = \vec{A} - \vec{C}$   
 (b)  $\vec{B} = \vec{A} + \vec{C}$   
 (c)  $\vec{B} = \vec{C} - \vec{A}$   
 (d)  $\vec{B} = -\vec{A} - \vec{C}$



35. In the diagram, the magnitude of  $\vec{A} = 12$  m and the magnitude of  $\vec{B} = 8$  m. The **x component** of  $\vec{A} + \vec{B} =$

- (a) 14 m                      (b) 10 m                      (c) 6 m                      (d) 18.4 m



36. Vectors  $\vec{A}$  and  $\vec{B}$  each has **magnitude 4** and the angle between them is  **$30^\circ$** . The value of  $\vec{A} \cdot \vec{B} =$

- (a) 3.46                      (b) 13.86                      (c) 16                      (d) 8

37. Let  $\vec{C} = \vec{A} \times \vec{B}$  and  $\phi$  is the angle between  $\vec{A}$  and  $\vec{B}$ , which of the following is **true**?

- (a) The magnitude of  $\vec{C} = AB \cos \phi$                       (c)  $-\vec{C} = \vec{B} \times \vec{A}$   
 (b)  $\vec{A} \times \vec{B} = \vec{B} \times \vec{A}$                       (d) The angle between  $\vec{C}$  and  $\vec{A} = 0^\circ$

38. Vectors  $\vec{a}$  and  $\vec{b}$  have magnitudes **5 units** and **2 units**, respectively. If  $\vec{a} \times \vec{b} = 5$  units, then the **angle  $\phi$**  between  $\vec{a}$  and  $\vec{b}$  equals:

- (a)  $0^\circ$                       (b)  $30^\circ$                       (c)  $60^\circ$                       (d)  $90^\circ$

39. If vector  $\vec{A} = 6\hat{i} - 8\hat{j}$  then  $4\vec{A}$  has a **magnitude** :

- (a) 10                      (b) 20                      (c) 30                      (d) 40

40. A vector  $\vec{a}$  has a **magnitude of 25 m** and an  **$a_x = 12$  m**. The **angle** it makes with the positive x axis is:

- (a)  $26^\circ$                       (b)  $29^\circ$                       (c)  $61^\circ$                       (d)  $64^\circ$

41. Let  $\vec{A} = 2\hat{i} + 6\hat{j} - 3\hat{k}$  and  $\vec{B} = 4\hat{i} + 2\hat{j} + \hat{k}$ . The **vector sum**  $\vec{S} = \vec{A} + \vec{B}$  is:

- (a)  $6\hat{i} + 8\hat{j} - 2\hat{k}$                       (b)  $-2\hat{i} + 4\hat{j} - 4\hat{k}$                       (c)  $2\hat{i} - 4\hat{j} + 4\hat{k}$                       (d)  $8\hat{i} + 12\hat{j} - 3\hat{k}$

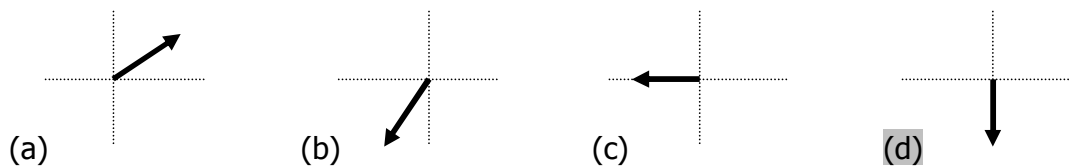
42. Let  $\vec{A} = 2\hat{i} + 6\hat{j} - 3\hat{k}$  and  $\vec{B} = 4\hat{i} + 2\hat{j} + \hat{k}$ . Then  $\vec{A} \cdot \vec{B} =$

- (a)  $8\hat{i} + 12\hat{j} - 3\hat{k}$                       (b)  $12\hat{i} - 14\hat{j} - 20\hat{k}$                       (c) 23                      (d) 17

43. Vectors  $\vec{A}$  and  $\vec{B}$  each have **magnitude L**. When the angle between them is  **$60^\circ$** . The **magnitude** of  $\vec{A} \times \vec{B}$  is:

- (a)  $0.5 L^2$                       (b)  $L^2$                       (c)  $0.866 L^2$                       (d)  $2 L^2$

44. Which **vector** of the following has the **x-component equals zero**:



45. The **angle between**  $\vec{A} = -25\hat{i} + 45\hat{j}$  and the x axis is

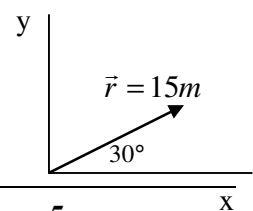
- (a)  $-29^\circ$                       (b)  $29^\circ$                       (c)  $-60.9^\circ$                       (d)  $60.9^\circ$

46. Let  $\vec{V} = 2\hat{i} + 6\hat{j} - 3\hat{k}$ . The **magnitude of**  $\vec{V}$  is

- (a) 5                      (b) 5.57                      (c) 7                      (d) 7.42

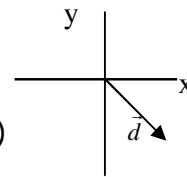
47. from the figure, the **y component** of the vector  $\vec{r}$  equals:

- (a) 13 m                      (b) 7.5 m                      (c) 8.7 m                      (d) 7.8 m



48. In the figure, what is **the signs of the x and y components**

Of the vector  $\vec{d}$  :



- (a) ( + , + )      (b) ( - , - )      (c) ( + , - )      (d) ( - , + )

49. Two vectors are given by:  $\vec{a} = 4\hat{i} - 3\hat{j} + \hat{k}$  and  $\vec{b} = 6\hat{i} + 8\hat{j} + 4\hat{k}$

Find  $\vec{c}$  where  $\vec{a} - \vec{b} + \vec{c} = 0$

- (a)  $4\hat{i} - 3\hat{j} + \hat{k}$       (b)  $2\hat{i} + 11\hat{j} + 3\hat{k}$       (c)  $-2\hat{i} - 5\hat{j} + \hat{k}$       (d)  $\hat{i} + 3\hat{j} + 11\hat{k}$

50. For the following two vectors:  $\vec{A} = 2\hat{i} + 3\hat{j} - 4\hat{k}$  ,  $\vec{B} = -3\hat{i} + 4\hat{j} + 2\hat{k}$

Find  $\vec{A} \cdot \vec{B}$

- (a) - 4      (b) - 2      (c) - 8      (d) - 10

51. Vector  $\vec{a}$  has three components,  $\mathbf{a_x = 10 m}$ ,  $\mathbf{a_y = 10 m}$ , and  $\mathbf{a_z = 5 m}$ . Its magnitude is:

- (a) 225 m      (b) 25 m      (c) 20 m      (d) 15 m

52. If  $\vec{A} = 2\hat{i} + 6\hat{j} - 3\hat{k}$  and  $\vec{B} = 4\hat{i} + 2\hat{j} + \hat{k}$ . Then  $\vec{A} - \vec{B} =$

- (a)  $6\hat{i} + 8\hat{j} - 2\hat{k}$       (b)  $-2\hat{i} + 4\hat{j} - 4\hat{k}$       (c)  $2\hat{i} - 4\hat{j} + 4\hat{k}$       (d)  $8\hat{i} + 12\hat{j} - 3\hat{k}$

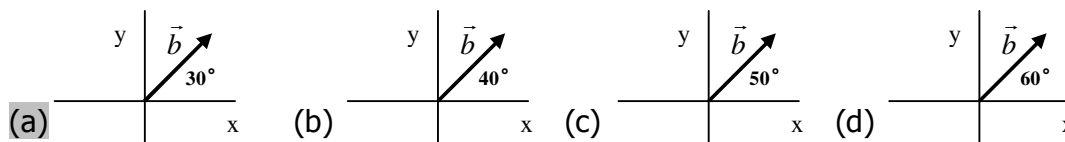
53. Vectors  $\vec{C}$  and  $\vec{D}$  have magnitudes of **3 units** and **4 units** respectively. What is the **angle between the directions of  $\vec{C}$  and  $\vec{D}$  if  $\vec{C} \cdot \vec{D} = 12$  units?**

- (a)  $90^\circ$       (b)  $180^\circ$       (c)  $270^\circ$       (d)  $0^\circ$

54. The vector  $-\vec{b}$  has the same **magnitude** as the vector  $\vec{b}$  but

- (a) perpendicular to  $\vec{b}$       (c) the opposite direction of  $\vec{b}$   
(b) parallel to  $\vec{b}$       (d) the same direction of  $\vec{b}$

55. In which figure of the following  $\mathbf{b_x = 8.7 m}$  ? (  $\mathbf{b = 10 m}$  )



56. The components of  $\vec{a}$  are:  $\mathbf{a_x = 3 m}$ , and  $\mathbf{a_y = 4 m}$  , the **direction** of  $\vec{a}$  is:

- (a)  $66.8^\circ$       (b)  $63.4^\circ$       (c)  $59^\circ$       (d)  $53.13^\circ$

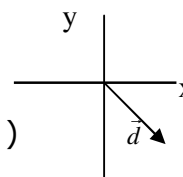
57. In question 59, the magnitude of  $\vec{a}$  is:

- (a) 6.71 m      (b) 5.83 m      (c) 7.62 m      (d) 5 m

58. In the figure, the signs of the x and y components

Of the vector  $\vec{d}$  are:

- (a) (+, +)      (b) (-, -)      (c) (+, -)      (d) (-, +)



59. The vector product  $\hat{j} \times \hat{k}$  is equal to:

- (a) 0      (b) 1      (c)  $\hat{i}$       (d)  $-\hat{i}$

60. If  $\vec{a} = 4\hat{i} - 3\hat{j}$  and  $\vec{b} = 6\hat{i} + 8\hat{j}$ , then  $\vec{b} - \vec{a} =$

- (a)  $4\hat{i} - 3\hat{j}$       (b)  $2\hat{i} + 11\hat{j}$       (c)  $-2\hat{i} - 5\hat{j}$       (d)  $\hat{i} + 3\hat{j}$

61. If  $A = 4$  units,  $B = 6$  units, and the angle  $\phi = 60^\circ$ , then the magnitude of the vector product  $\vec{A} \times \vec{B}$  is:

- (a) 31.2 units      (b) 20.78 units      (c) 15.6 units      (d) 25.98 units

62. For the following two vectors:  $\vec{A} = 2\hat{i} + 3\hat{j} - 4\hat{k}$ ,  $\vec{B} = -3\hat{i} + 2\hat{j} + 2\hat{k}$ . Find  $\vec{A} \cdot \vec{B}$

- (a) -5      (b) -2      (c) -8      (d) -11

63. If  $C = 3$  units,  $D = 4$  units and  $\vec{C} \cdot \vec{D} = -12$  units then the angle between the directions of  $\vec{C}$  and  $\vec{D}$  is:

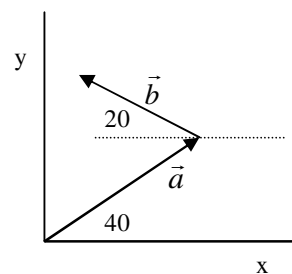
- (a)  $90^\circ$       (b)  $180^\circ$       (c)  $270^\circ$       (d)  $0^\circ$

64. If  $\vec{D} = 5\hat{i} + 25\hat{j}$ , then  $\frac{\vec{D}}{5}$  equals:

- (a)  $5\hat{i} + \hat{j}$       (b)  $\hat{i} + 5\hat{j}$       (c)  $5\hat{i} - \hat{j}$       (d)  $\hat{i} - 5\hat{j}$

65. Two vectors  $\vec{a}$  and  $\vec{b}$  shown in the figure, if  $\vec{r} = \vec{a} + \vec{b}$  then :

- (a)  $r_x = a \cos 40 + b \cos 20$   
(b)  $r_x = a \cos 40 + b \cos 160$   
(c)  $r_x = a \sin 40 + b \sin 20$   
(d)  $r_x = a \sin 40 + b \sin 160$



Are the following statements (True ✓) or (False ✗) ?

66. The component of a vector is the projection of the vector (مسقط المتجه) on an axis.

- (a) True      (b) False

---

**67.** The magnitude of  $\vec{A} \cdot \vec{B}$  is maximum when the angle between  $\vec{A}$  and  $\vec{B}$  is  $90^\circ$ .

(a) True      (b) False

---

**68.** The value of  $\hat{i} \cdot (\hat{j} \times \hat{k})$  is zero.

(a) True      (b) False

---

**69.**  $a_x$  and  $a_y$  are vector components of  $\vec{a}$ .

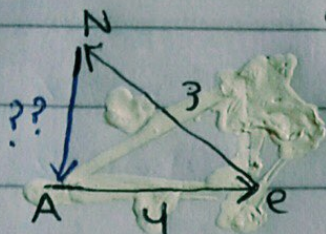
(a) True      (b) False

---

**70.** The magnitude of the unit vector equals 1.

(a) True      (b) False

42-

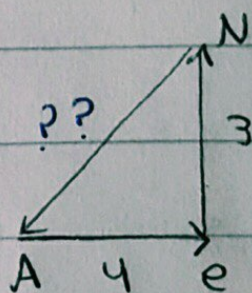


$$3^2 = 4^2 + x^2$$

$$\sqrt{x^2} = \sqrt{25}$$

$$\boxed{x = 5}$$

\* نظرية فيثاغورس \*



$$x^2 = 3^2 + 4^2$$

$$\sqrt{x^2} = \sqrt{25}$$

$$\boxed{x = 5}$$

تعدیل سوال ۴۲ و ۴۶؛ شایتر ۲ ✨ ✨:

46-  $\Delta x = 12 - 5 = +8$

[موجبة]

$$\Delta x = 12 - 5 = 7$$



1-  $|a| = \sqrt{a_x^2 + a_y^2}$   
 $= \sqrt{9 + 16} = \sqrt{25} = 5$

2-  $\theta = \tan^{-1} \frac{a_y}{a_x} = \tan^{-1} \frac{-4}{3} = -53.1^\circ$

ملاحظة 1، إشارة  $a_x$  و  $a_y$  تكتب زي ما هي في القانون.

3-  $\vec{a} = 2i + 3j + 4k$

+  $\vec{b} = i - 2j + 3k$   


---

 $3i + j + 7k$

\* في الجمع نجمع نكتب آ، ز، ك زي ما هي ما نشيلها.

4-  $2i + 3j + 4k$

x  $i - 2j + 3k$   


---

 $2 - 6 + 12 = 8$

\* في الضرب نا ( $a \cdot b$ ) لازم نطلع الناتج scalar بيكون الحروف

5-  $C \sin \theta = CD \sin \theta$

$\theta = \sin^{-1} \frac{CD}{C} = \sin^{-1} \frac{12}{(3)(4)} = 90^\circ$

6-  $\theta = \tan^{-1} \frac{a_y}{a_x} = \tan^{-1} \frac{-2.3}{2.6} = -41.49$

7- بما إنو المتجهات في الربع الأول يعني محور x و y موجبين فـ سيكون المركبات في المتجهات ذي موجبة (+, +)

8- 
$$\begin{vmatrix} i & j & k \\ a_x & a_y & a_z \\ b_x & b_y & b_z \end{vmatrix} = (a_y b_z - b_y a_z)i + (a_z b_x - b_z a_x)j + (a_x b_y - b_x a_y)k$$

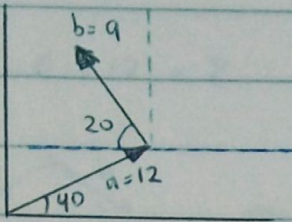
إنا عارفين إنو الـ x مع i و y مع j و z مع k فـ نختار اللي مع z لأنو طلب زي

\* طريقة ثانية ممكن تغير: الشئ اللي بيغاه  $a_y$  و  $a_z$  و  $a_x$  نروح نختار الاختيار اللي

ما فيه الحروف اللي بيغاه، يعني لو لا نختار اللي ما فيه حروف x، لو ي نختار اللي ما فيه y و هكذا (ث)



9-



$$r = a + b$$

$$r_x = a_x + b_x$$

$$= 9.19 - 8.457$$

$$= 0.732$$

\* هنا يبني المركبة x لحاصل جمع المتجهين ذوا،

نأخذنا لازم نجيب المركبة x لكل واحد فيهم عنشان نطلع الي بيغاد.

$a_x$  عادي زقد، نطلعها زي كأنها لحالها في الربع الأول.

$$a_x = a \cos \theta = 12 \cos 40 = 9.19$$

$b_x$  دفين كأنها جاية في محور جديدة وربع جديد فالوصلاح

في الأول، زي كأنو، رسمه جوات، رسمه مضمرة \* ان شاء الله وديلت \*

لونا نجيب  $b_x$  وهيا في المتاور الجديدة زي جاية في الربع الثاني

يعني تتكون سالبة.

$$b_x = -b \cos \theta = -9 \cos 20 = -8.457$$

إذا جينا المركبات كلها فلاص نجمع

10-  $|a| = \sqrt{a_x^2 + a_y^2} = \sqrt{(4)^2 + (3)^2} = 5$

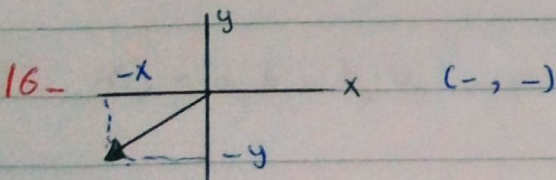
11-  $4i - 3j$   
 $+ \frac{6i + 8j}{10i + 5j}$

12-  $24 - 24 = 0$

13-  $\frac{6i}{2} + \frac{8j}{2} = 3i + 4j$

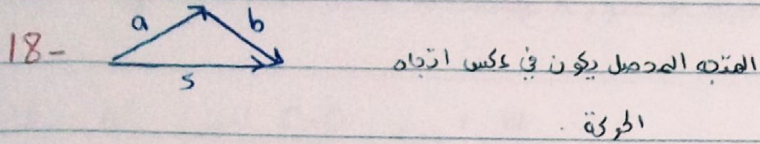
14- نفس السؤال 3.

15-  $A \times B = AB \sin \theta$   
 $= (6)(4) \sin 30 = 12$





17-  $2 - 6 + 12 = 8$



19-  $a_y = a \sin \theta = 15 \sin 30 = 7.5$

20- scalar  $\rightarrow$  Length.

21-  $\theta = \tan^{-1} \frac{a_y}{a_x} = \tan^{-1} \frac{40}{-25} = -57.99$

22-  $x \text{ ع } i, y \text{ ع } j \Rightarrow 2.6i - 2.3j$

23-  $\frac{36}{4} - 9 = 9 - 9 = 0$

24- (a)  $\rightarrow$  المتجه وعكسه لا يتم تكوين نفس المقدار، بل  
عكس الاتجاه.

25-  $a - b = -2i - 11j - 3k$   
 $-2i - 11j - 3k + c = 0$   
 $c = 2i + 11j + 3k$

26-  $|A \times B| = AB \sin \theta = (5)(6) \sin 60 = 25.98$

27-  $A \cdot B = -6 + 12 - 8 = -2$

28-  $|A| = \sqrt{(2)^2 + (3)^2 + (4)^2} = 5.38$

29-  $c_x = a_y b_z - b_y a_z \rightarrow$  نختار التي ما فيها x



30- y-component = 0 → لا يكون المتجه على محور x

$$31- \theta = \cos^{-1} \frac{C \cdot D}{CD} = \cos^{-1} \frac{12}{(3)(4)} = 0$$

32- نفس هرجة سؤال 9 بس هنا بدل ما يقول إنه الزاوية تقو 20 في الوبع الثاني، أفق (180 - الزاوية) علشان يطلع الزاوية من الوبع الأول وتكون cos هوجبة.

$$a \cos 40 - b \cos 20$$

$$a \cos 40 + b \cos 160$$

هي نفسها

$$33- B = i - 2j \Rightarrow 2B = 2i - 4j$$

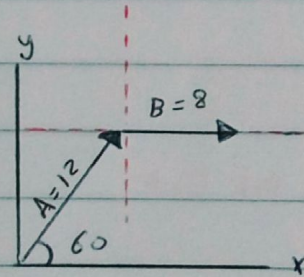
$$A - 2B = (3i - 3j) - (2i - 4j) = i + j$$

34-  $C = A + B$  ← إحنا عارفين إنه المتجه الماصل يكون في اتجاه الحركة يعني هنا C  
 $B = C - A$  ← نبدأ نجيب B في نوذي A للطرف الثاني بإشارة سالبة.

$$35- D = a + b$$

$$D_x = a_x + b_x$$

$$= 12 \cos 60 + 8 \cos 0$$



\* نفس هرجة سؤال 9 (ت) \*

$$36- A \cdot B = AB \cos 30$$

$$= (4)(4) \cos 30 = 13.85$$

37-  $\vec{C} = \vec{A} \times \vec{B}$  \* ملاحظة هامة جداً :

- في الضرب ذا (a · b) عادي نقدر نقول إنه  $\vec{a} \cdot \vec{b} = \vec{b} \cdot \vec{a}$

- أما في الضرب ذا (a × b) ما نقدر نقول إنهم يساووا بعض إلا لو دطينا إشارة سالبة يعني عكس الإشارة.



38-  $a \times b = ab \sin \theta$

$$\theta = \sin^{-1} \frac{a \times b}{ab} = \sin^{-1} \frac{5}{(5)(2)} = 30^\circ$$

39-  $A = 6i - 8j \Rightarrow 4A = 24i - 32j$

$$|4A| = \sqrt{(24)^2 + (-32)^2} = 40$$

40-  $a_x = a \cos \theta$

$$\theta = \cos^{-1} \frac{a_x}{a} = \cos^{-1} \frac{12}{25} = 61.3$$

41-  $A = 2i + 6j - 3k$

+  $B = 4i + 2j + k$

$6i + 8j - 2k$

42-  $A \cdot B = 8 + 12 - 3 = 17$

\* في الضرب زا (a.b) ما نوظ الحود في على طول زجه الناتج بين

43-  $A \times B = AB \sin \theta$

$$= (L)(L) \sin 60 = 0.866 L^2$$

44- x-component = 0  $\rightarrow$  لا يكون المتجه على محور y

\* عكس سؤال 30 ☺

45-  $\theta = \tan^{-1} \frac{a_y}{a_x} = \tan^{-1} \frac{45}{-25} = -60.9$

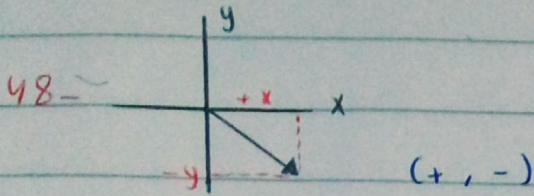
46-  $|v| = \sqrt{4 + 36 + 9} = 7$

47-  $r_y = r \sin \theta$

$$= 15 \sin 30$$

$$= 7.5$$





49-  $a - b = (4i - 3j + k) - (6i + 8j + 4k) = -2i - 11j - 3k$

$-2i - 11j - 3k + c = 0$

$c = 2i + 11j + 3k$

50-  $A \cdot B = -6 + 12 - 8 = -2$

51-  $|a| = \sqrt{(10)^2 + (10)^2 + (5)^2} = 15$

52-  $A - B = (2i + 6j - 3k) - (4i + 2j + k)$   
 $= -2i + 4j - 4k$

53-  $C \cdot D = CD \cos \theta$

$\theta = \cos^{-1} \frac{C \cdot D}{CD} = \cos^{-1} \frac{12}{(3)(4)} = 0$

54- المتجه  $-b$  له نفس مقدار المتجه  $b$  لكن بعكس الاتجاه.

55-  $b_x = b \cos \theta$

$\theta = \cos^{-1} \frac{b_x}{b} = \cos^{-1} \frac{8.7}{10} = 29.5 \approx 30$

\* نطلع الزاوية عشوائياً فقط، الرسمه الصحيح \*

56-  $\theta = \tan^{-1} \frac{a_y}{a_x} = \tan^{-1} \frac{4}{3} = 53.13$

57-  $|a| = \sqrt{9+16} = 5$

58- نفس سؤال 48.

59- عكس عقارب الساعة هو جيب الارتفاعات  
 $j \times k = +i$



60 -  $b - a = (6i + 8j) - (4i - 3j) = 2i + 11j$


61 -  $|A \times B| = AB \sin \theta$   
 $= (4)(6) \sin 60 = 20.78$

62 -  $A \cdot B = -6 + 6 - 8 = -8$

63 -  $C \cdot D = CD \cos \theta$   
 $\theta = \cos^{-1} \frac{C \cdot D}{CD} = \cos^{-1} \frac{-12}{(3)(4)} = 180$

64 -  $\frac{D}{5} = \frac{5i}{5} + \frac{25j}{5} = i + 5j$

65 - نفس سؤال 32



66 - مركبة المتجه هي مسقط المتجه على المحور [ صبح ]

67 -  $A \cdot B$  يتكون ما كسيموم على الزاوية  $\theta$  [ حفظ ذا الشيء ]

68 - 1) نفتح الي جوا القوس:  $i \times j = k$  عكس عقارب الساعة  
 موجب الدور الناقص

يعني  $i \times k = -j$

2) نضرب  $(i) \cdot i = 1$  تساوي واحد

69 - المركبات  $a_x$  و  $a_y$  هي vector [ نطقاً ] هي scalar

70 - قيمة متجه الوحدة تساوي واحد (نطقاً)

## Chapter 3 Vectors

### 3-2 Vectors and scalars

1- Vector quantities → magnitude and direction. Example: displacement, velocity

2- Scalar quantities → only magnitude (no direction) Example: temperature, pressure

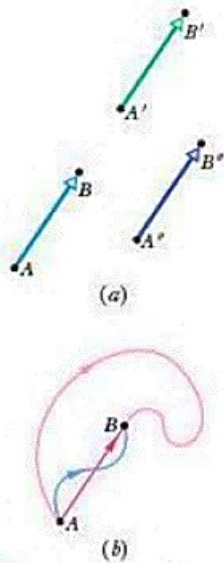
The simplest vector quantity is displacement vector

which we represent by an arrow → from A to B



The length of the arrow = magnitude of the vector quantity

The head of the arrow shows the direction for the vector quantity



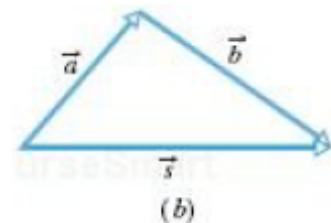
**FIG. 3-1** (a) All three arrows have the same magnitude and direction and thus represent the same displacement. (b) All three paths connecting the two points correspond to the same displacement vector.

### 3-3 Adding Vectors Geometrically

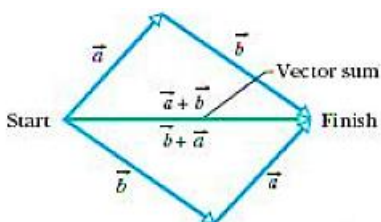
\*If a particle moves from **a** to **b** we will get two displacement vectors.

The net displacement from **a** to **b** is called the **vector sum (s)**

Vector equation  $\vec{s} = \vec{a} + \vec{b}$ ,



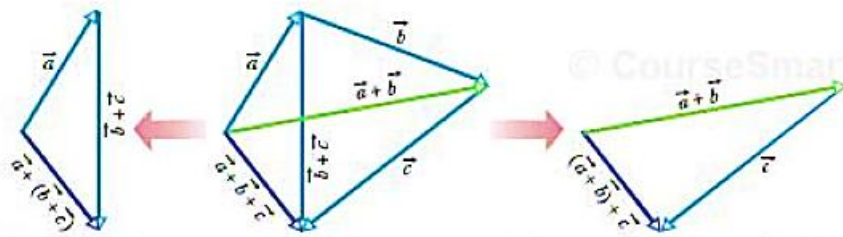
**\*Commutative Law**



$$\vec{a} + \vec{b} = \vec{b} + \vec{a} \quad (\text{commutative law}).$$

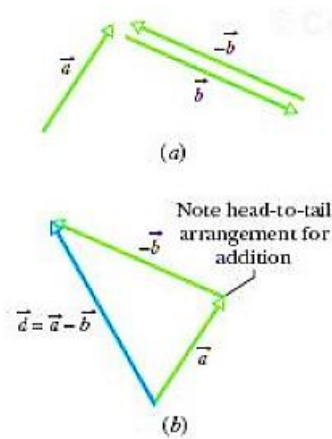


**\*Associative Law**



$$(\vec{a} + \vec{b}) + \vec{c} = \vec{a} + (\vec{b} + \vec{c}) \quad (\text{associative law}).$$

**\*Vector Subtraction**



$$\vec{d} = \vec{a} - \vec{b} = \vec{a} + (-\vec{b}) \quad (\text{vector subtraction});$$

**✓ CHECKPOINT 1** The magnitudes of displacements  $\vec{a}$  and  $\vec{b}$  are 3 m and 4 m, respectively, and  $\vec{c} = \vec{a} + \vec{b}$ . Considering various orientations of  $\vec{a}$  and  $\vec{b}$ , what is (a) the maximum possible magnitude for  $\vec{c}$  and (b) the minimum possible magnitude?

**Answer:**

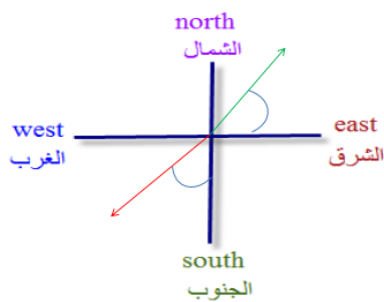
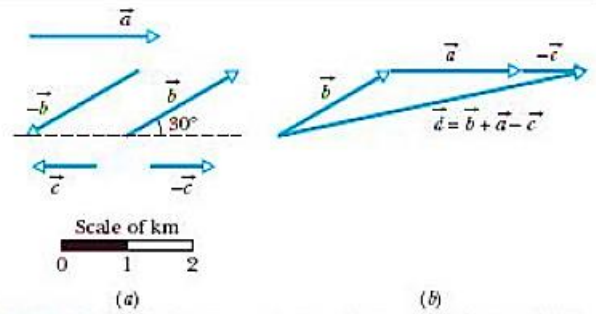
**(a) 7 m (a and b are in same direction)**

**(b) 1 m (a and b are in opposite direction)**



### Sample Problem 3-1

In an orienteering class, you have the goal of moving as far (straight-line distance) from base camp as possible by making three straight-line moves. You may use the following displacements in any order: (a)  $\vec{a}$ , 2.0 km due east (directly toward the east); (b)  $\vec{b}$ , 2.0 km  $30^\circ$  north of east (at an angle of  $30^\circ$  toward the north from due east); (c)  $\vec{c}$ , 1.0 km due west. Alternatively, you may substitute either  $-\vec{b}$  for  $\vec{b}$  or  $-\vec{c}$  for  $\vec{c}$ . What is the greatest distance you can be from base camp at the end of the third displacement?



North of east = toward the north from due east

West of south = toward the west from due south

### 3-4 Components of Vectors

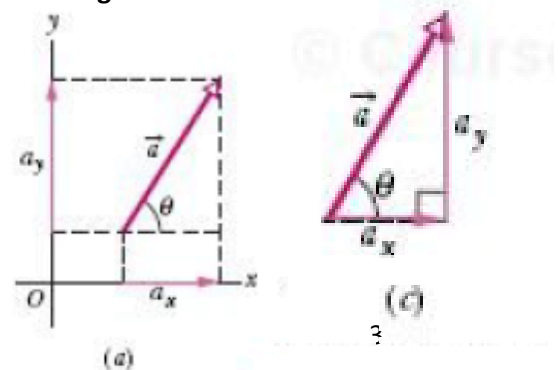
A component of a vector is the projection of a vector on an axis

The process of finding the components of a vector is called resolving the vector

We can find the components of  $\vec{a}$  from the right triangle there:

$$a_x = a \cos \theta \quad \text{and} \quad a_y = a \sin \theta,$$

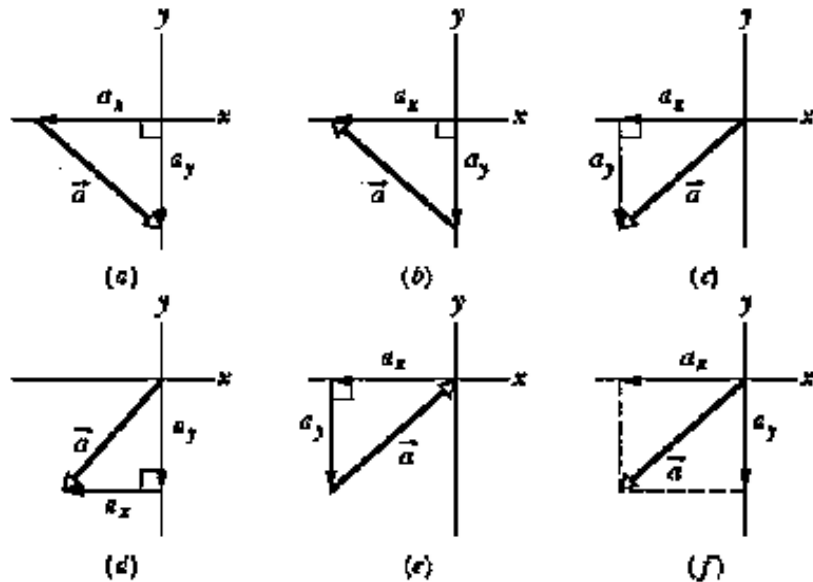
where  $\theta$  is the angle that the vector  $\vec{a}$  makes with the positive direction of the  $x$  axis, and  $a$  is the magnitude of  $\vec{a}$ .



To find the magnitude, we use:  $a = \sqrt{a_x^2 + a_y^2}$

To find direction, we use:  $\tan \theta = \frac{a_y}{a_x}$

**CHECKPOINT 2**  
 In the figure, which of the indicated methods for combining the  $x$  and  $y$  components of vector  $\vec{a}$  are proper to determine that vector?



**Answer:** c, d, f (components must be head-to-tail; a must extend from tail of one component to head of the other)

**Sample Problem 3-2**

A small airplane leaves an airport on an overcast day and is later sighted 215 km away, in a direction making an angle of  $22^\circ$  east of due north. How far east and north is the airplane from the airport when sighted?

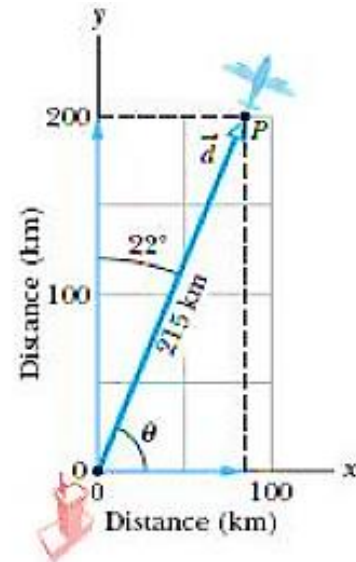
**Answer:**

To find the components of  $\vec{d}$ ,  
 $\theta = 68^\circ (= 90^\circ - 22^\circ)$ :

$$d_x = d \cos \theta = (215 \text{ km})(\cos 68^\circ) = 81 \text{ km} \quad (\text{Answer})$$

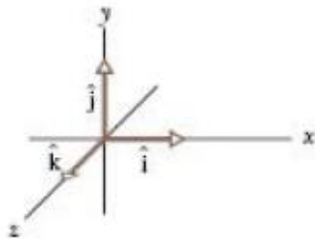
$$d_y = d \sin \theta = (215 \text{ km})(\sin 68^\circ) = 199 \text{ km} \approx 2.0 \times 10^2 \text{ km}. \quad (\text{Answer})$$

Thus, the airplane is 81 km east and  $2.0 \times 10^2$  km north of the airport.



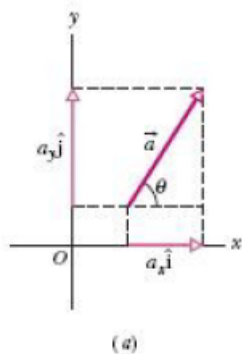
### 3-5 Unit Vectors

- \* A **unit vector** is a vector that has a magnitude of exactly 1 and points in a particular direction.
- \* The unit vectors in the positive directions of the  $x$ ,  $y$ , and  $z$  axes are labeled  $\hat{i}$ ,  $\hat{j}$ , and  $\hat{k}$ ,
- \* where the hat  $\hat{\phantom{x}}$  is used instead of an overhead arrow as for other vectors (Fig. 3-14)



**FIG. 3-14** Unit vectors  $\hat{i}$ ,  $\hat{j}$ , and  $\hat{k}$  define the directions of a right-handed coordinate system.

express  $\vec{a}$  and  $\vec{b}$  for example, we can



The quantities  $a_x\hat{i}$  and  $a_y\hat{j}$  are vectors, called the **vector components** of  $\vec{a}$ .

The quantities  $a_x$  and  $a_y$  are scalars, called the **scalar components** of  $\vec{a}$

$$\vec{a} = a_x\hat{i} + a_y\hat{j}$$

#### Example

$$\vec{d} = -(2.6 \text{ km})\hat{i} + (0.025 \text{ km})\hat{j} + (3.9 \text{ km})\hat{k} \longrightarrow \text{vector components of } \vec{d}$$

$\swarrow$        $\downarrow$        $\swarrow$   
 Scalar components of  $\vec{d}$

### 3-6 Adding vectors by components

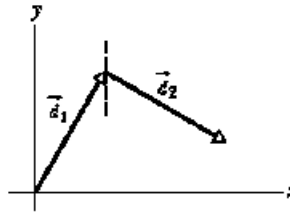
$$\vec{a} = a_x \hat{i} + a_y \hat{j} + a_z \hat{k}$$

$$\vec{b} = b_x \hat{i} + b_y \hat{j} + b_z \hat{k}$$

$$\vec{a} + \vec{b} = (a_x + b_x) \hat{i} + (a_y + b_y) \hat{j} + (a_z + b_z) \hat{k}$$

**\*\*Find a - b**

✓ **CHECKPOINT 3** (a) In the figure here, what are the signs of the x components of  $\vec{d}_1$  and  $\vec{d}_2$ ? (b) What are the signs of the y components of  $\vec{d}_1$  and  $\vec{d}_2$ ? (c) What are the signs of the x and y components of  $\vec{d}_1 + \vec{d}_2$ ?



### Answers

(a) +, +

(b) +, -

(c) +, + Draw vector from tail of  $d_1$  to head of  $d_2$

### Sample Problem 3-4

Figure 3-16a shows the following three vectors:

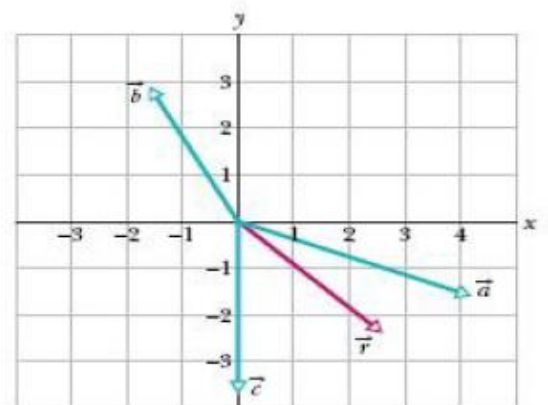
$$\vec{a} = (4.2 \text{ m})\hat{i} - (1.5 \text{ m})\hat{j},$$

$$\vec{b} = (-1.6 \text{ m})\hat{i} + (2.9 \text{ m})\hat{j},$$

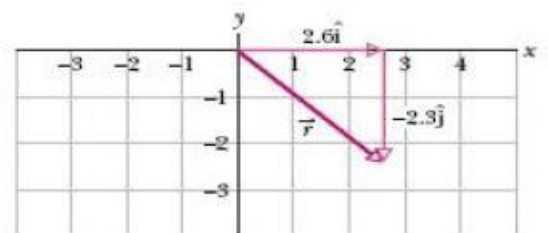
and

$$\vec{c} = (-3.7 \text{ m})\hat{j}.$$

What is their vector sum  $\vec{r}$  which is also shown



(a)



(b)

**FIG. 3-16** Vector  $\vec{r}$  is the vector sum of the other three vectors.

### 3-8 Multiplying Vectors

There are three ways in which vectors can be multiplied

1) Multiplying vector by scalar: If we multiply a vector  $\mathbf{a}$  by scalar  $s$  we get a new vector

If  $s$  is positive,  $\mathbf{a}$  will become positive, EX:

If  $s$  is negative,  $\mathbf{a}$  will become negative, EX:

2) Multiplying vector by vector; we get:

The vector product

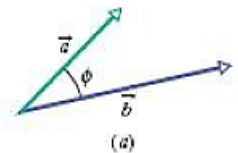
The scalar product

#### a) The Scalar product (or dot product)

The **scalar product** of the vectors  $\vec{a}$  and  $\vec{b}$  in Fig. 3-20a is written as  $\vec{a} \cdot \vec{b}$  and defined to be

$$\vec{a} \cdot \vec{b} = ab \cos \phi,$$

where  $a$  is the magnitude of  $\vec{a}$ ,  $b$  is the magnitude of  $\vec{b}$ , and  $\phi$  is the angle between  $\vec{a}$  and  $\vec{b}$ .



If the angle  $\phi$  between two vectors is  $0^\circ$ , the component of one vector along the other is maximum, and so also is the dot product of the vectors. If, instead,  $\phi$  is  $90^\circ$ , the component of one vector along the other is zero, and so is the dot product.

If  $\theta = 0 \Rightarrow \vec{a} \cdot \vec{b} = ab$   $\Rightarrow$  vectors are parallel

$\theta = 180 \Rightarrow \vec{a} \cdot \vec{b} = -ab$   $\Rightarrow$  vectors are anti parallel

$\theta = 90 \Rightarrow \vec{a} \cdot \vec{b} = 0$   $\Rightarrow$  vectors are perpendicular

\* The scalar product is commutative  $\vec{a} \cdot \vec{b} = \vec{b} \cdot \vec{a}$ .

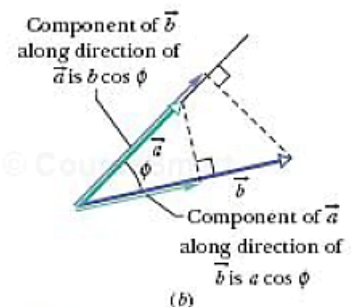
\* When two vectors are in unit vector notation,

$$\vec{a} = a_x \hat{i} + a_y \hat{j} + a_z \hat{k}$$

$$\vec{b} = b_x \hat{i} + b_y \hat{j} + b_z \hat{k}$$

we write the dot product as follows:

$$\vec{a} \cdot \vec{b} = a_x b_x + a_y b_y + a_z b_z$$



**\*Multiplying Unit Vectors**

$$\hat{i} \cdot \hat{i} = \hat{j} \cdot \hat{j} = \hat{k} \cdot \hat{k} = 1$$

$$\hat{i} \cdot \hat{j} = \hat{j} \cdot \hat{k} = \hat{k} \cdot \hat{i} = 0$$

**CHECKPOINT 4** Vectors  $\vec{C}$  and  $\vec{D}$  have magnitudes of 3 units and 4 units, respectively. What is the angle between the directions of  $\vec{C}$  and  $\vec{D}$  if  $\vec{C} \cdot \vec{D}$  equals (a) zero, (b) 12 units, and (c) -12 units?

**Answer:**

**Sample Problem 3-7**

What is the angle  $\phi$  between  $\vec{a} = 3.0\hat{i} - 4.0\hat{j}$  and  $\vec{b} = -2.0\hat{i} + 3.0\hat{k}$ ?

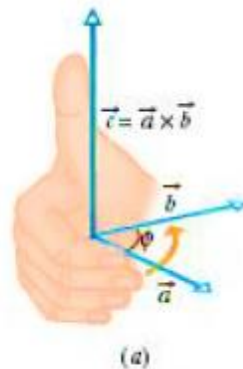
**b) The Vector Product (or cross product)**

The **vector product** of  $\vec{a}$  and  $\vec{b}$ , written  $\vec{a} \times \vec{b}$ , produces a third vector  $\vec{c}$  whose magnitude is

$$c = ab \sin \phi,$$

where  $\phi$  is the *smaller* of the two angles between  $\vec{a}$  and  $\vec{b}$ .

The direction of  $\vec{c}$  is perpendicular to both  $\vec{a}$  and  $\vec{b}$



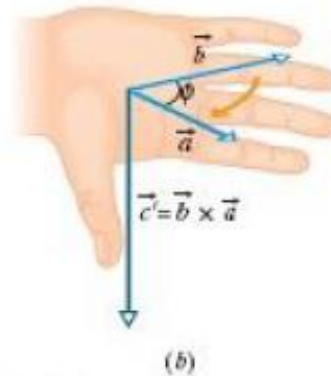
**Right hand rule**

If  $\vec{a}$  and  $\vec{b}$  are parallel or antiparallel,  $\vec{a} \times \vec{b} = 0$ . The magnitude of  $\vec{a} \times \vec{b}$ , which can be written as  $|\vec{a} \times \vec{b}|$ , is maximum when  $\vec{a}$  and  $\vec{b}$  are perpendicular to each other.

If $\theta = 0 \Rightarrow \vec{a} \times \vec{b} = 0$	→	vectors are parallel	→
$\theta = 180 \Rightarrow \vec{a} \times \vec{b} = 0$	→	vectors are anti parallel	←
$\theta = 90 \Rightarrow  \vec{a} \times \vec{b}  = ab$	→	vectors are perpendicular	↑

\*The order of the vector in this case is important

$$\vec{b} \times \vec{a} = -(\vec{a} \times \vec{b})$$



### Multiplying Unit Vectors

$$\hat{i} \times \hat{j} = \hat{k}, \quad \hat{j} \times \hat{k} = \hat{i}, \quad \hat{k} \times \hat{i} = \hat{j}$$

$$\hat{j} \times \hat{i} = -\hat{k}, \quad \hat{k} \times \hat{j} = -\hat{i}, \quad \hat{i} \times \hat{k} = -\hat{j}$$

$$\hat{i} \times \hat{i} = \hat{j} \times \hat{j} = \hat{k} \times \hat{k} = 0$$

\*If the two vectors are given in unit vector notation, we multiply by matrix

$$\vec{a} = a_x \hat{i} + a_y \hat{j} + a_z \hat{k}$$

$$\vec{b} = b_x \hat{i} + b_y \hat{j} + b_z \hat{k}$$

$$\vec{a} \times \vec{b} = \begin{vmatrix} \hat{i} & \hat{j} & \hat{k} \\ a_x & a_y & a_z \\ b_x & b_y & b_z \end{vmatrix}$$

$$= \hat{i} \begin{vmatrix} a_y & a_z \\ b_y & b_z \end{vmatrix} - \hat{j} \begin{vmatrix} a_x & a_z \\ b_x & b_z \end{vmatrix} + \hat{k} \begin{vmatrix} a_x & a_y \\ b_x & b_y \end{vmatrix}$$

$$= (a_y b_z - b_y a_z) \hat{i} + (a_z b_x - b_z a_x) \hat{j}$$

$$+ (a_x b_y - b_x a_y) \hat{k}$$



**CHECKPOINT 5** Vectors  $\vec{C}$  and  $\vec{D}$  have magnitudes of 3 units and 4 units, respectively. What is the angle between the directions of  $\vec{C}$  and  $\vec{D}$  if the magnitude of the vector product  $\vec{C} \times \vec{D}$  is (a) zero and (b) 12 units?

**Sample Problem 3-9**

If  $\vec{a} = 3\hat{i} - 4\hat{j}$  and  $\vec{b} = -2\hat{i} + 3\hat{k}$ , what is  $\vec{c} = \vec{a} \times \vec{b}$ ?